

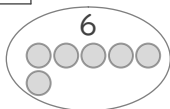
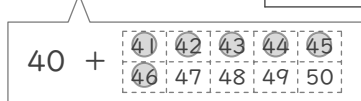
# たし算

年 組 名前

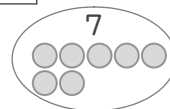
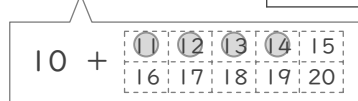
/18

■ 図を見ながら、たし算をしましょう。

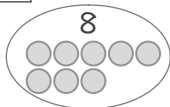
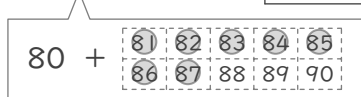
①  $46 + 6 =$



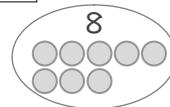
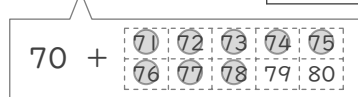
④  $14 + 7 =$



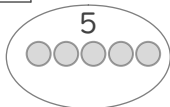
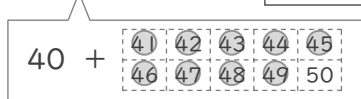
②  $87 + 8 =$



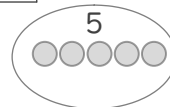
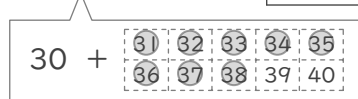
⑤  $78 + 8 =$



③  $49 + 5 =$



⑥  $38 + 5 =$



■ つぎの 四角に 数字をあてはめて、たし算をしましょう。

⑦  $34 + 8 =$    
たして 40

⑩  $57 + 9 =$    
たして 60

⑧  $89 + 9 =$    
たして 90

⑪  $29 + 4 =$    
たして 30

⑨  $77 + 7 =$    
たして 80

⑫  $47 + 6 =$    
たして 50

■ つぎの たし算の 答えに 丸(○)をつけましょう。

⑬  $52 + 9$

66

61

64

⑮  $13 + 8$

32

20

21

⑰  $76 + 9$

94

85

84

⑭  $67 + 5$

83

72

73

⑯  $25 + 6$

31

48

38

⑱  $68 + 9$

86

76

77

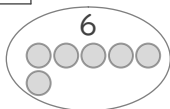
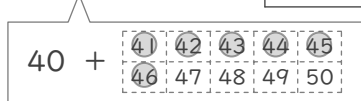
# たし算

年 組 名前

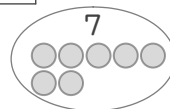
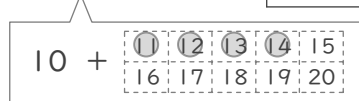
/18

■ 図を見ながら、たし算をしましょう。

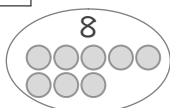
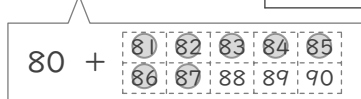
①  $46 + 6 = 52$



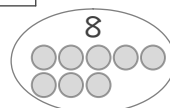
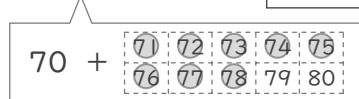
④  $14 + 7 = 21$



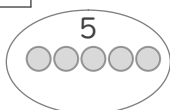
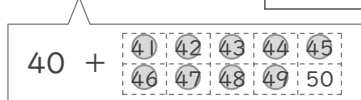
②  $87 + 8 = 95$



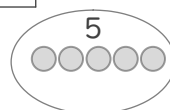
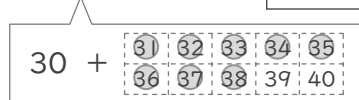
⑤  $78 + 8 = 86$



③  $49 + 5 = 54$



⑥  $38 + 5 = 43$



■ つぎの 四角に 数字をあてはめて、たし算をしましょう。

⑦  $34 + 8 = 42$



⑩  $57 + 9 = 66$



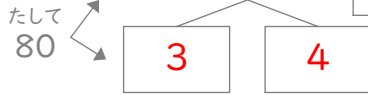
⑧  $89 + 9 = 98$



⑪  $29 + 4 = 33$



⑨  $77 + 7 = 84$



⑫  $47 + 6 = 53$



■ つぎの たし算の 答えに 丸(○)をつけましょう。

⑬  $52 + 9$



⑮  $13 + 8$



⑰  $76 + 9$



⑭  $67 + 5$



⑯  $25 + 6$



⑱  $68 + 9$

