

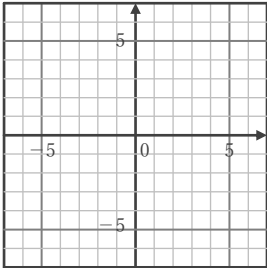
比例のグラフ

年 組 名前

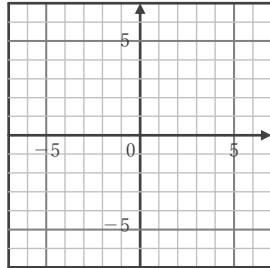
/16

■ 次の関数のグラフをかきなさい。

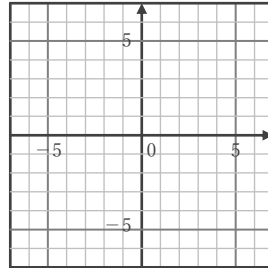
① $y = \frac{4}{3}x$



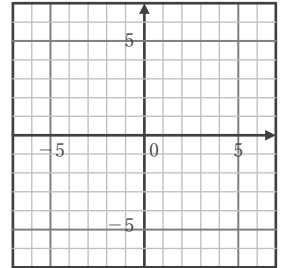
⑤ $y = -6x$



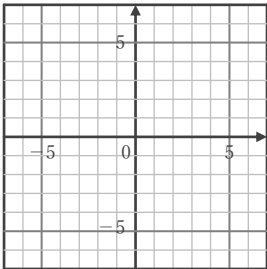
⑨ $y = \frac{1}{5}x$



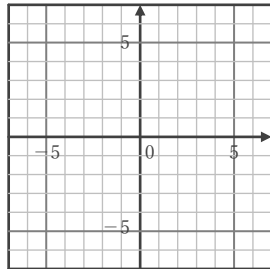
⑬ $y = \frac{3}{4}x$



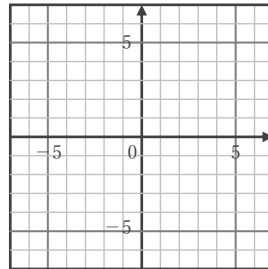
② $y = -2x$



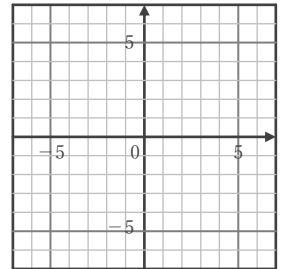
⑥ $y = \frac{2}{5}x$



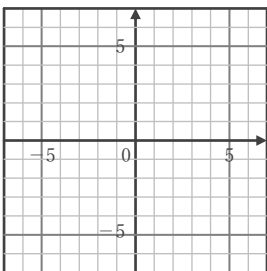
⑩ $y = -\frac{1}{3}x$



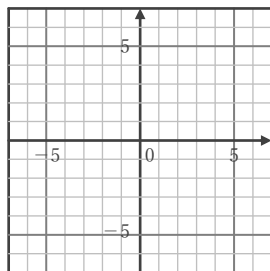
⑭ $y = -\frac{5}{4}x$



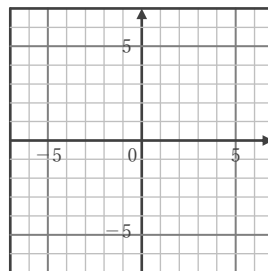
③ $y = -\frac{1}{2}x$



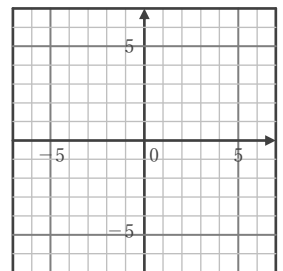
⑦ $y = \frac{4}{5}x$



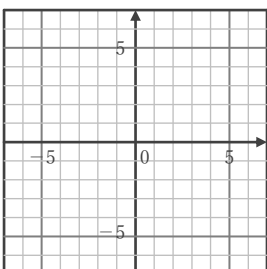
⑪ $y = -\frac{3}{2}x$



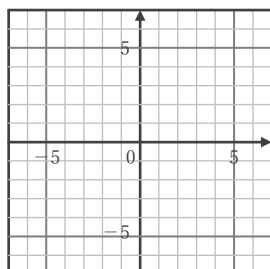
⑮ $y = 4x$



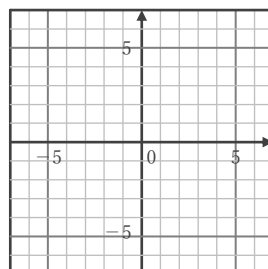
④ $y = \frac{2}{3}x$



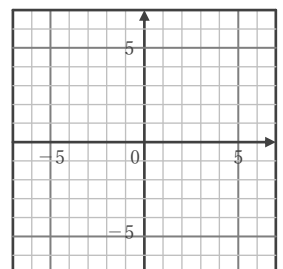
⑧ $y = -\frac{5}{3}x$



⑫ $y = \frac{3}{5}x$



⑯ $y = -\frac{6}{5}x$



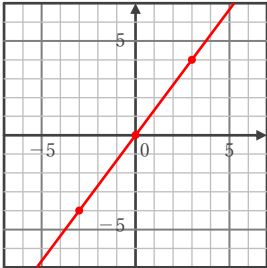
比例のグラフ

年 組 名前

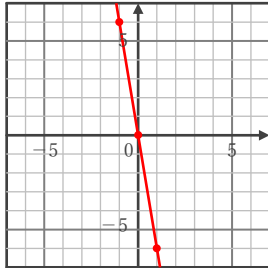
/16

■ 次の関数のグラフをかきなさい。

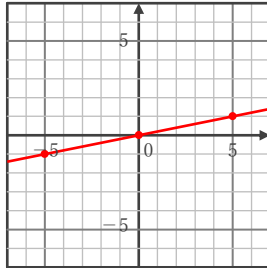
① $y = \frac{4}{3}x$



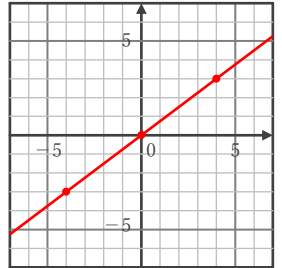
⑤ $y = -6x$



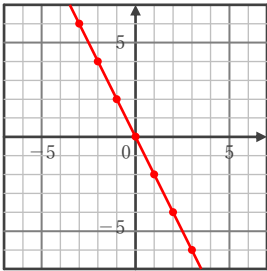
⑨ $y = \frac{1}{5}x$



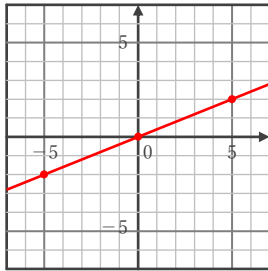
⑬ $y = \frac{3}{4}x$



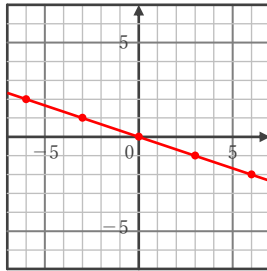
② $y = -2x$



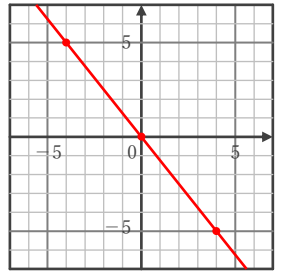
⑥ $y = \frac{2}{5}x$



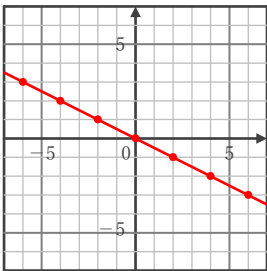
⑩ $y = -\frac{1}{3}x$



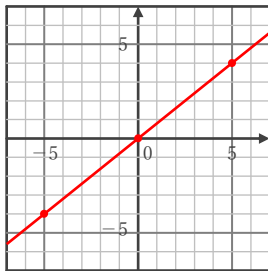
⑭ $y = -\frac{5}{4}x$



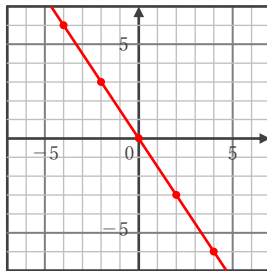
③ $y = -\frac{1}{2}x$



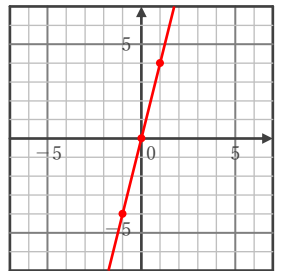
⑦ $y = \frac{4}{5}x$



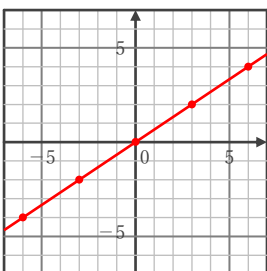
⑪ $y = -\frac{3}{2}x$



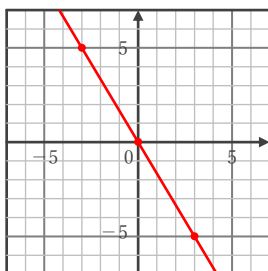
⑮ $y = 4x$



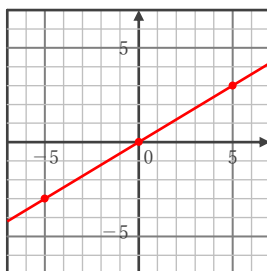
④ $y = \frac{2}{3}x$



⑧ $y = -\frac{5}{3}x$



⑫ $y = \frac{3}{5}x$



⑯ $y = -\frac{6}{5}x$

