

ひきざん(2)

ねん くみ
なまえ

/12

■ まきものを ヒントにして ひきざんを しましょう。

①

$$11 - 4 = \square$$

9+2
8+3
7+4
6+5
5+6
4+7
3+8
2+9

⑤

$$12 - 8 = \square$$

9+3
8+4
7+5
6+6
5+7
4+8
3+9

⑨

$$11 - 8 = \square$$

9+2
8+3
7+4
6+5
5+6
4+7
3+8
2+9

②

$$13 - 7 = \square$$

9+4
8+5
7+6
6+7
5+8
4+9

⑥

$$12 - 3 = \square$$

9+3
8+4
7+5
6+6
5+7
4+8
3+9

⑩

$$16 - 9 = \square$$

9+7
8+8
7+9

③

$$12 - 6 = \square$$

9+3
8+4
7+5
6+6
5+7
4+8
3+9

⑦

$$11 - 6 = \square$$

9+2
8+3
7+4
6+5
5+6
4+7
3+8
2+9

⑪

$$17 - 9 = \square$$

9+8
8+9

④

$$13 - 8 = \square$$

9+4
8+5
7+6
6+7
5+8
4+9

⑧

$$15 - 9 = \square$$

9+6
8+7
7+8
6+9

⑫

$$15 - 7 = \square$$

9+6
8+7
7+8
6+9

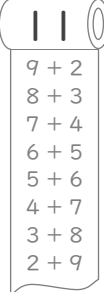
ひきざん(2)

ねん くみ
なまえ

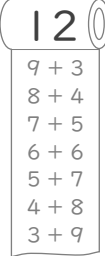
/12

■ まきものを ヒントにして ひきざんを しましょう。

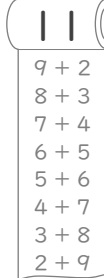
①

$$11 - 4 = 7$$


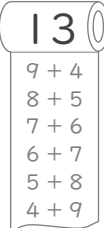
⑤

$$12 - 8 = 4$$


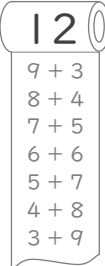
⑨

$$11 - 8 = 3$$


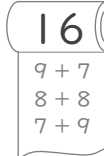
②

$$13 - 7 = 6$$


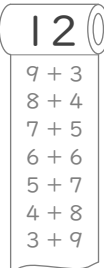
⑥

$$12 - 3 = 9$$


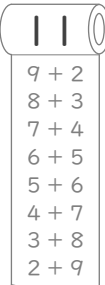
⑩

$$16 - 9 = 7$$



③

$$12 - 6 = 6$$


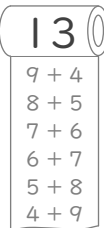
⑦

$$11 - 6 = 5$$


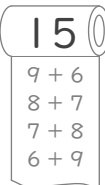
⑪

$$17 - 9 = 8$$


④

$$13 - 8 = 5$$


⑧

$$15 - 9 = 6$$


⑫

$$15 - 7 = 8$$
