

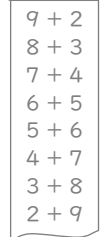
ひきざん(2)

ねん くみ
なまえ

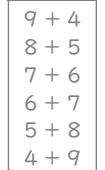
/12

■ まきものを ヒントにして ひきざんを しましょう。

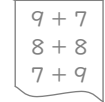
①

$$11 - 6 = \square$$


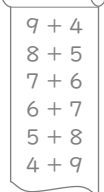
⑤

$$13 - 4 = \square$$



⑨

$$16 - 9 = \square$$



②

$$13 - 7 = \square$$


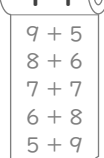
⑥

$$12 - 4 = \square$$



⑩

$$16 - 8 = \square$$



③

$$14 - 7 = \square$$


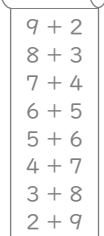
⑦

$$14 - 9 = \square$$



⑪

$$15 - 6 = \square$$



④

$$11 - 9 = \square$$


⑧

$$12 - 6 = \square$$


⑫

$$15 - 8 = \square$$


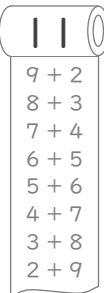
ひきざん(2)

ねん くみ
なまえ


/12

■ まきものを ヒントにして ひきざんを しましょう。

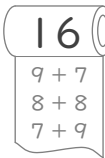
①

$$11 - 6 = 5$$


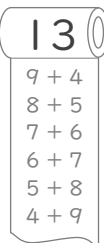
⑤

$$13 - 4 = 9$$


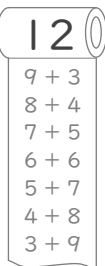
⑨

$$16 - 9 = 7$$



②

$$13 - 7 = 6$$


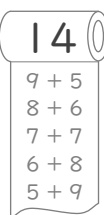
⑥

$$12 - 4 = 8$$



⑩

$$16 - 8 = 8$$



③

$$14 - 7 = 7$$


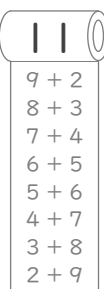
⑦

$$14 - 9 = 5$$


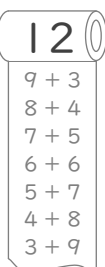
⑪

$$15 - 6 = 9$$


④

$$11 - 9 = 2$$


⑧

$$12 - 6 = 6$$


⑫

$$15 - 8 = 7$$
