

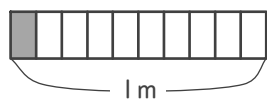
分数

年 組 名前

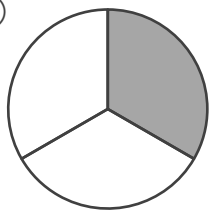
/16

■ 色がついたところの 大きさや 長さ、かさを 分数で 答えましょう。

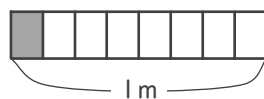
①


 m

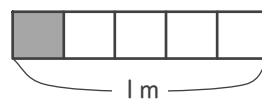
⑤



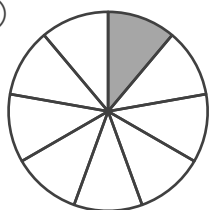
⑨


 m

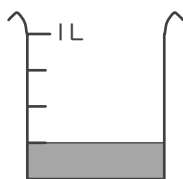
⑬


 m

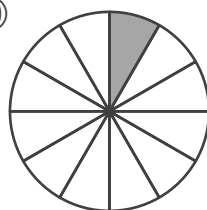
②



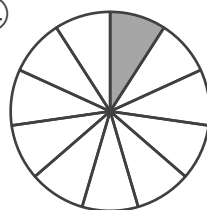
⑥


 L

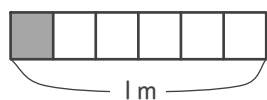
⑩



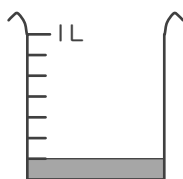
⑭



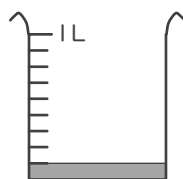
③


 m

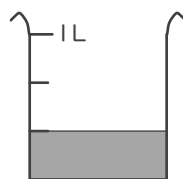
⑦


 L

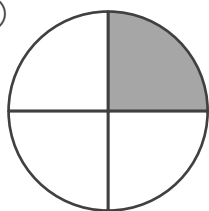
⑪


 L

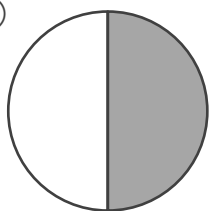
⑮


 L

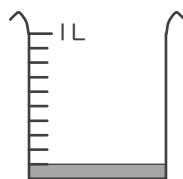
④



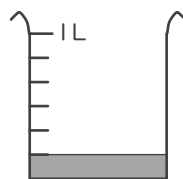
⑧



⑫

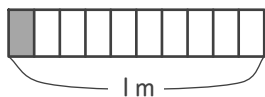

 L

⑯


 L

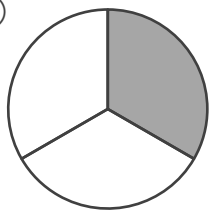
■ 色がついたところの 大きさや 長さ、かさを 分数で 答えましょう。

①



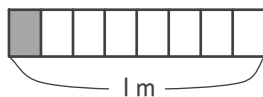
$\frac{1}{10}$ m

⑤



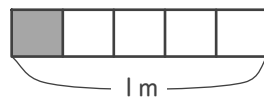
$\frac{1}{3}$

⑨



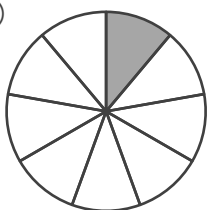
$\frac{1}{8}$ m

⑬



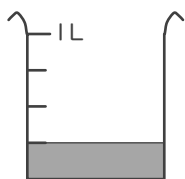
$\frac{1}{5}$ m

②



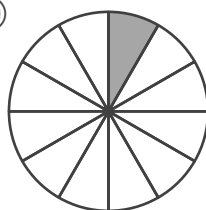
$\frac{1}{9}$

⑥



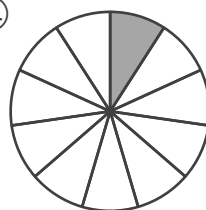
$\frac{1}{4}$ L

⑩



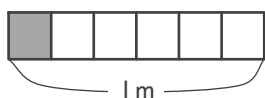
$\frac{1}{12}$

⑭



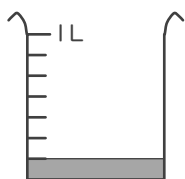
$\frac{1}{11}$

③



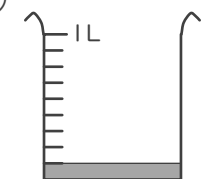
$\frac{1}{6}$ m

⑦



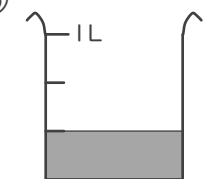
$\frac{1}{7}$ L

⑪



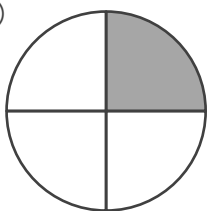
$\frac{1}{9}$ L

⑮



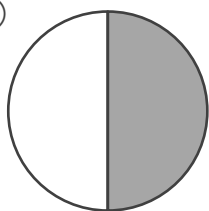
$\frac{1}{3}$ L

④



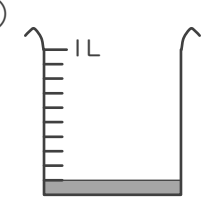
$\frac{1}{4}$

⑧



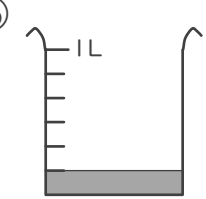
$\frac{1}{2}$

⑫



$\frac{1}{10}$ L

⑯



$\frac{1}{6}$ L