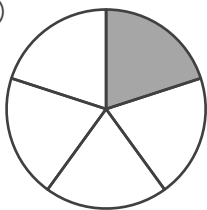
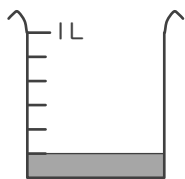


■ 色がついたところの 大きさや 長さ、かさを 分数で 答えましょう。

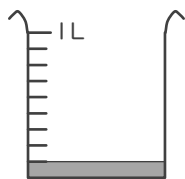
①



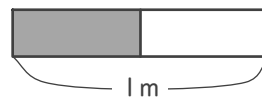
⑤


 L

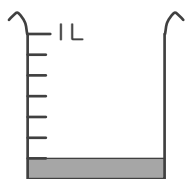
⑨


 L

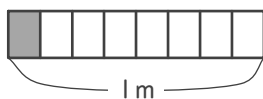
⑬


 m

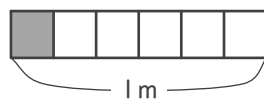
②


 L

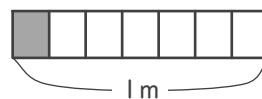
⑥


 m

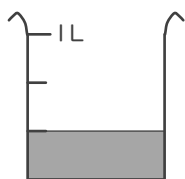
⑩


 m

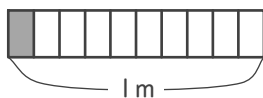
⑭


 m

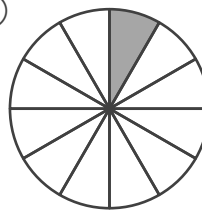
③


 L

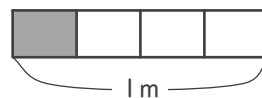
⑦


 m

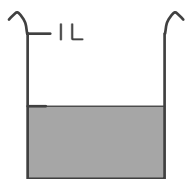
⑪



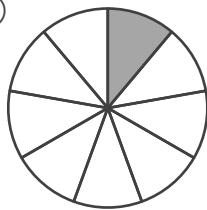
⑮


 m

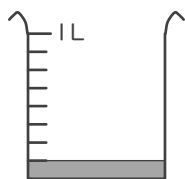
④


 L

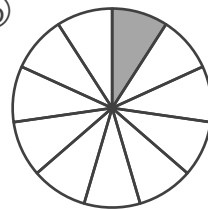
⑧



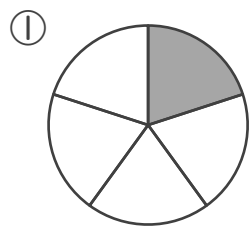
⑫


 L

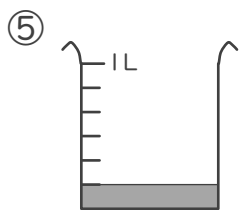
⑯



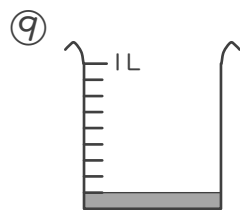
■ 色がついたところの 大きさや 長さ、かさを 分数で 答えましょう。



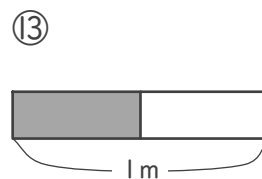
$\frac{1}{5}$



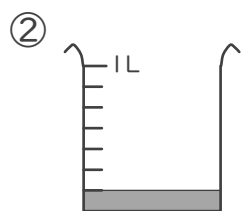
$\frac{1}{6}$ L



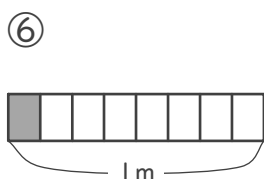
$\frac{1}{9}$ L



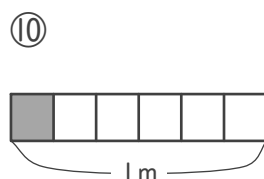
$\frac{1}{2}$ m



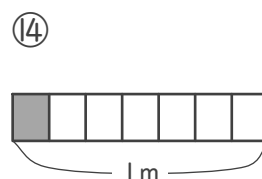
$\frac{1}{7}$ L



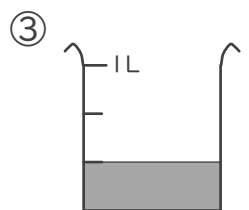
$\frac{1}{8}$ m



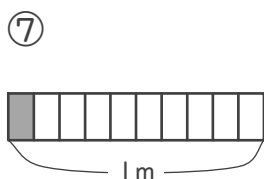
$\frac{1}{6}$ m



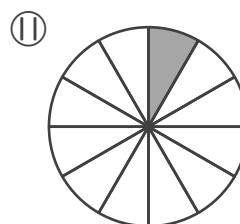
$\frac{1}{7}$ m



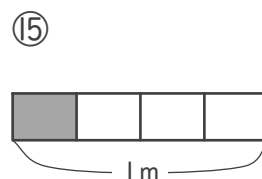
$\frac{1}{3}$ L



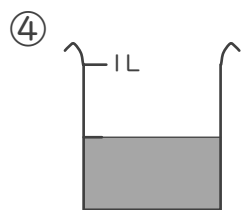
$\frac{1}{10}$ m



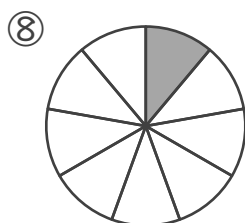
$\frac{1}{12}$



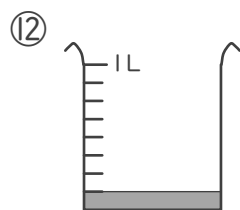
$\frac{1}{4}$ m



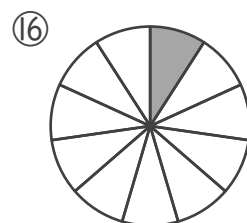
$\frac{1}{2}$ L



$\frac{1}{9}$



$\frac{1}{8}$ L



$\frac{1}{11}$