

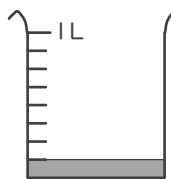
分数

年 組 名前

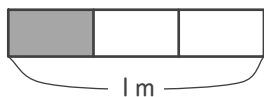
/16

■ 色がついたところの 大きさや 長さ、かさを 分数で 答えましょう。

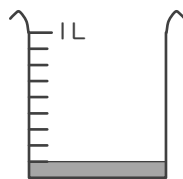
①


 L

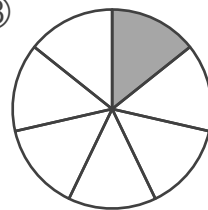
⑤


 m

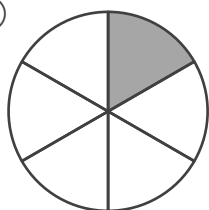
⑨


 L

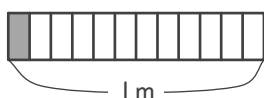
⑬



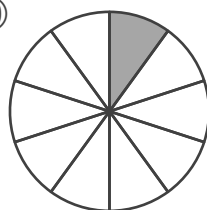
②



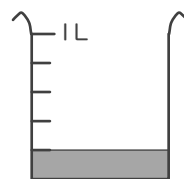
⑥


 m

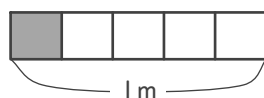
⑩



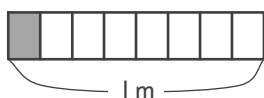
⑭


 L

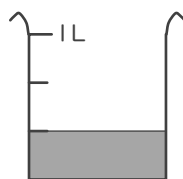
③


 m

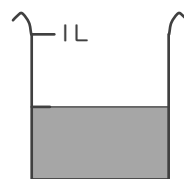
⑦


 m

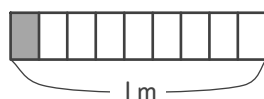
⑪


 L

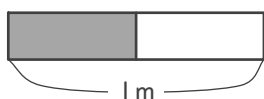
⑮


 L

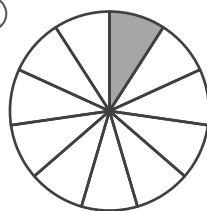
④


 m

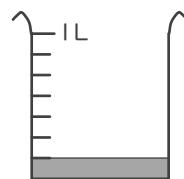
⑧


 m

⑫

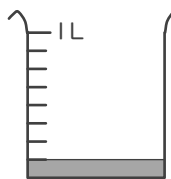


⑯


 L

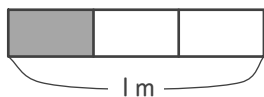
■ 色がついたところの 大きさや 長さ、かさを 分数で 答えましょう。

①



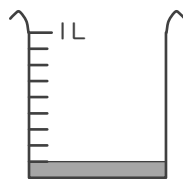
$\frac{1}{8}$ L

⑤



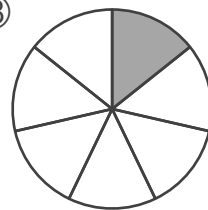
$\frac{1}{3}$ m

⑨



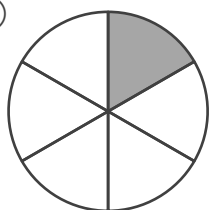
$\frac{1}{9}$ L

⑬



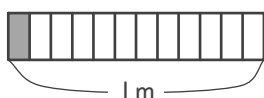
$\frac{1}{7}$

②



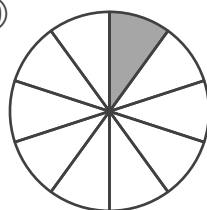
$\frac{1}{6}$

⑥



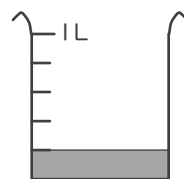
$\frac{1}{12}$ m

⑩



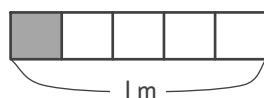
$\frac{1}{10}$

⑭



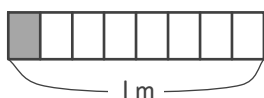
$\frac{1}{5}$ L

③



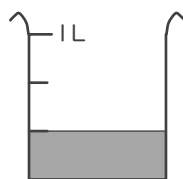
$\frac{1}{5}$ m

⑦



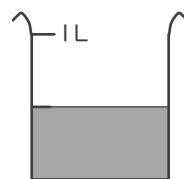
$\frac{1}{8}$ m

⑪



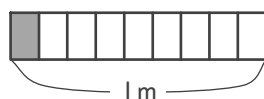
$\frac{1}{3}$ L

⑮



$\frac{1}{2}$ L

④



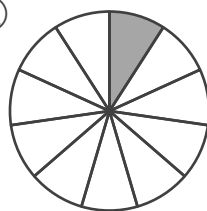
$\frac{1}{9}$ m

⑧



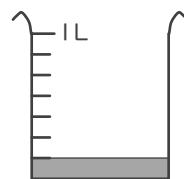
$\frac{1}{2}$ m

⑫



$\frac{1}{11}$

⑯



$\frac{1}{7}$ L