

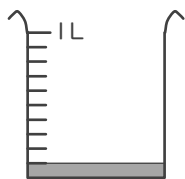
分数

年 組 名前

/16

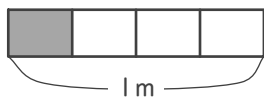
■ 色がついたところの 大きさや 長さ、かさを 分数で 答えましょう。

①



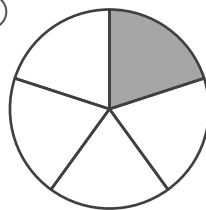
L

⑤

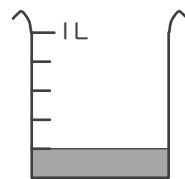


m

⑨

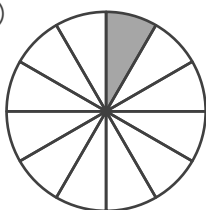


⑬

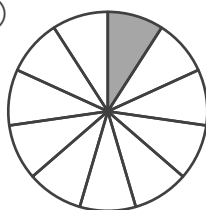


L

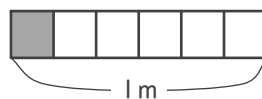
②



⑥

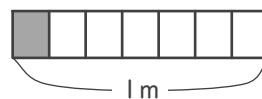


⑩



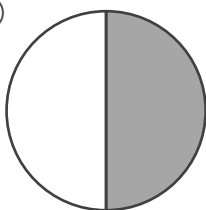
m

⑭

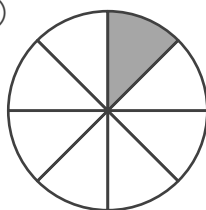


m

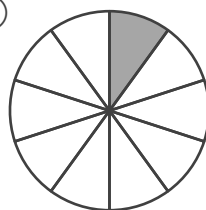
③



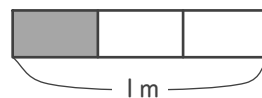
⑦



⑪

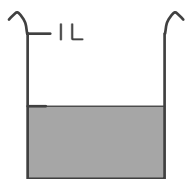


⑮



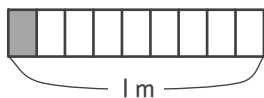
m

④



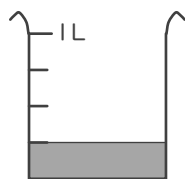
L

⑧



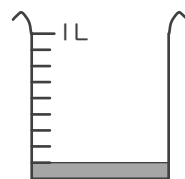
m

⑫



L

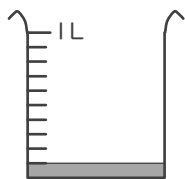
⑯



L

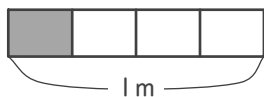
■ 色がついたところの 大きさや 長さ、かさを 分数で 答えましょう。

①



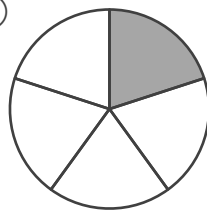
$\frac{1}{10}$ L

⑤



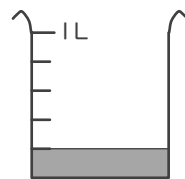
$\frac{1}{4}$ m

⑨



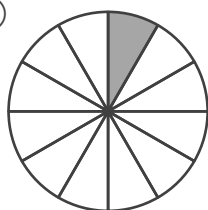
$\frac{1}{5}$

⑬



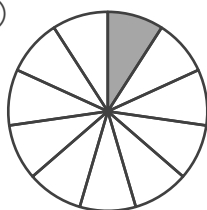
$\frac{1}{5}$ L

②



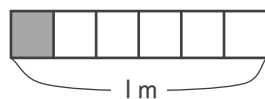
$\frac{1}{12}$

⑥



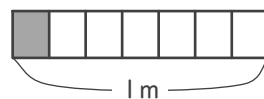
$\frac{1}{11}$

⑩



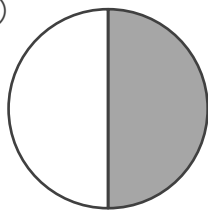
$\frac{1}{6}$ m

⑭



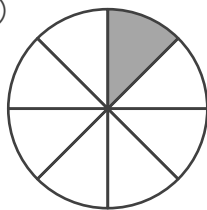
$\frac{1}{7}$ m

③



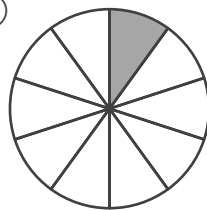
$\frac{1}{2}$

⑦



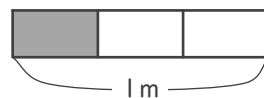
$\frac{1}{8}$

⑪



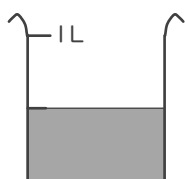
$\frac{1}{10}$

⑮



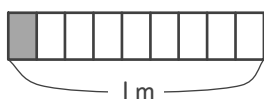
$\frac{1}{3}$ m

④



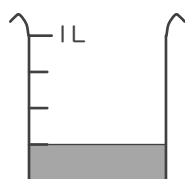
$\frac{1}{2}$ L

⑧



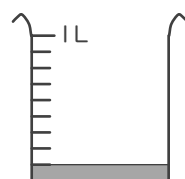
$\frac{1}{9}$ m

⑫



$\frac{1}{4}$ L

⑯



$\frac{1}{9}$ L