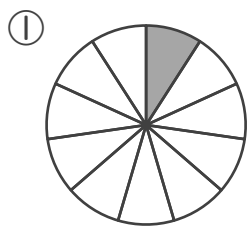


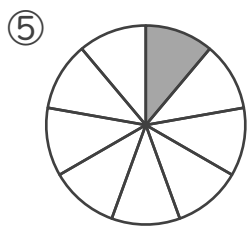
分数

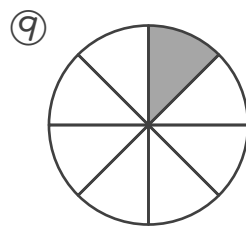
年 組 名前

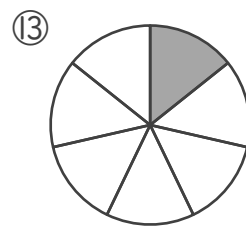
/16

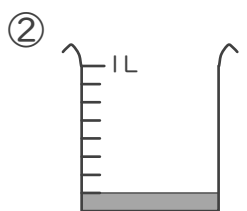
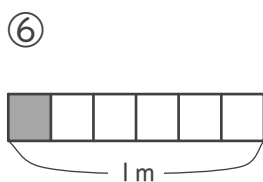
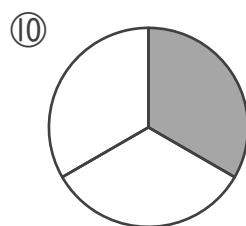
■ 色がついたところの 大きさや 長さ、かさを 分数で 答えましょう。

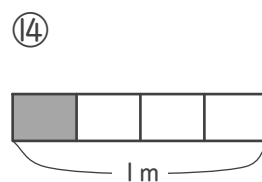
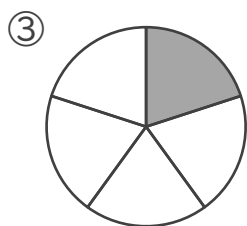


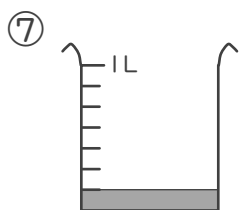
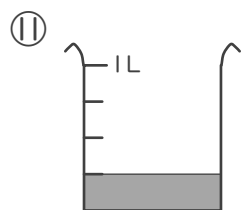
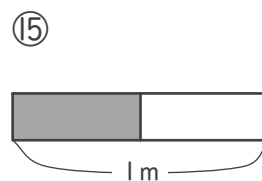
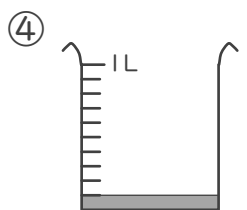
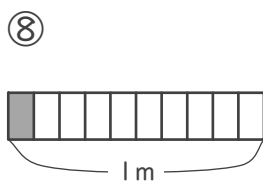
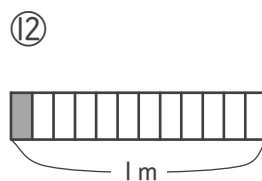
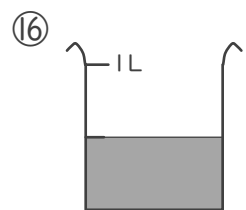




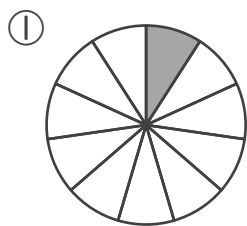



 L

 m


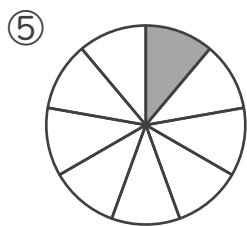

 m



 L

 L

 m

 L

 m

 m

 L

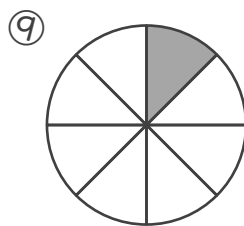
■ 色がついたところの 大きさや 長さ、かさを 分数で 答えましょう。



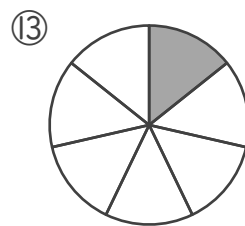
$$\frac{1}{11}$$



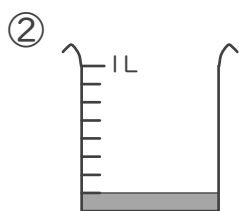
$$\frac{1}{9}$$



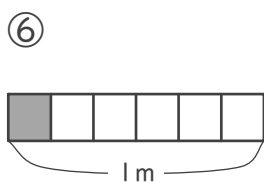
$$\frac{1}{8}$$



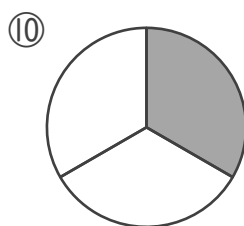
$$\frac{1}{7}$$



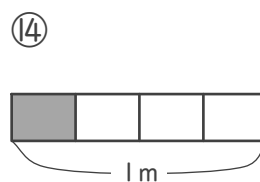
$$\frac{1}{8} \text{ L}$$



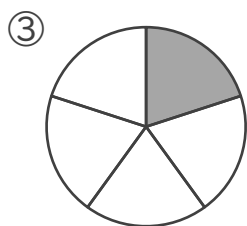
$$\frac{1}{6} \text{ m}$$



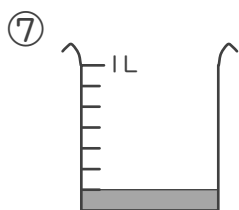
$$\frac{2}{3}$$



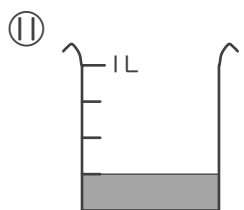
$$\frac{1}{4} \text{ m}$$



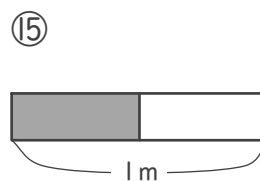
$$\frac{2}{5}$$



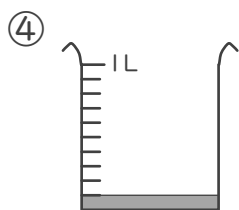
$$\frac{1}{7} \text{ L}$$



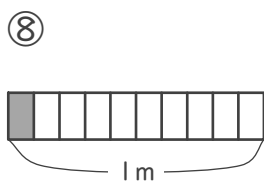
$$\frac{1}{4} \text{ L}$$



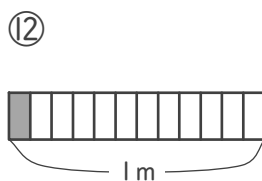
$$\frac{1}{2} \text{ m}$$



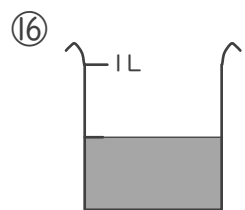
$$\frac{1}{10} \text{ L}$$



$$\frac{1}{10} \text{ m}$$



$$\frac{1}{12} \text{ m}$$



$$\frac{1}{2} \text{ L}$$