

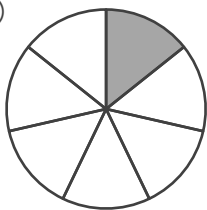
# 分数

年 組 名前

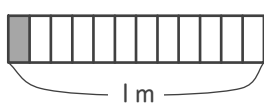
/16

■ 色がついたところの 大きさや 長さ、かさを 分数で 答えましょう。

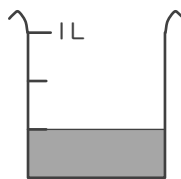
①



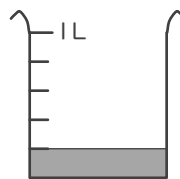

⑤


 m

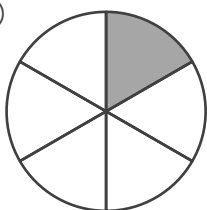
⑨


 L

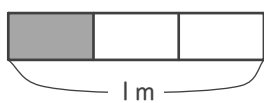
⑬


 L

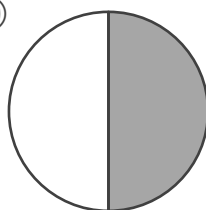
②



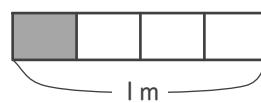

⑥


 m

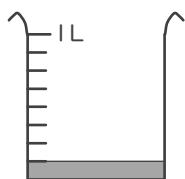
⑩



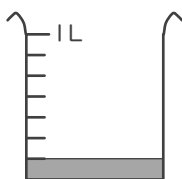

⑭


 m

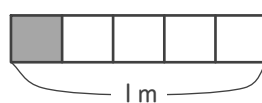
③


 L

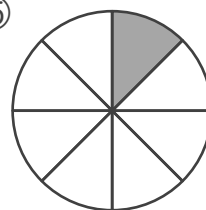
⑦


 L

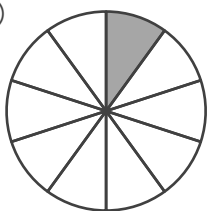
⑪


 m

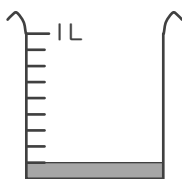
⑮



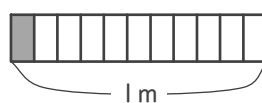

④



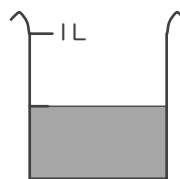

⑧


 L

⑫

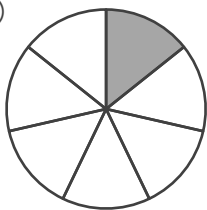

 m

⑯


 L

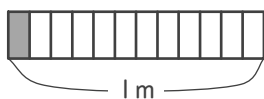
■ 色がついたところの 大きさや 長さ、かさを 分数で 答えましょう。

①



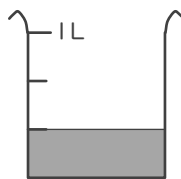
$\frac{1}{7}$

⑤



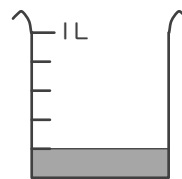
$\frac{1}{12}$  m

⑨



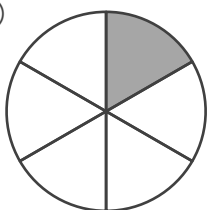
$\frac{1}{3}$  L

⑬



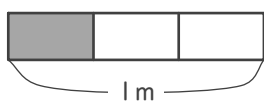
$\frac{1}{5}$  L

②



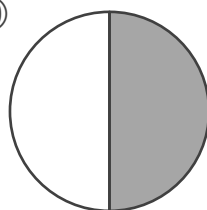
$\frac{1}{6}$

⑥



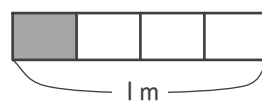
$\frac{1}{3}$  m

⑩



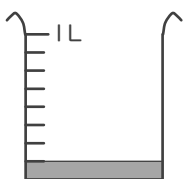
$\frac{1}{2}$

⑭



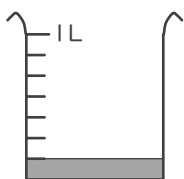
$\frac{1}{4}$  m

③



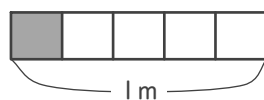
$\frac{1}{8}$  L

⑦



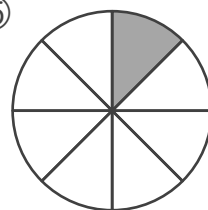
$\frac{1}{7}$  L

⑪



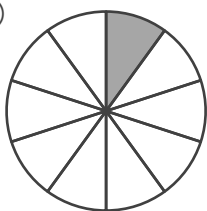
$\frac{1}{5}$  m

⑮



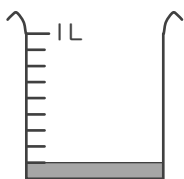
$\frac{1}{8}$

④



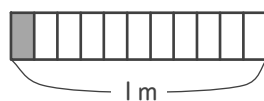
$\frac{1}{10}$

⑧



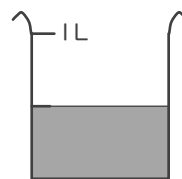
$\frac{1}{9}$  L

⑫



$\frac{1}{11}$  m

⑯



$\frac{1}{2}$  L