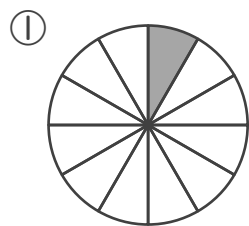


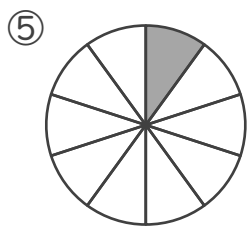
分数

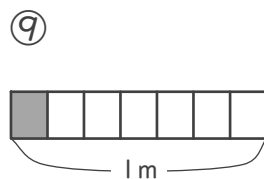
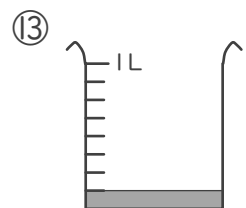
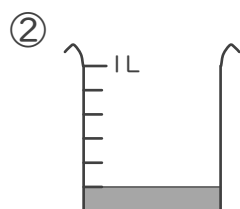
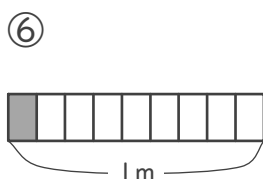
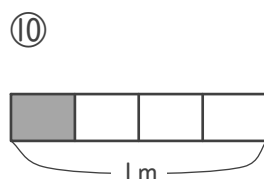
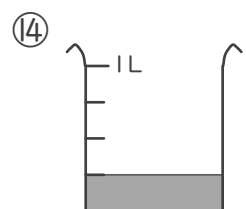
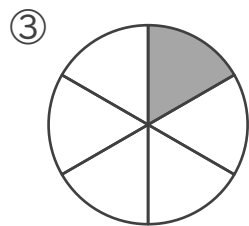
年 組 名前

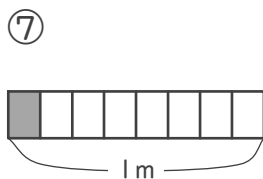
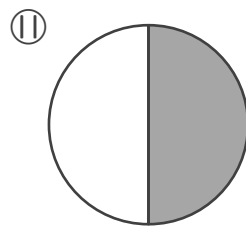
/16

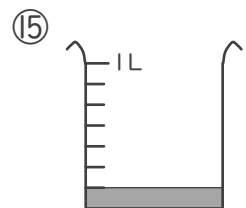
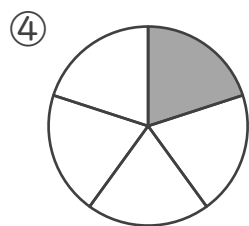
■ 色がついたところの 大きさや 長さ、かさを 分数で 答えましょう。

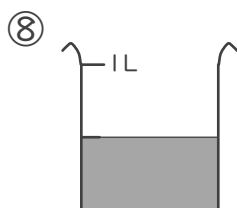
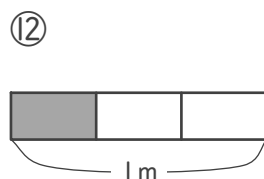
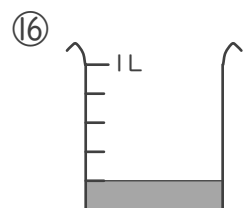





 m

 L

 L

 m

 m

 L



 m



 L


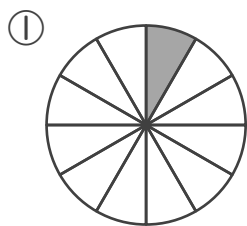

 L

 m

 L

分数

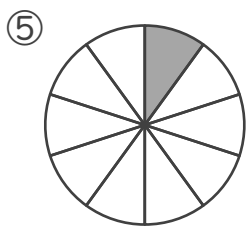
年 組 名前

/16

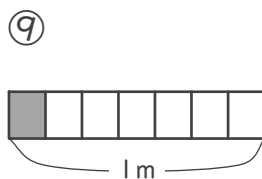
■ 色がついたところの 大きさや 長さ、かさを 分数で 答えましょう。



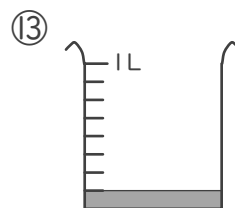
$\frac{1}{12}$



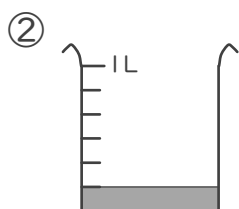
$\frac{1}{10}$



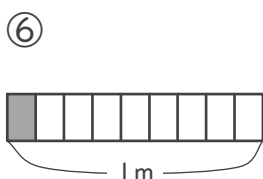
$\frac{1}{7}$ m



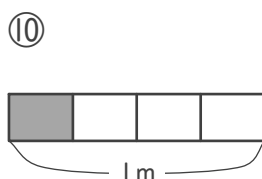
$\frac{1}{8}$ L



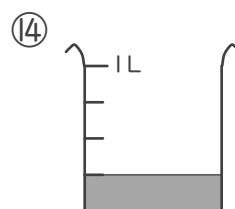
$\frac{1}{6}$ L



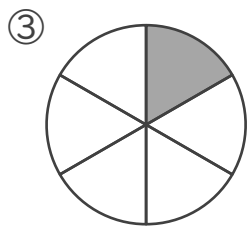
$\frac{1}{9}$ m



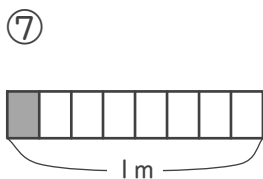
$\frac{1}{4}$ m



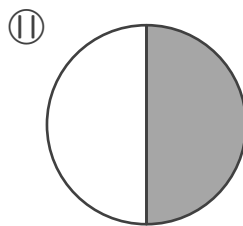
$\frac{1}{4}$ L



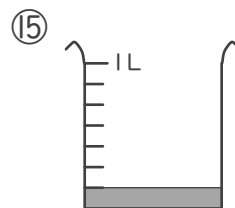
$\frac{1}{6}$



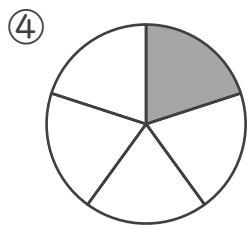
$\frac{1}{8}$ m



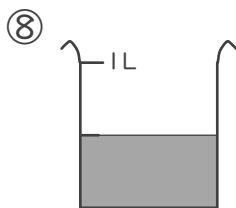
$\frac{1}{2}$



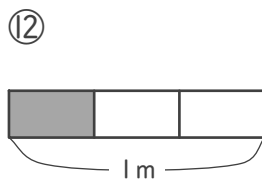
$\frac{1}{7}$ L



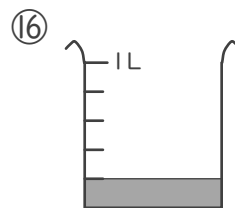
$\frac{1}{5}$



$\frac{1}{2}$ L



$\frac{1}{3}$ m



$\frac{1}{5}$ L