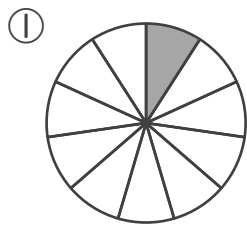


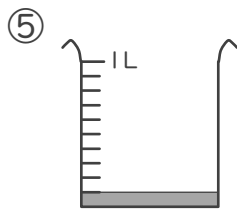
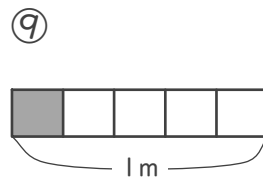
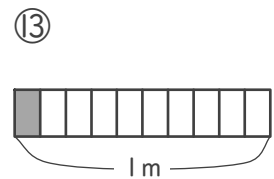
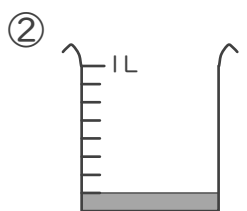
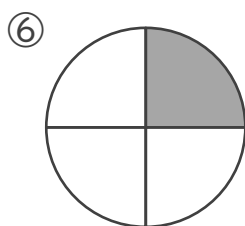
# 分数

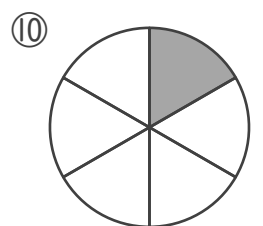
年 組 名前

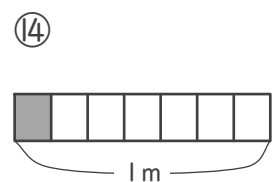
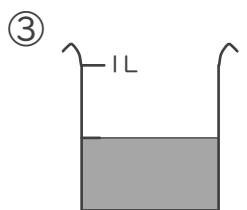
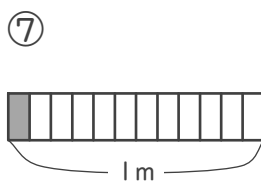
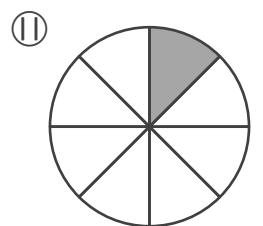
/16

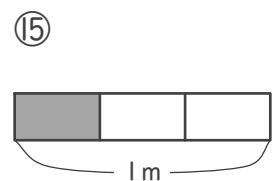
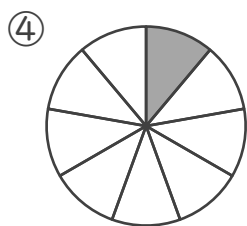
■ 色がついたところの 大きさや 長さ、かさを 分数で 答えましょう。

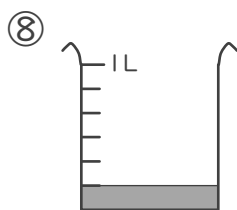
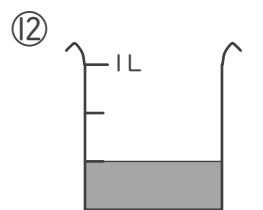
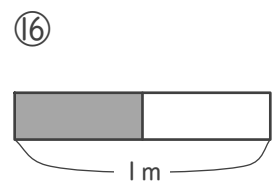



 L

 m

 m

 L





 m

 L

 m



 m


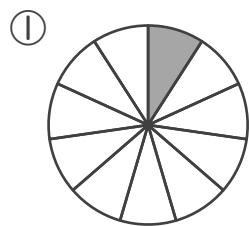

 L

 L

 m

# 分数

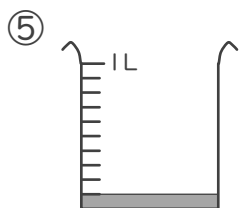
年 組 名前

/16

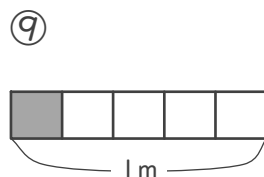
■ 色がついたところの 大きさや 長さ、かさを 分数で 答えましょう。



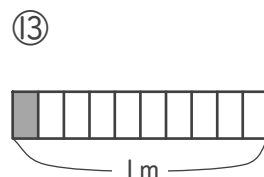
$\frac{1}{11}$



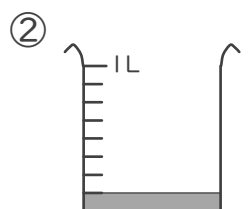
$\frac{1}{10}$  L



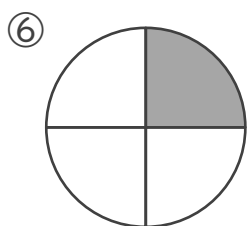
$\frac{1}{5}$  m



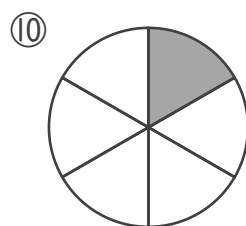
$\frac{1}{10}$  m



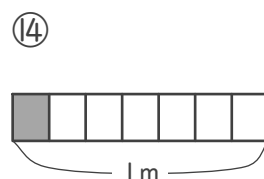
$\frac{1}{8}$  L



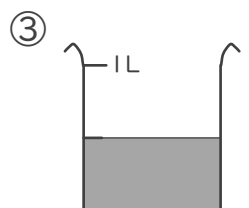
$\frac{1}{4}$



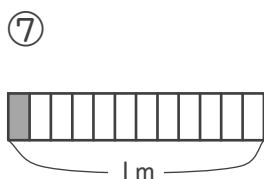
$\frac{1}{6}$



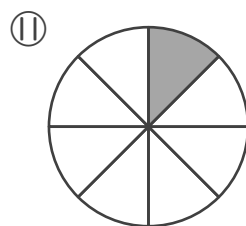
$\frac{1}{7}$  m



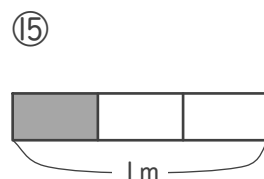
$\frac{1}{2}$  L



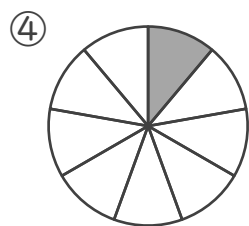
$\frac{1}{12}$  m



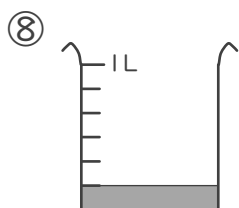
$\frac{1}{8}$



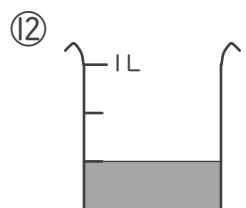
$\frac{1}{3}$  m



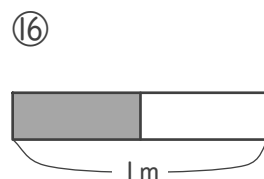
$\frac{1}{9}$



$\frac{1}{6}$  L



$\frac{1}{3}$  L



$\frac{1}{2}$  m