

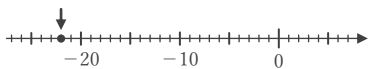
正負の数

年 組 名前

/21

■ 次の数直線上に矢印で示した点の値を + や - を使って表しなさい。

①



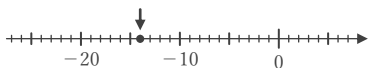
②



③



④



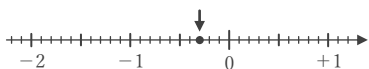
⑤



⑥



⑦



⑧



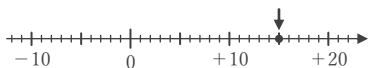
⑨



⑩



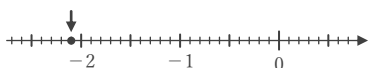
⑪



⑫



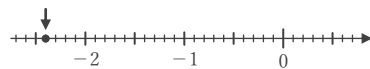
⑬



⑭



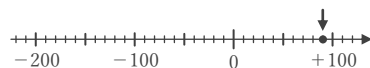
⑮



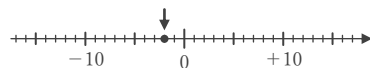
⑯



⑰



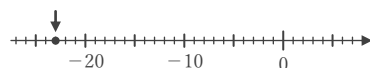
⑱



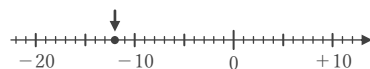
⑲



⑳



㉑



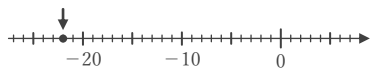
正負の数

年 組 名前

/21

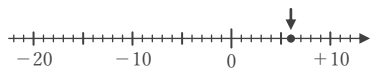
■ 次の数直線上に矢印で示した点の値を + や - を使って表しなさい。

①



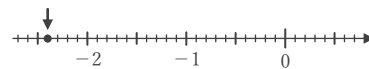
-22

⑧



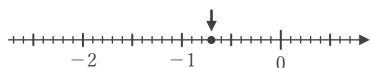
+6

⑮



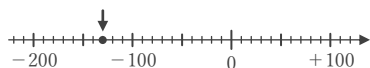
-2.4

②



-0.7

⑨



-130

⑯



-1.7

③



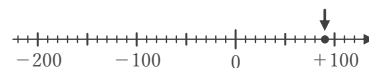
-0.1

⑩



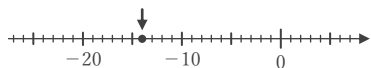
-1.8

⑰



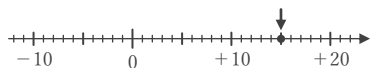
+90

④



-14

⑪



+15

⑱



-2

⑤



+110

⑫



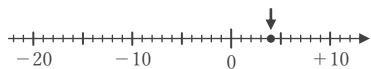
-80

⑲



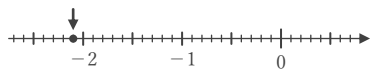
+1.6

⑥



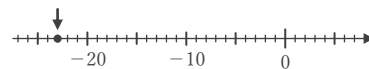
+4

⑬



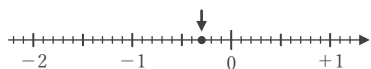
-2.1

⑳



-23

⑦




-0.3

⑭



-19

㉑



-12