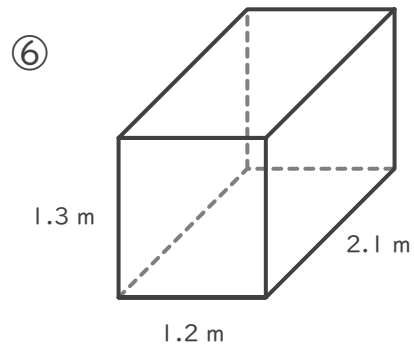
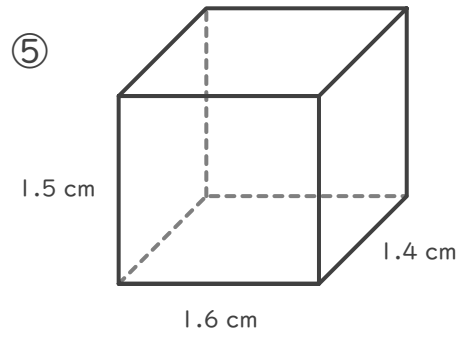
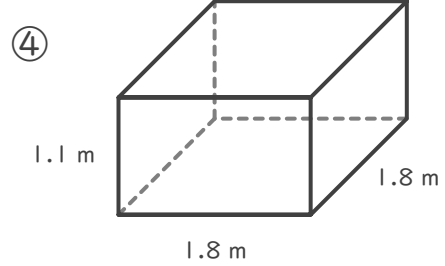
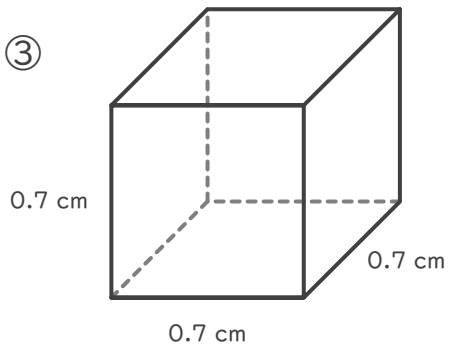
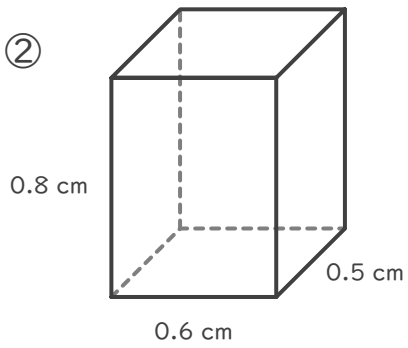
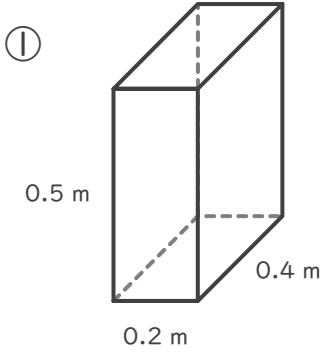
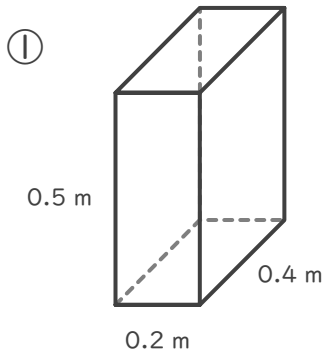


■ 次の直方体や立方体の体積を求めましょう。

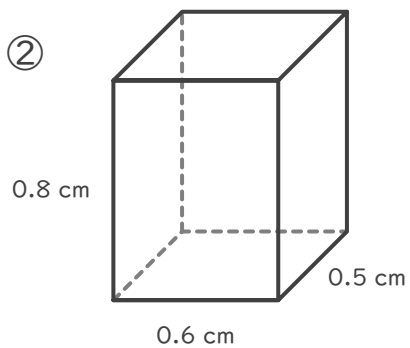


■ 次の直方体や立方体の体積を求めましょう。



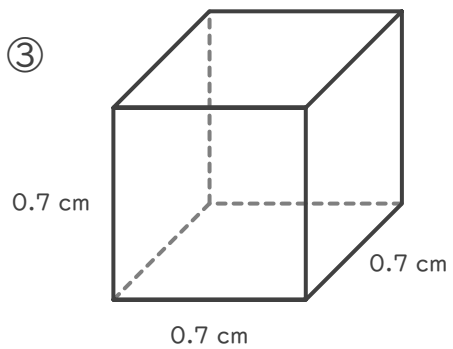
$$0.4 \times 0.2 \times 0.5 = 0.04$$

$$0.04 \text{ m}^3$$



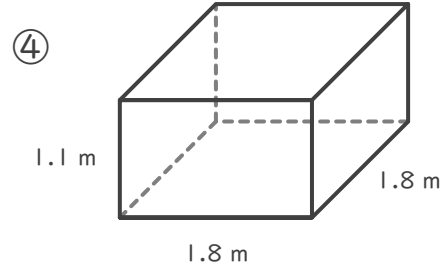
$$0.5 \times 0.6 \times 0.8 = 0.24$$

$$0.24 \text{ cm}^3$$



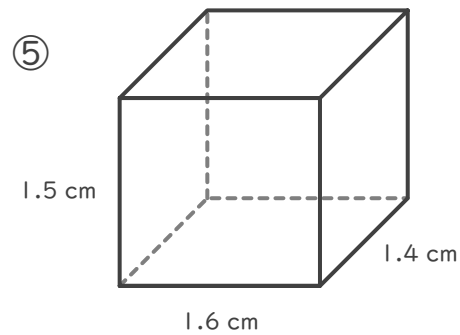
$$0.7 \times 0.7 \times 0.7 = 0.343$$

$$0.343 \text{ cm}^3$$



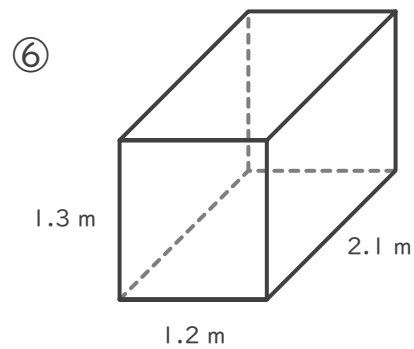
$$1.8 \times 1.8 \times 1.1 = 3.564$$

$$3.564 \text{ m}^3$$



$$1.4 \times 1.6 \times 1.5 = 3.36$$

$$3.36 \text{ cm}^3$$



$$2.1 \times 1.2 \times 1.3 = 3.276$$

$$3.276 \text{ m}^3$$