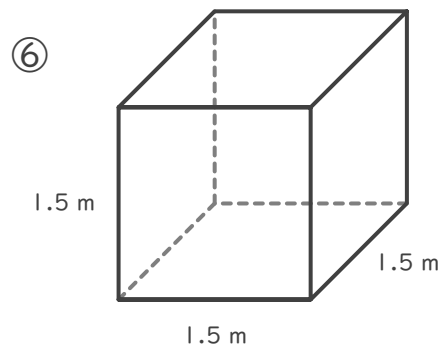
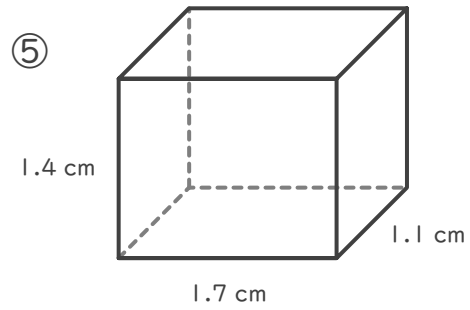
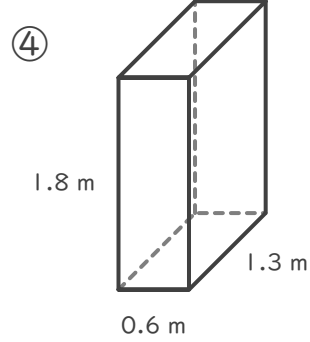
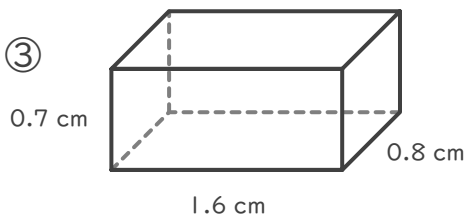
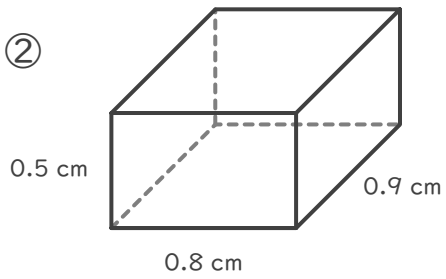
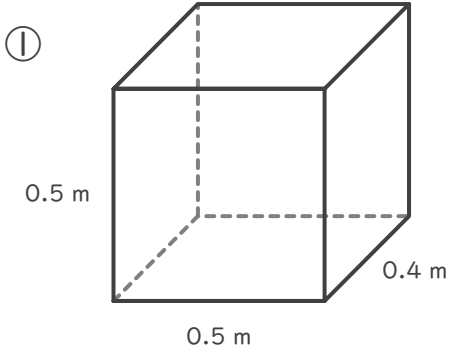
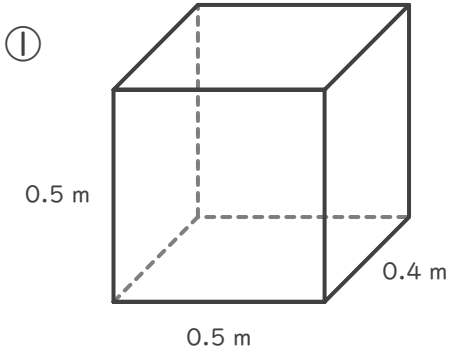


■ 次の直方体や立方体の体積を求めましょう。

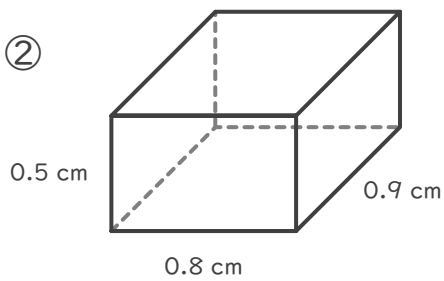


■ 次の直方体や立方体の体積を求めましょう。



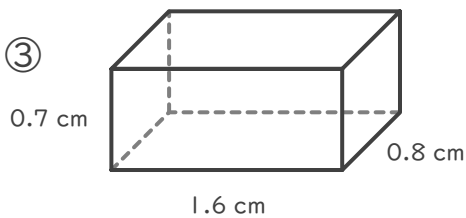
$$0.4 \times 0.5 \times 0.5 = 0.1$$

$$0.1 \text{ m}^3$$



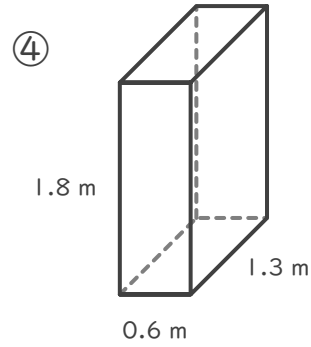
$$0.9 \times 0.8 \times 0.5 = 0.36$$

$$0.36 \text{ cm}^3$$



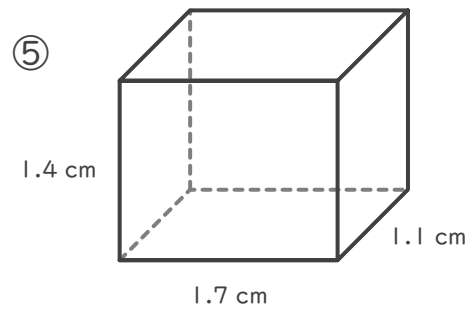
$$0.8 \times 1.6 \times 0.7 = 0.896$$

$$0.896 \text{ cm}^3$$



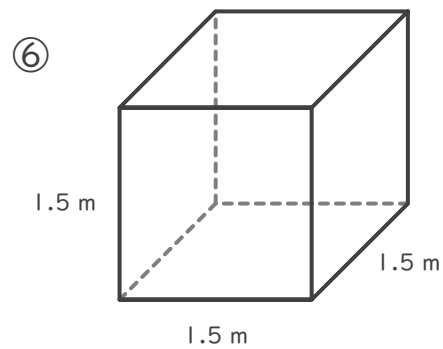
$$1.3 \times 0.6 \times 1.8 = 1.404$$

$$1.404 \text{ m}^3$$



$$1.1 \times 1.7 \times 1.4 = 2.618$$

$$2.618 \text{ cm}^3$$



$$1.5 \times 1.5 \times 1.5 = 3.375$$

$$3.375 \text{ m}^3$$