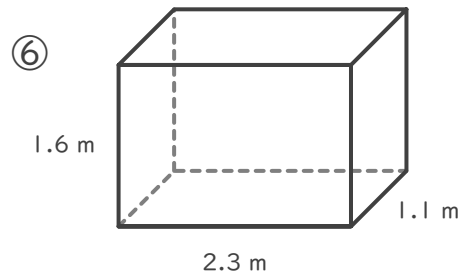
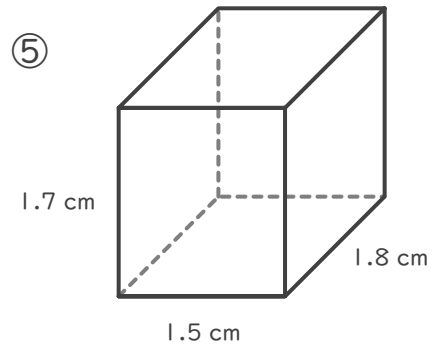
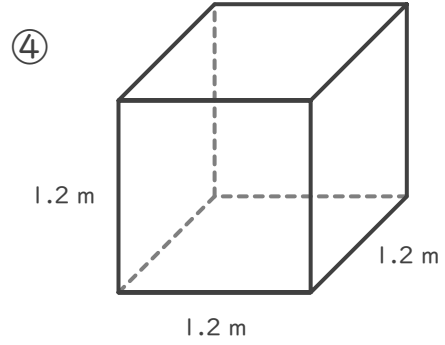
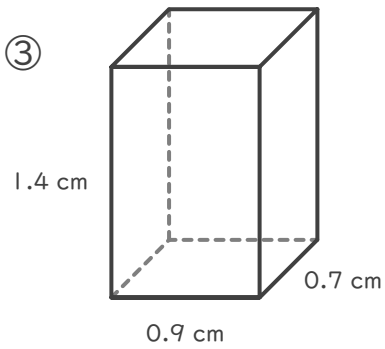
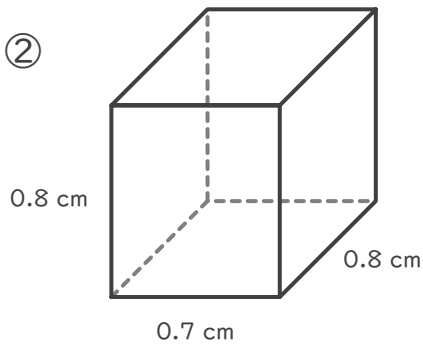
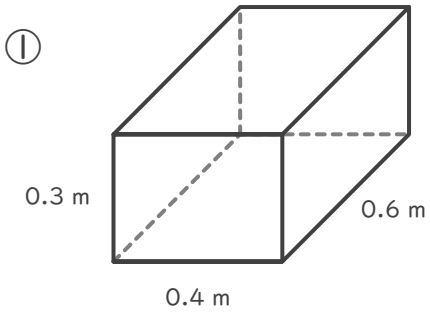
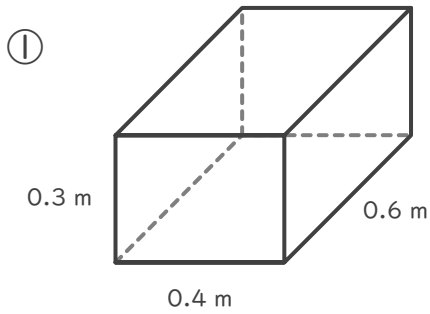


■ 次の直方体や立方体の体積を求めましょう。

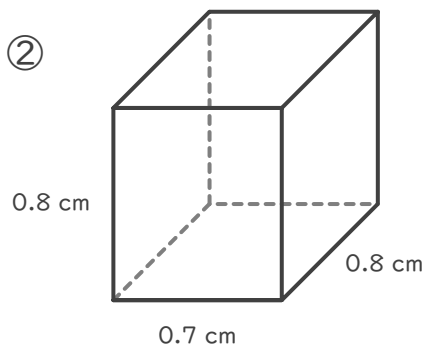


■ 次の直方体や立方体の体積を求めましょう。



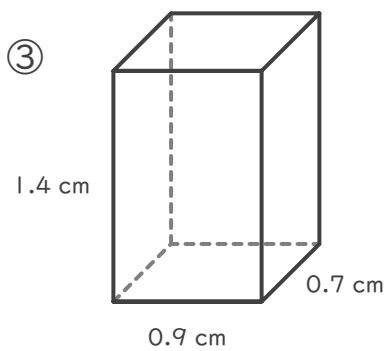
$$0.6 \times 0.4 \times 0.3 = 0.072$$

$$0.072 \text{ m}^3$$



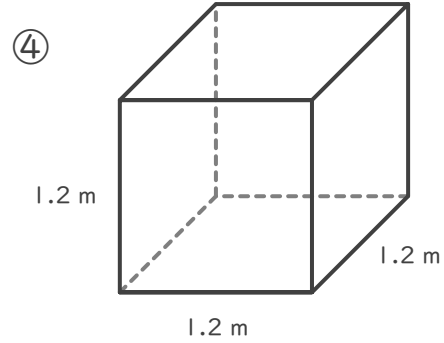
$$0.8 \times 0.7 \times 0.8 = 0.448$$

$$0.448 \text{ cm}^3$$



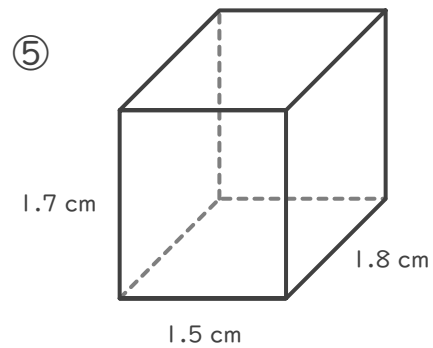
$$0.7 \times 0.9 \times 1.4 = 0.882$$

$$0.882 \text{ cm}^3$$



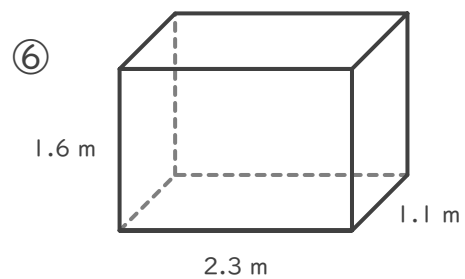
$$1.2 \times 1.2 \times 1.2 = 1.728$$

$$1.728 \text{ m}^3$$



$$1.8 \times 1.5 \times 1.7 = 4.59$$

$$4.59 \text{ cm}^3$$



$$1.1 \times 2.3 \times 1.6 = 4.048$$

$$4.048 \text{ m}^3$$