

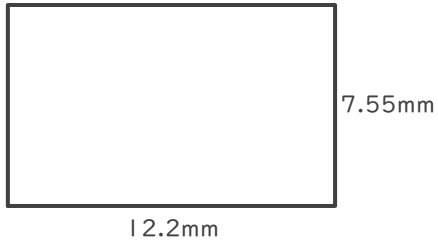
長方形の面積

年 組 名前

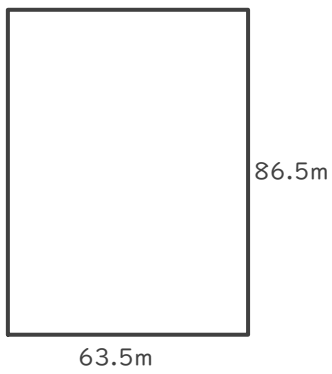
/ 4

■ 次の長方形の面積を求めましょう。

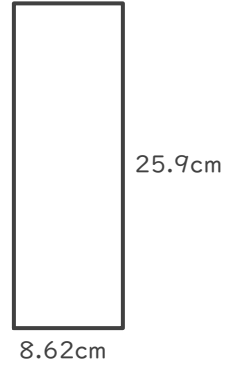
①



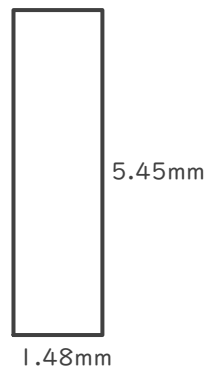
②



③



④



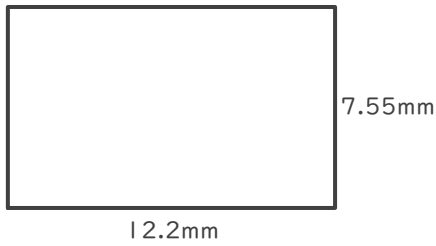
長方形の面積

年 組 名前

/ 4

■ 次の長方形の面積を求めましょう。

①



$$7.55 \times 12.2 = 92.11$$

$$\begin{array}{r} 7.55 \\ \times 12.2 \\ \hline 1510 \\ 1510 \\ 755 \\ \hline 92.11 \end{array}$$

$$92.11 \text{ mm}^2$$

③

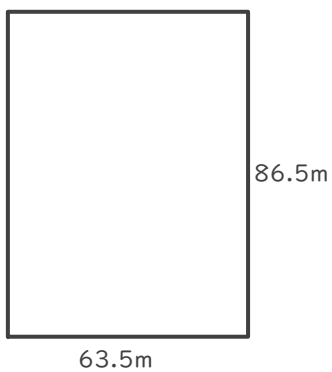


$$25.9 \times 8.62 = 223.258$$

$$\begin{array}{r} 25.9 \\ \times 8.62 \\ \hline 518 \\ 1554 \\ 2072 \\ \hline 223.258 \end{array}$$

$$223.258 \text{ cm}^2$$

②



$$86.5 \times 63.5 = 5492.75$$

$$\begin{array}{r} 86.5 \\ \times 63.5 \\ \hline 4325 \\ 2595 \\ 5190 \\ \hline 5492.75 \end{array}$$

$$5492.75 \text{ m}^2$$

④



$$5.45 \times 1.48 = 8.066$$

$$\begin{array}{r} 5.45 \\ \times 1.48 \\ \hline 4360 \\ 2180 \\ 545 \\ \hline 8.066 \end{array}$$

$$8.066 \text{ mm}^2$$