

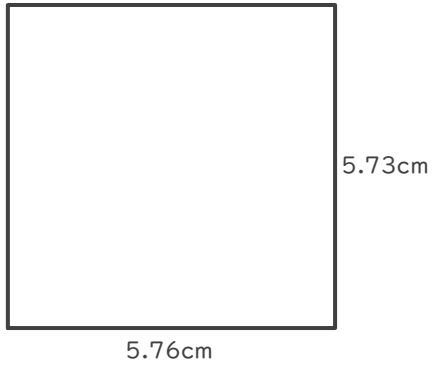
長方形の面積

年 組 名前

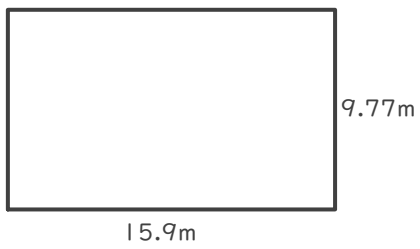
/ 4

■ 次の長方形の面積を求めましょう。

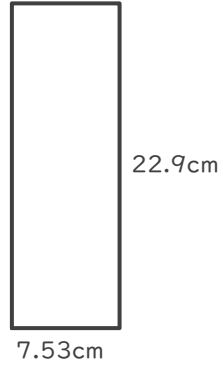
①



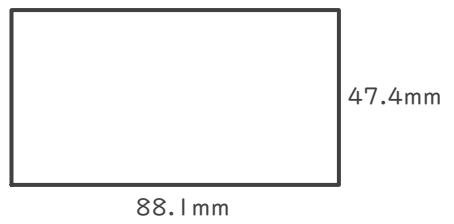
②



③



④



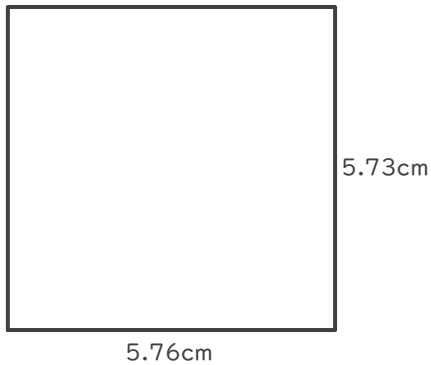
長方形の面積

年 組 名前

/ 4

■ 次の長方形の面積を求めましょう。

①

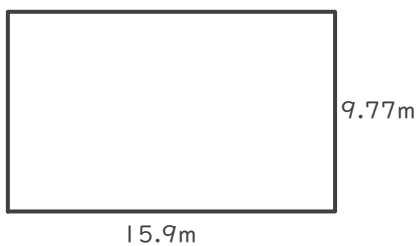


$$5.73 \times 5.76 = 33.0048$$

$$\begin{array}{r} 5.73 \\ \times 5.76 \\ \hline 3438 \\ 4011 \\ 2865 \\ \hline 33.0048 \end{array}$$

$$33.0048 \text{ cm}^2$$

②

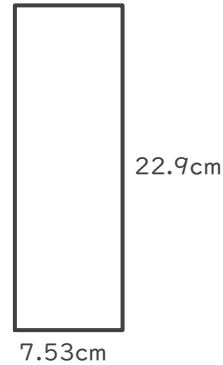


$$9.77 \times 15.9 = 155.343$$

$$\begin{array}{r} 9.77 \\ \times 15.9 \\ \hline 8793 \\ 4885 \\ 977 \\ \hline 155.343 \end{array}$$

$$155.343 \text{ m}^2$$

③

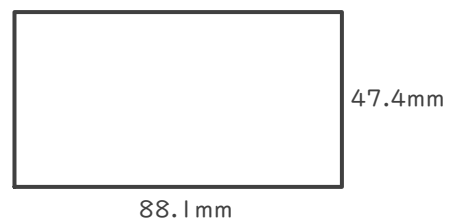


$$22.9 \times 7.53 = 172.437$$

$$\begin{array}{r} 22.9 \\ \times 7.53 \\ \hline 687 \\ 1145 \\ 1603 \\ \hline 172.437 \end{array}$$

$$172.437 \text{ cm}^2$$

④



$$47.4 \times 88.1 = 4175.94$$

$$\begin{array}{r} 47.4 \\ \times 88.1 \\ \hline 474 \\ 3792 \\ 3792 \\ \hline 4175.94 \end{array}$$

$$4175.94 \text{ mm}^2$$