

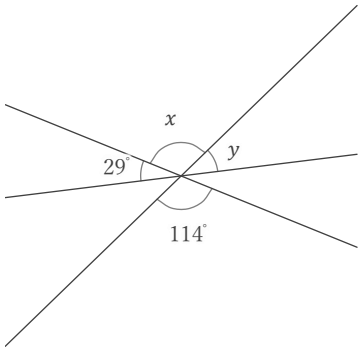
対頂角

年 組 名前

/ 9

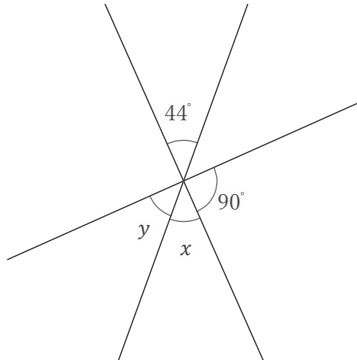
■ 次の x, y の角の大きさをそれぞれ答えなさい。

①



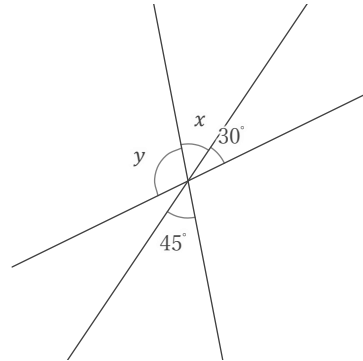
$x =$ $y =$

②



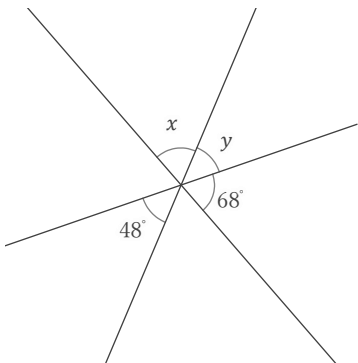
$x =$ $y =$

③



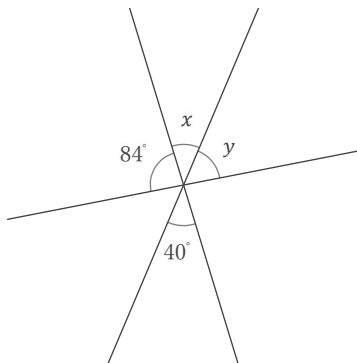
$x =$ $y =$

④



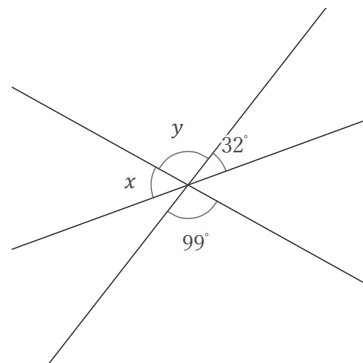
$x =$ $y =$

⑤



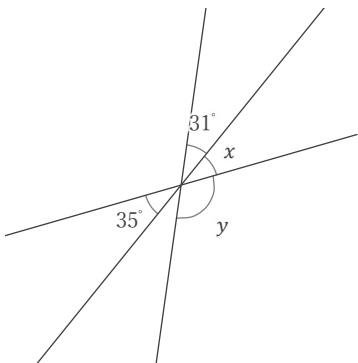
$x =$ $y =$

⑥



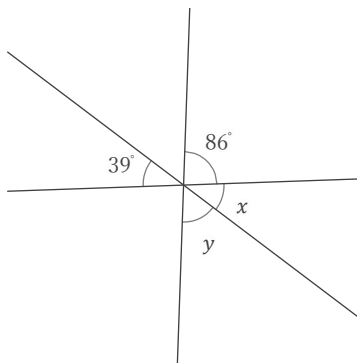
$x =$ $y =$

⑦



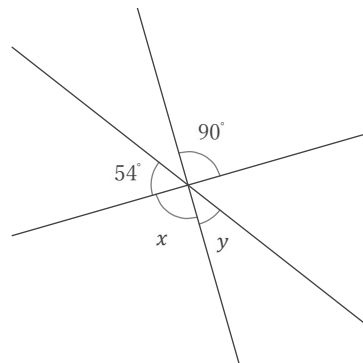
$x =$ $y =$

⑧



$x =$ $y =$

⑨



$x =$ $y =$

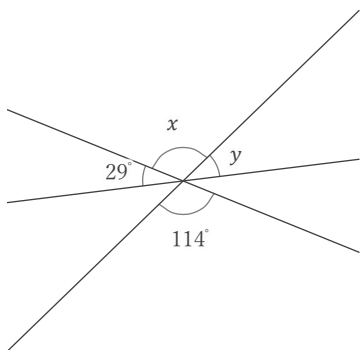
対頂角

年 組 名前

/ 9

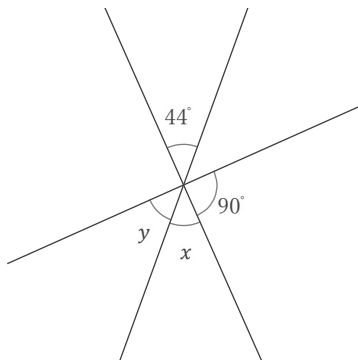
■ 次の x, y の角の大きさをそれぞれ答えなさい。

①



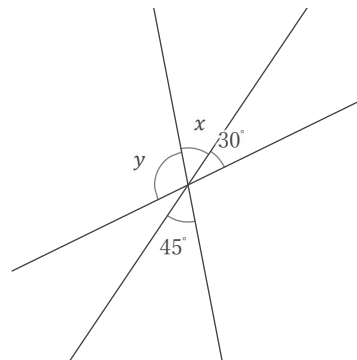
$x = 114^\circ$ $y = 37^\circ$

②



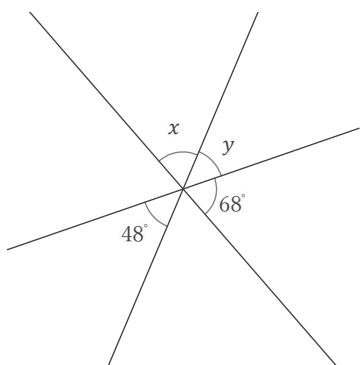
$x = 44^\circ$ $y = 46^\circ$

③



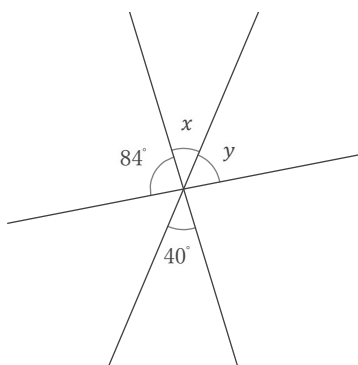
$x = 45^\circ$ $y = 105^\circ$

④



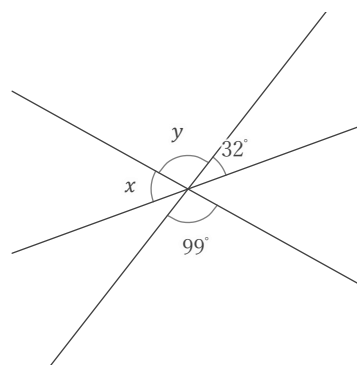
$x = 64^\circ$ $y = 48^\circ$

⑤



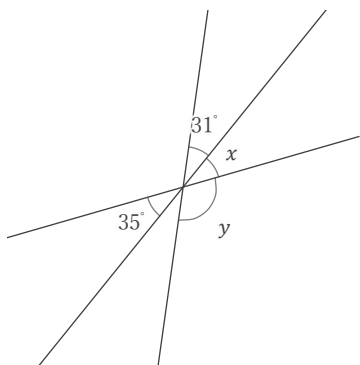
$x = 40^\circ$ $y = 56^\circ$

⑥



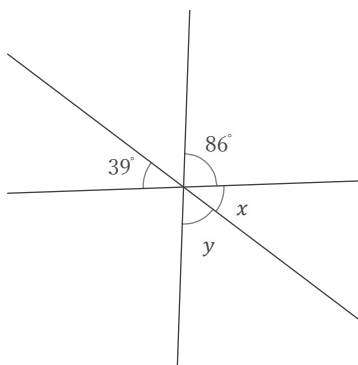
$x = 49^\circ$ $y = 99^\circ$

⑦



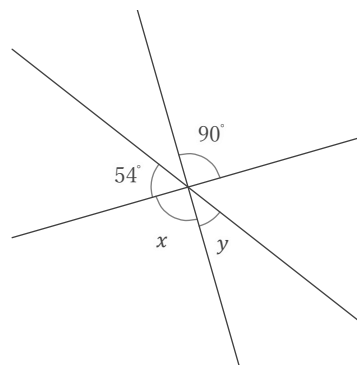
$x = 35^\circ$ $y = 114^\circ$

⑧



$x = 39^\circ$ $y = 55^\circ$

⑨



$x = 90^\circ$ $y = 36^\circ$