

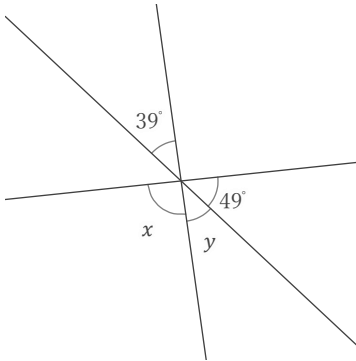
対頂角

____年 ____組 名前

/ 9

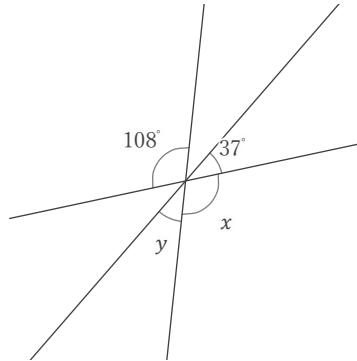
■ 次の x, y の角の大きさをそれぞれ答えなさい。

①



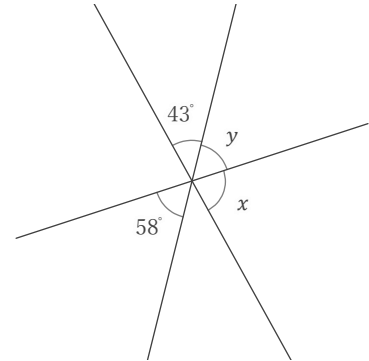
$x =$ $y =$

②



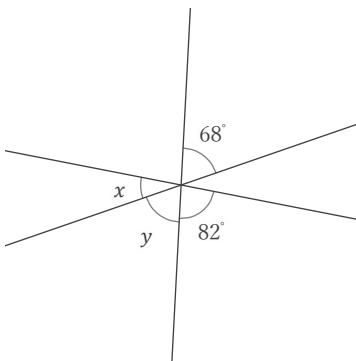
$x =$ $y =$

③



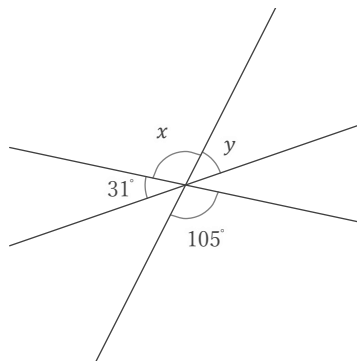
$x =$ $y =$

④



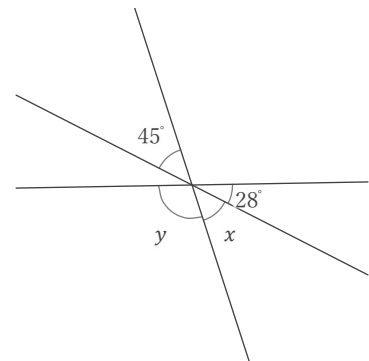
$x =$ $y =$

⑤



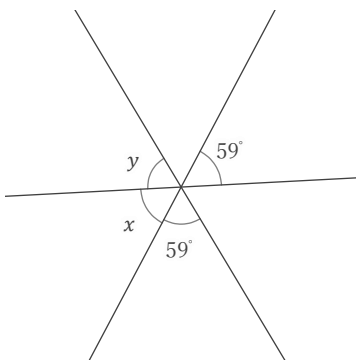
$x =$ $y =$

⑥



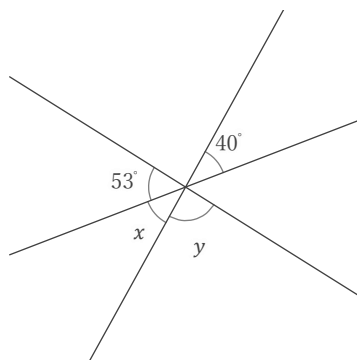
$x =$ $y =$

⑦



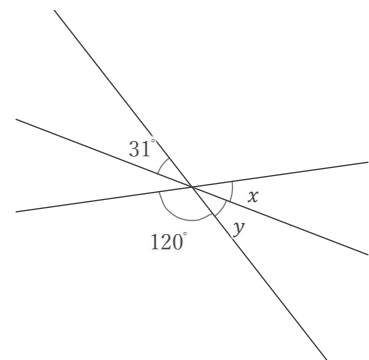
$x =$ $y =$

⑧



$x =$ $y =$

⑨



$x =$ $y =$

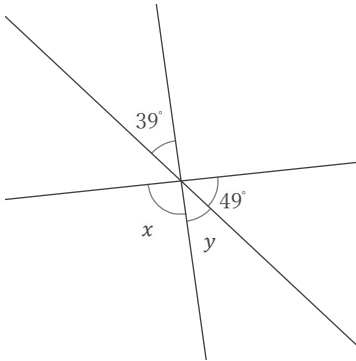
対頂角

年 組 名前

/ 9

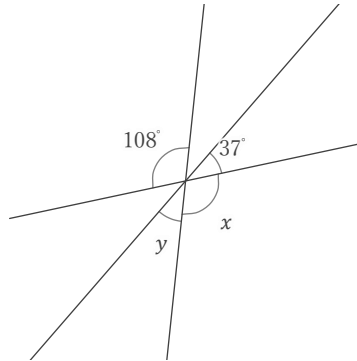
■ 次の x, y の角の大きさをそれぞれ答えなさい。

①



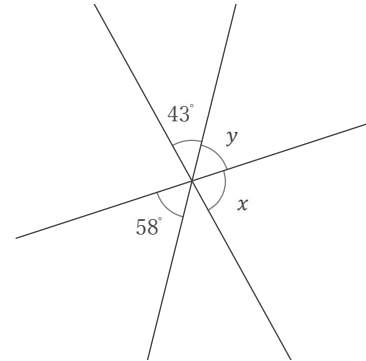
$x = 92^\circ$ $y = 39^\circ$

②



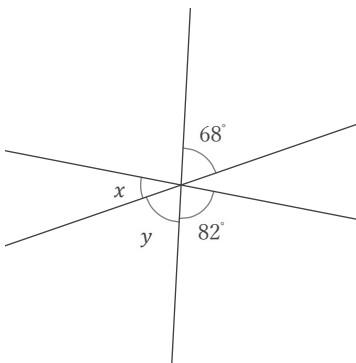
$x = 108^\circ$ $y = 35^\circ$

③



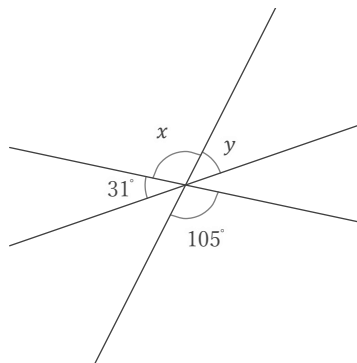
$x = 79^\circ$ $y = 58^\circ$

④



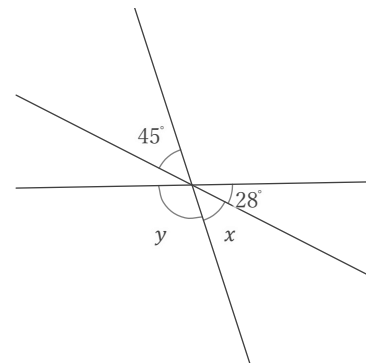
$x = 30^\circ$ $y = 68^\circ$

⑤



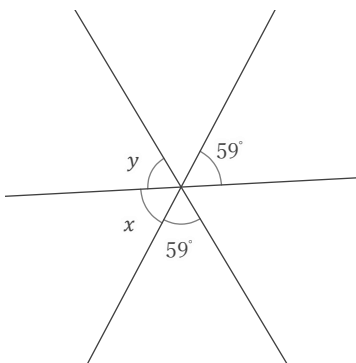
$x = 105^\circ$ $y = 44^\circ$

⑥



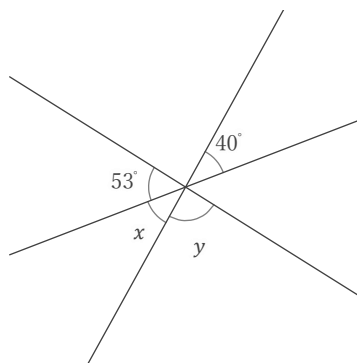
$x = 45^\circ$ $y = 107^\circ$

⑦



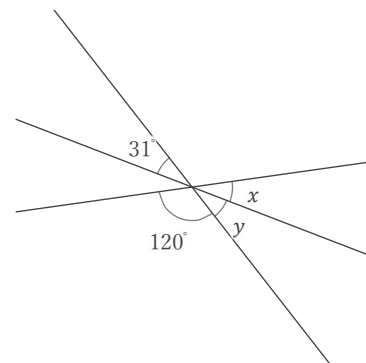
$x = 59^\circ$ $y = 62^\circ$

⑧



$x = 40^\circ$ $y = 87^\circ$

⑨



$x = 29^\circ$ $y = 31^\circ$