

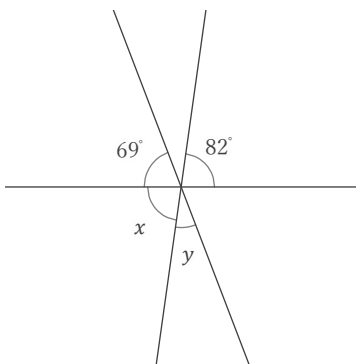
対頂角

年 組 名前

/ 9

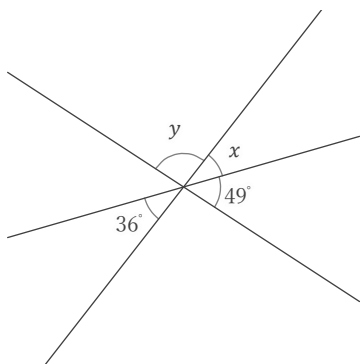
■ 次の x, y の角の大きさをそれぞれ答えなさい。

①



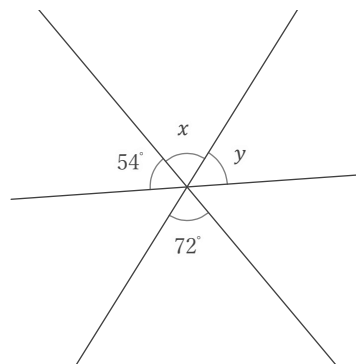
$x =$ $y =$

②



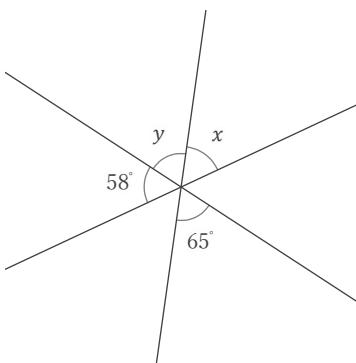
$x =$ $y =$

③



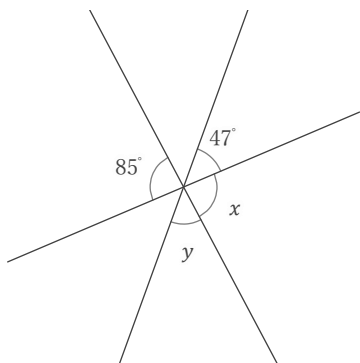
$x =$ $y =$

④



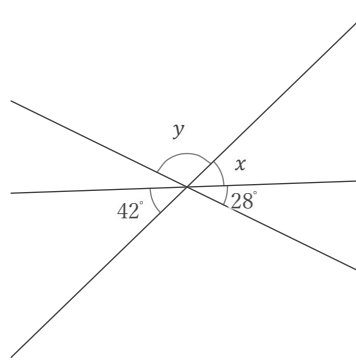
$x =$ $y =$

⑤



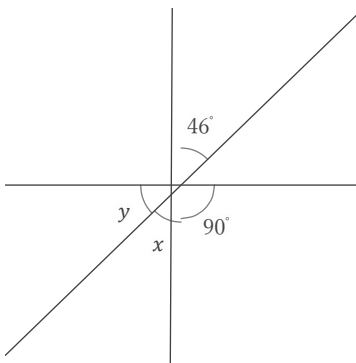
$x =$ $y =$

⑥



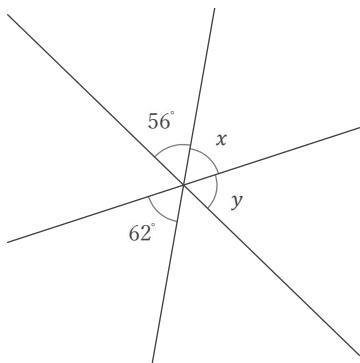
$x =$ $y =$

⑦



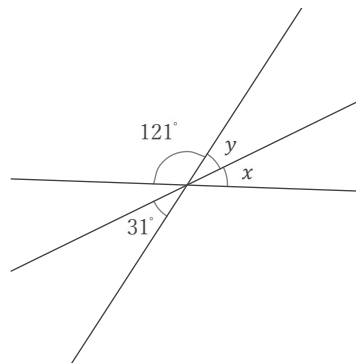
$x =$ $y =$

⑧



$x =$ $y =$

⑨



$x =$ $y =$

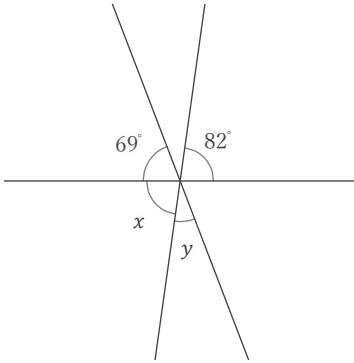
対頂角

年 組 名前

/ 9

■ 次の x, y の角の大きさをそれぞれ答えなさい。

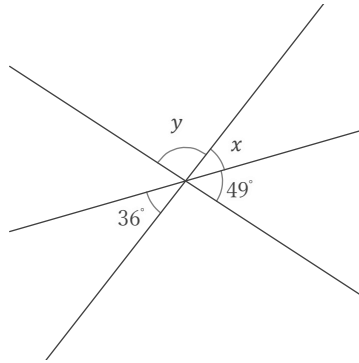
①



$x = 82^\circ$

$y = 29^\circ$

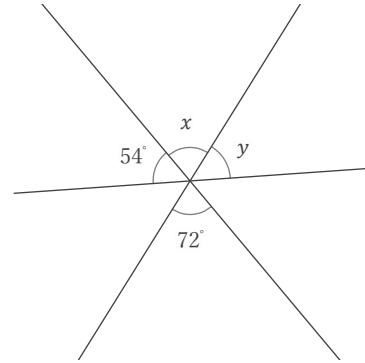
②



$x = 36^\circ$

$y = 95^\circ$

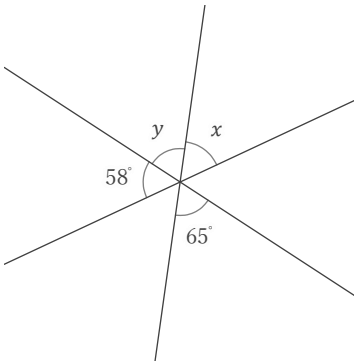
③



$x = 72^\circ$

$y = 54^\circ$

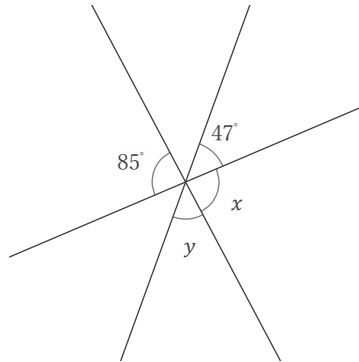
④



$x = 57^\circ$

$y = 65^\circ$

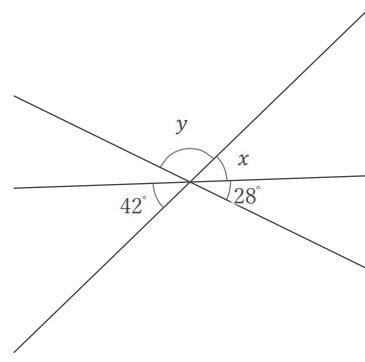
⑤



$x = 85^\circ$

$y = 48^\circ$

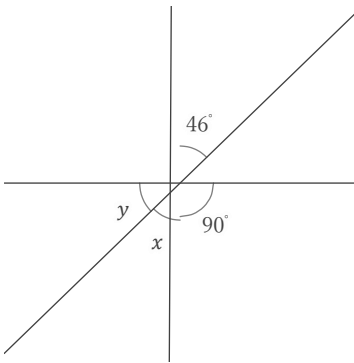
⑥



$x = 42^\circ$

$y = 110^\circ$

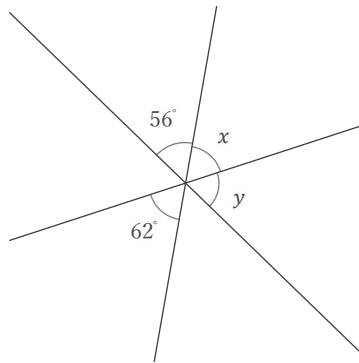
⑦



$x = 46^\circ$

$y = 44^\circ$

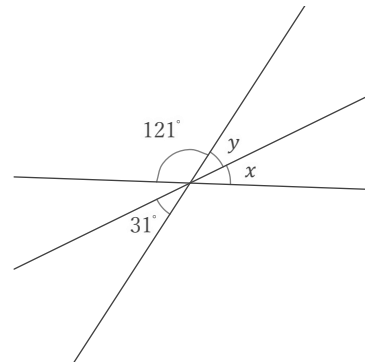
⑧



$x = 62^\circ$

$y = 62^\circ$

⑨



$x = 28^\circ$

$y = 31^\circ$