

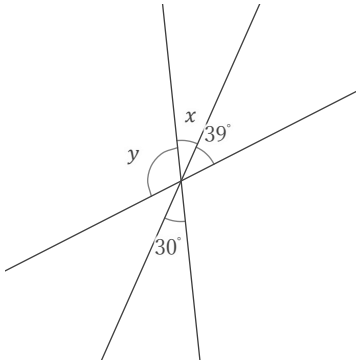
# 対頂角

年 組 名前

/ 9

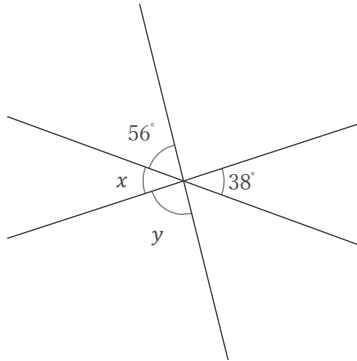
■ 次の  $x, y$  の角の大きさをそれぞれ答えなさい。

①



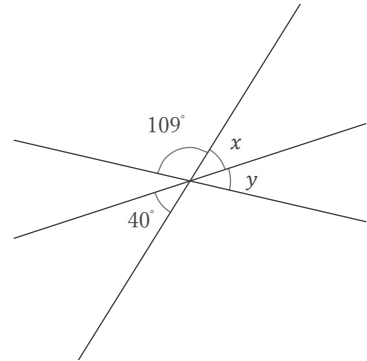
$x =$    $y =$

②



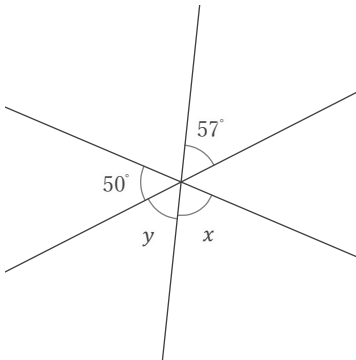
$x =$    $y =$

③



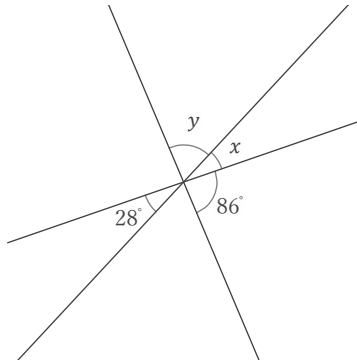
$x =$    $y =$

④



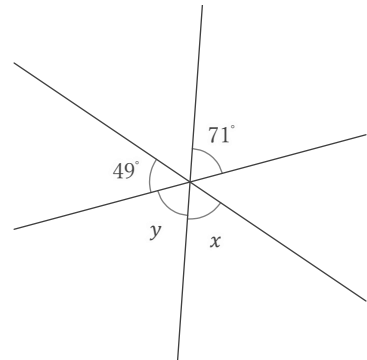
$x =$    $y =$

⑤



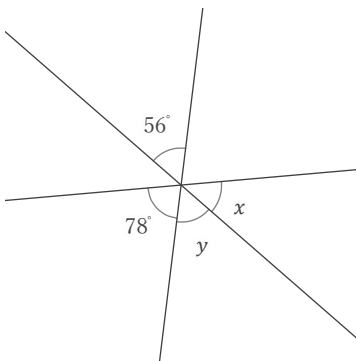
$x =$    $y =$

⑥



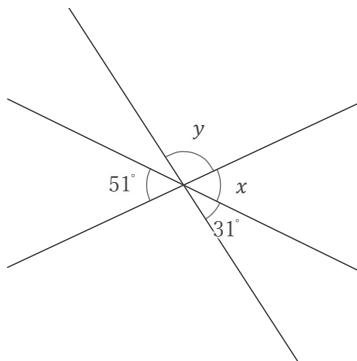
$x =$    $y =$

⑦



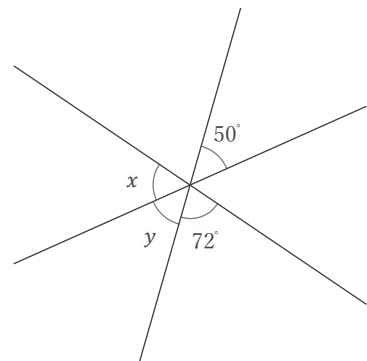
$x =$    $y =$

⑧



$x =$    $y =$

⑨



$x =$    $y =$

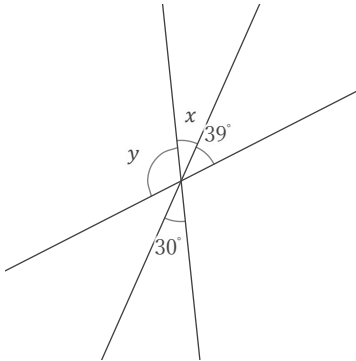
# 対頂角

年 組 名前

/ 9

■ 次の  $x, y$  の角の大きさをそれぞれ答えなさい。

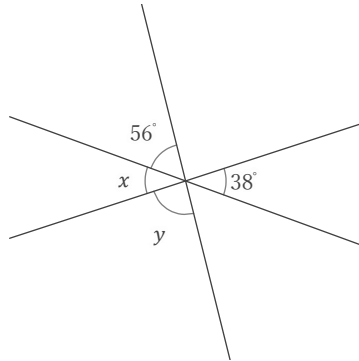
①



$x = 30^\circ$

$y = 111^\circ$

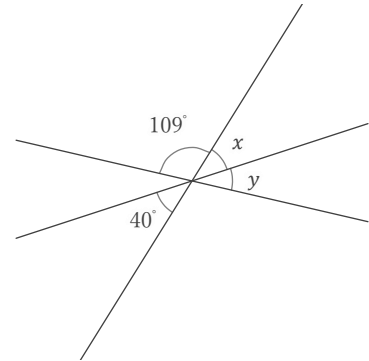
②



$x = 38^\circ$

$y = 86^\circ$

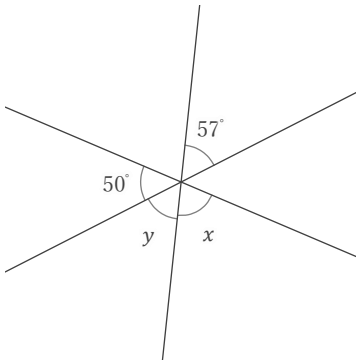
③



$x = 40^\circ$

$y = 31^\circ$

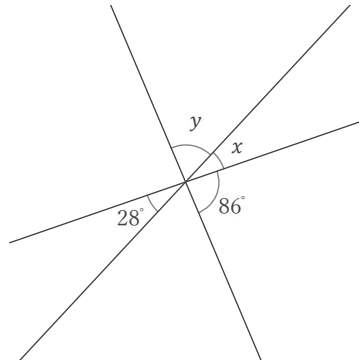
④



$x = 73^\circ$

$y = 57^\circ$

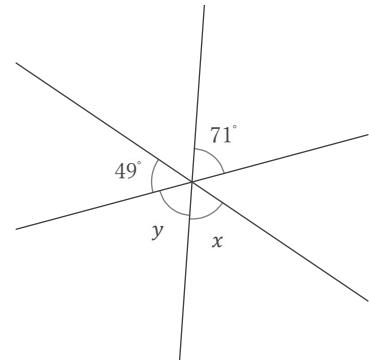
⑤



$x = 28^\circ$

$y = 66^\circ$

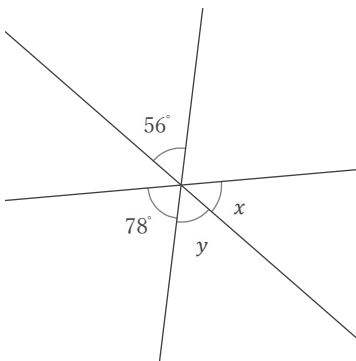
⑥



$x = 60^\circ$

$y = 71^\circ$

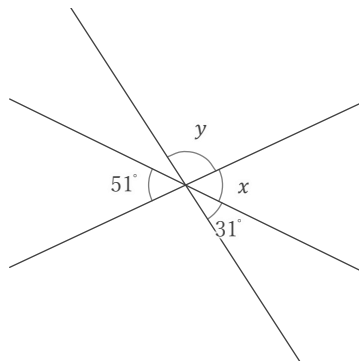
⑦



$x = 46^\circ$

$y = 56^\circ$

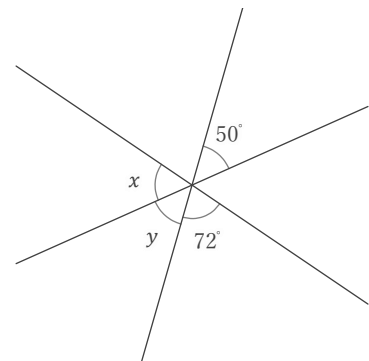
⑧



$x = 51^\circ$

$y = 98^\circ$

⑨



$x = 58^\circ$

$y = 50^\circ$