

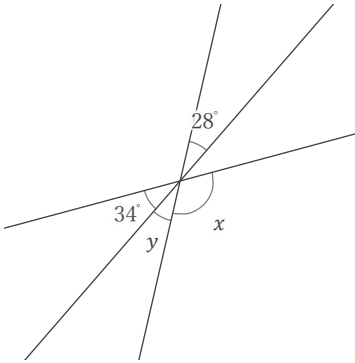
対頂角

年 組 名前

/ 9

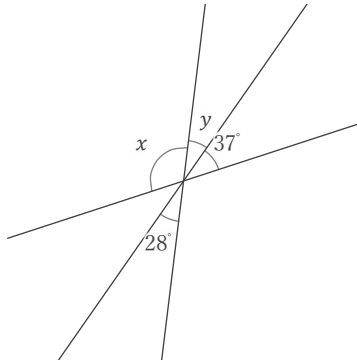
■ 次の x, y の角の大きさをそれぞれ答えなさい。

①



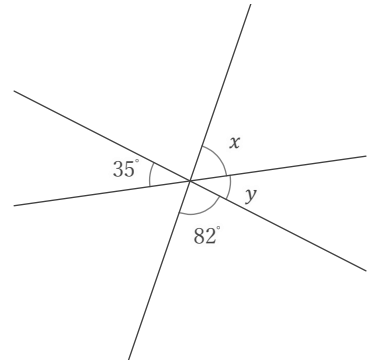
$x =$ $y =$

②



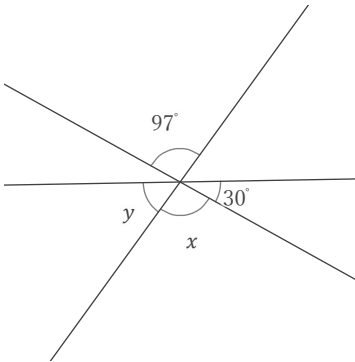
$x =$ $y =$

③



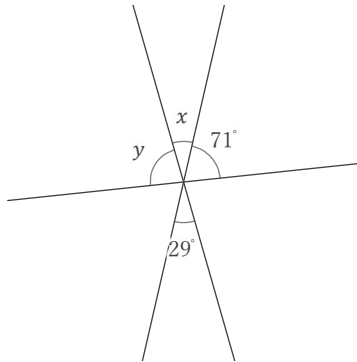
$x =$ $y =$

④



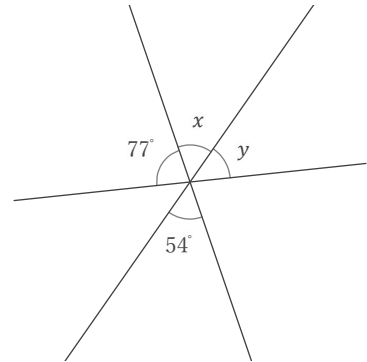
$x =$ $y =$

⑤



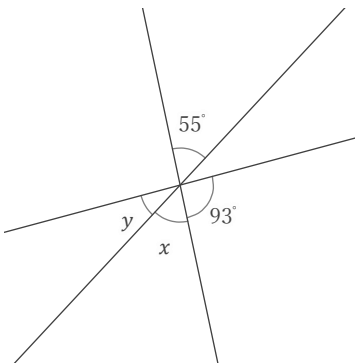
$x =$ $y =$

⑥



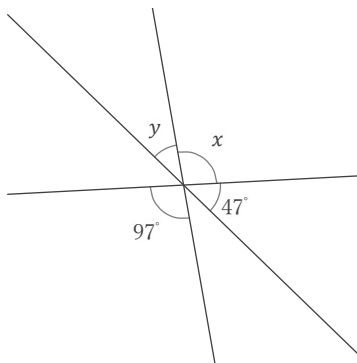
$x =$ $y =$

⑦



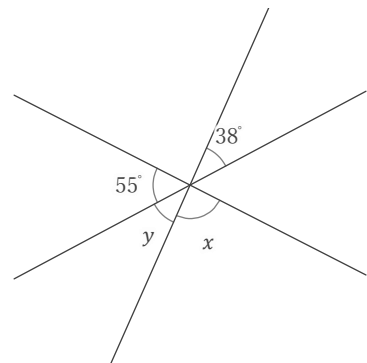
$x =$ $y =$

⑧



$x =$ $y =$

⑨



$x =$ $y =$

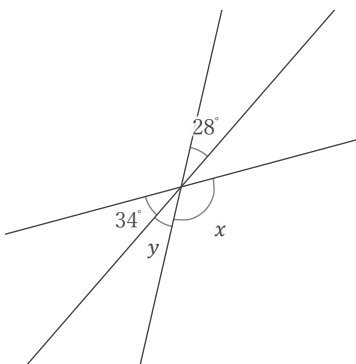
対頂角

年 組 名前

/ 9

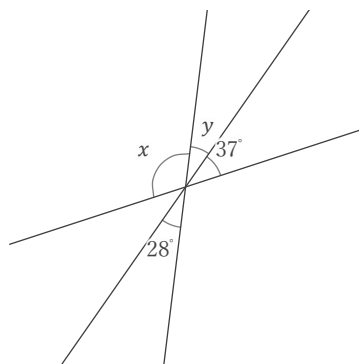
■ 次の x, y の角の大きさをそれぞれ答えなさい。

①



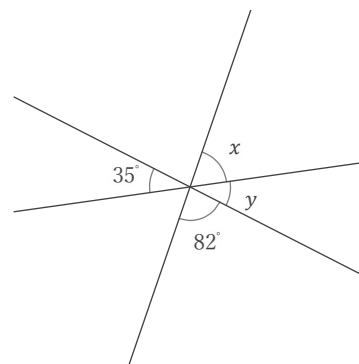
$x = 118^\circ$ $y = 28^\circ$

②



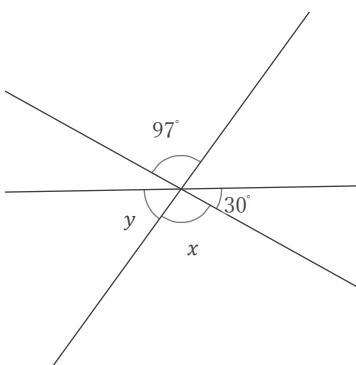
$x = 115^\circ$ $y = 28^\circ$

③



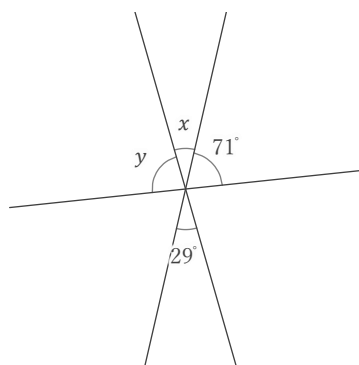
$x = 63^\circ$ $y = 35^\circ$

④



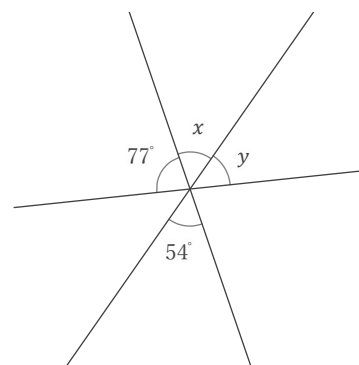
$x = 97^\circ$ $y = 53^\circ$

⑤



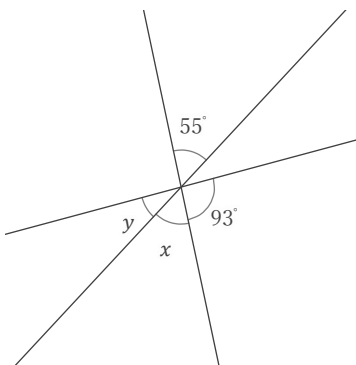
$x = 29^\circ$ $y = 80^\circ$

⑥



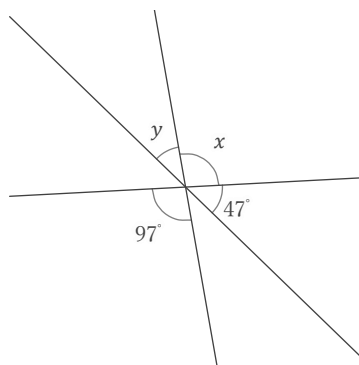
$x = 54^\circ$ $y = 49^\circ$

⑦



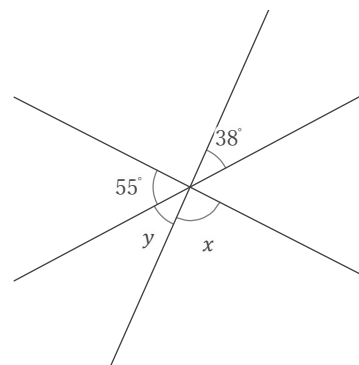
$x = 55^\circ$ $y = 32^\circ$

⑧



$x = 97^\circ$ $y = 36^\circ$

⑨



$x = 87^\circ$ $y = 38^\circ$