

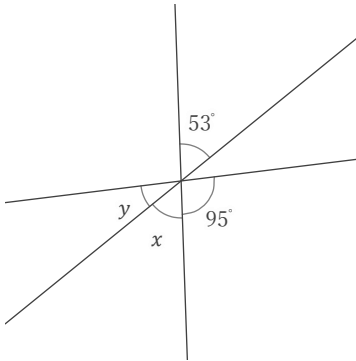
# 対頂角

年 組 名前

/ 9

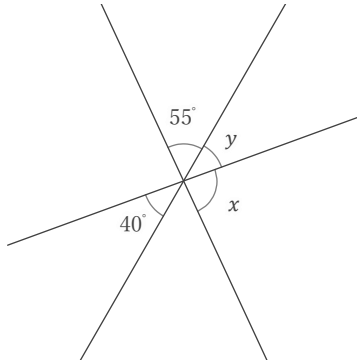
■ 次の  $x, y$  の角の大きさをそれぞれ答えなさい。

①



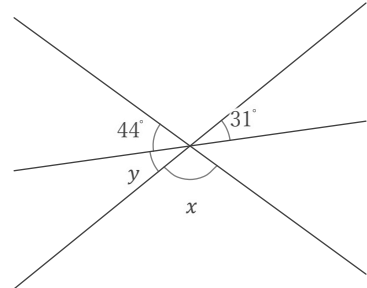
$x =$    $y =$

②



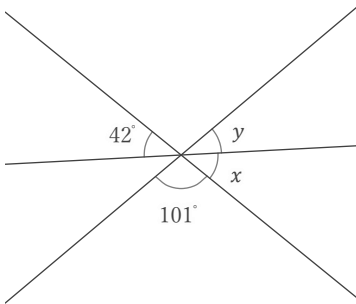
$x =$    $y =$

③



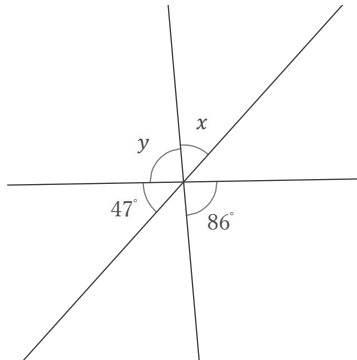
$x =$    $y =$

④



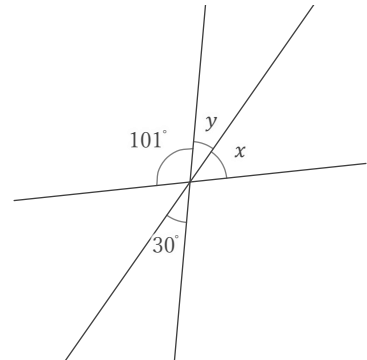
$x =$    $y =$

⑤



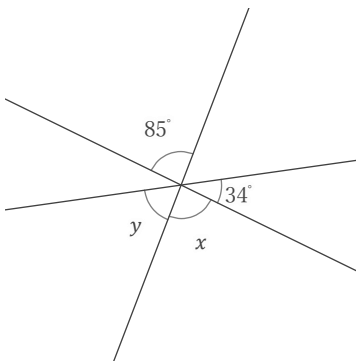
$x =$    $y =$

⑥



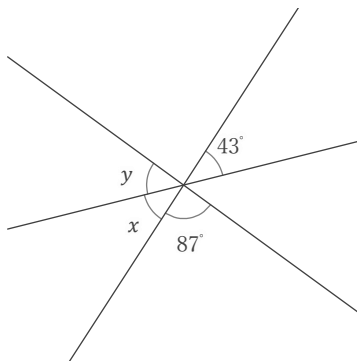
$x =$    $y =$

⑦



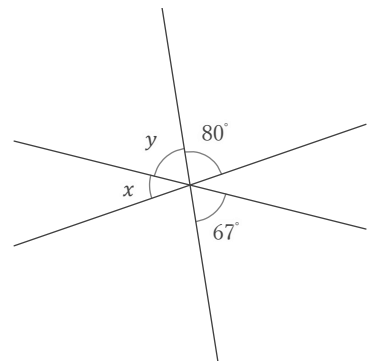
$x =$    $y =$

⑧



$x =$    $y =$

⑨



$x =$    $y =$

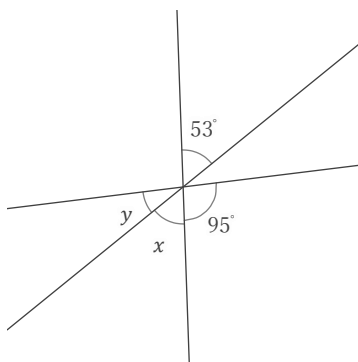
# 対頂角

年 組 名前

/ 9

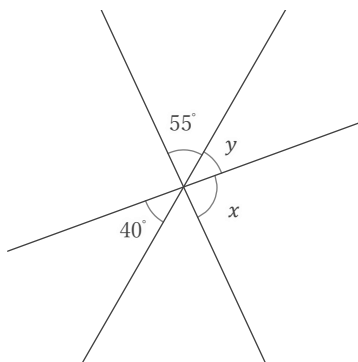
■ 次の  $x, y$  の角の大きさをそれぞれ答えなさい。

①



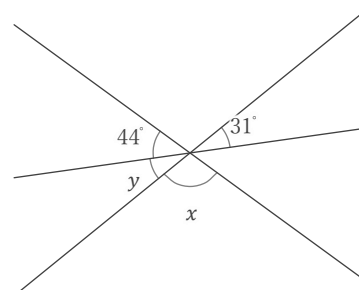
$x = 53^\circ$     $y = 32^\circ$

②



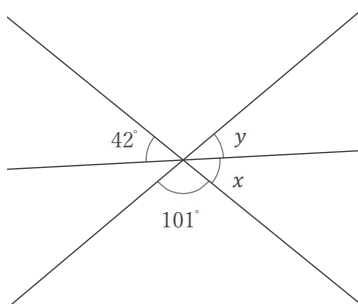
$x = 85^\circ$     $y = 40^\circ$

③



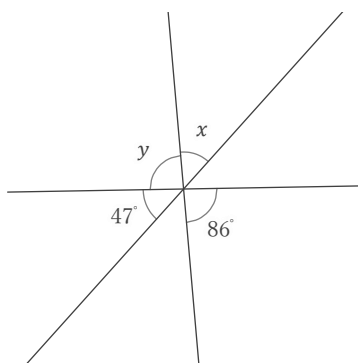
$x = 105^\circ$     $y = 31^\circ$

④



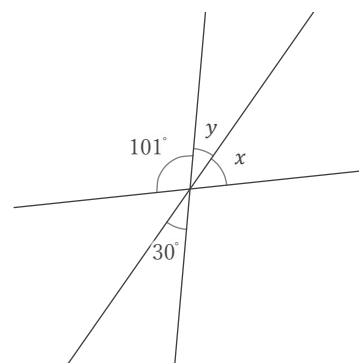
$x = 42^\circ$     $y = 37^\circ$

⑤



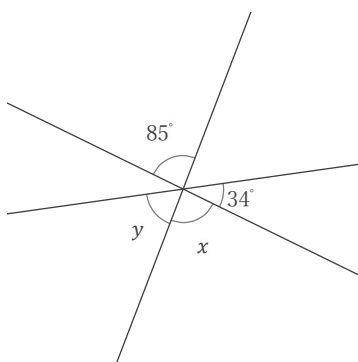
$x = 47^\circ$     $y = 86^\circ$

⑥



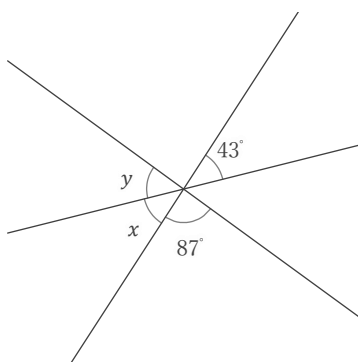
$x = 49^\circ$     $y = 30^\circ$

⑦



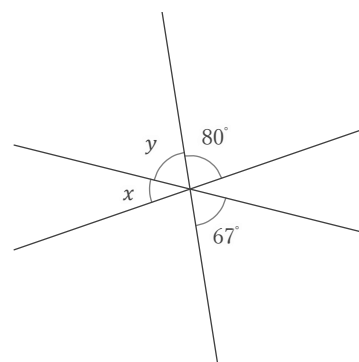
$x = 85^\circ$     $y = 61^\circ$

⑧



$x = 43^\circ$     $y = 50^\circ$

⑨



$x = 33^\circ$     $y = 67^\circ$