

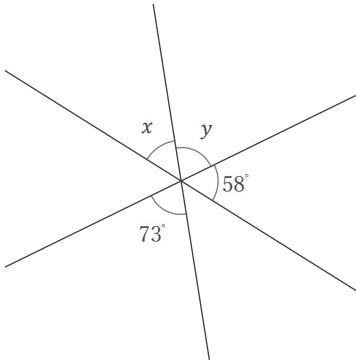
対頂角

年 組 名前

/ 9

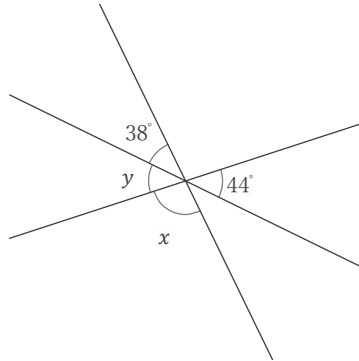
■ 次の x, y の角の大きさをそれぞれ答えなさい。

①



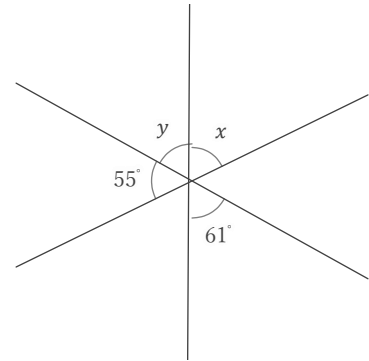
$x =$ $y =$

②



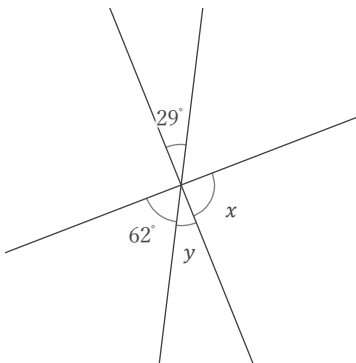
$x =$ $y =$

③



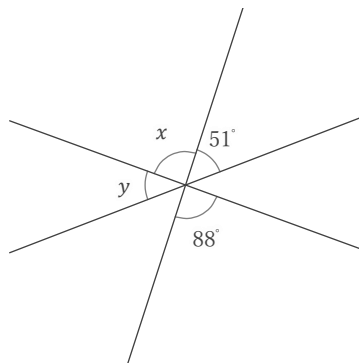
$x =$ $y =$

④



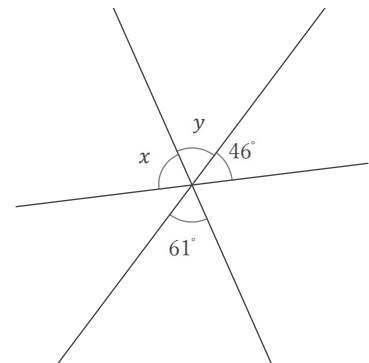
$x =$ $y =$

⑤



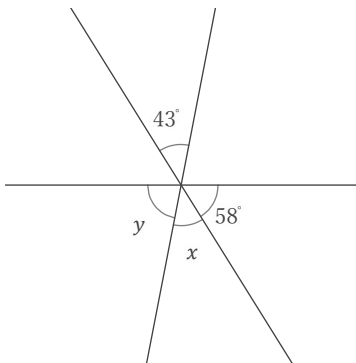
$x =$ $y =$

⑥



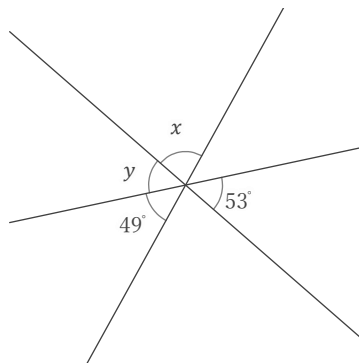
$x =$ $y =$

⑦



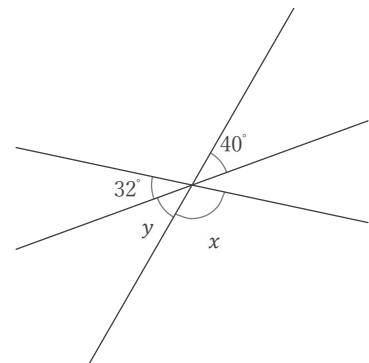
$x =$ $y =$

⑧



$x =$ $y =$

⑨



$x =$ $y =$

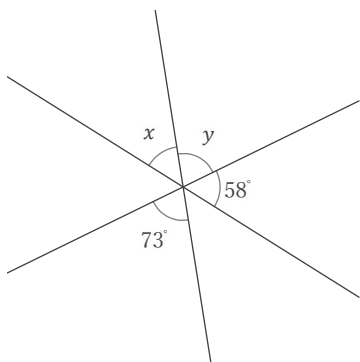
対頂角

年 組 名前

/ 9

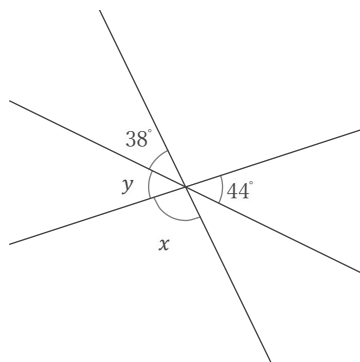
■ 次の x, y の角の大きさをそれぞれ答えなさい。

①



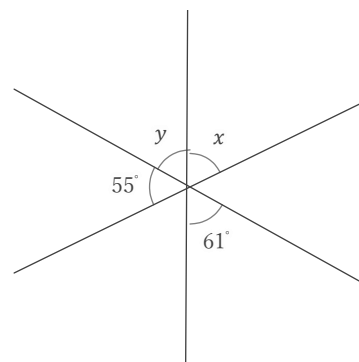
$x = 49^\circ$ $y = 73^\circ$

②



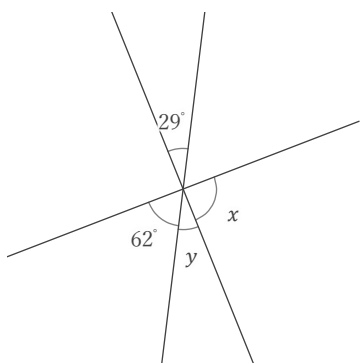
$x = 98^\circ$ $y = 44^\circ$

③



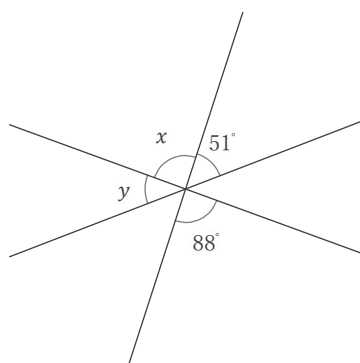
$x = 64^\circ$ $y = 61^\circ$

④



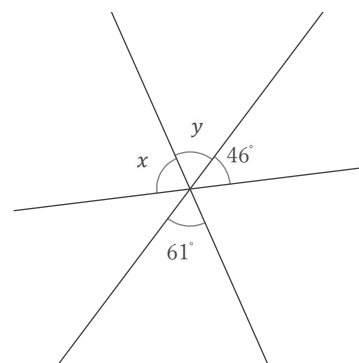
$x = 89^\circ$ $y = 29^\circ$

⑤



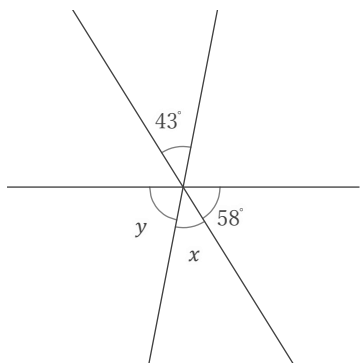
$x = 88^\circ$ $y = 41^\circ$

⑥



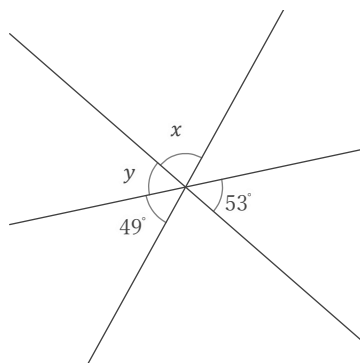
$x = 73^\circ$ $y = 61^\circ$

⑦



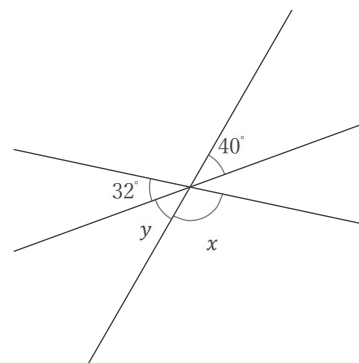
$x = 43^\circ$ $y = 79^\circ$

⑧



$x = 78^\circ$ $y = 53^\circ$

⑨



$x = 108^\circ$ $y = 40^\circ$