

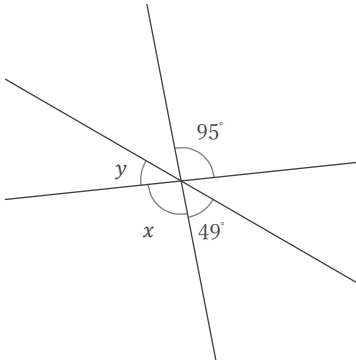
# 対頂角

年 組 名前

/ 9

■ 次の  $x, y$  の角の大きさをそれぞれ答えなさい。

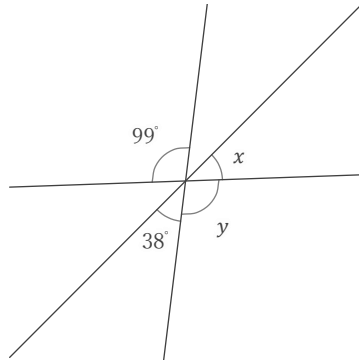
①



$x =$

$y =$

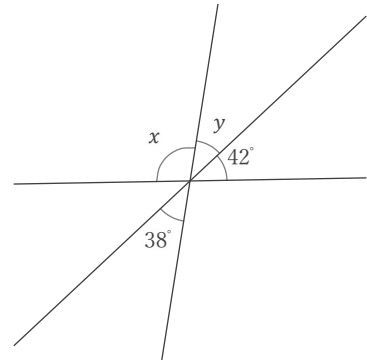
②



$x =$

$y =$

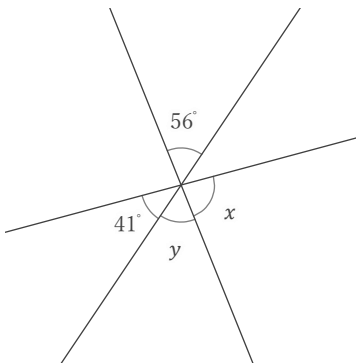
③



$x =$

$y =$

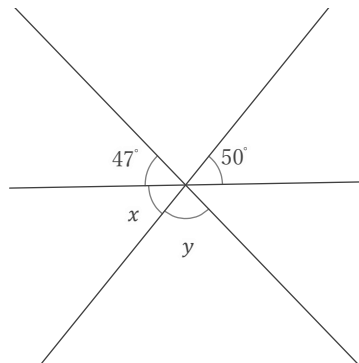
④



$x =$

$y =$

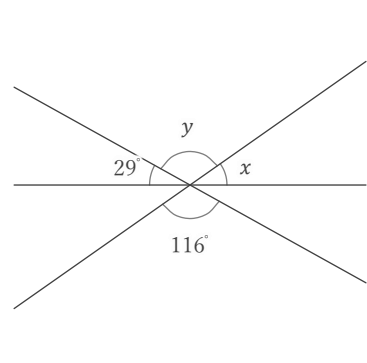
⑤



$x =$

$y =$

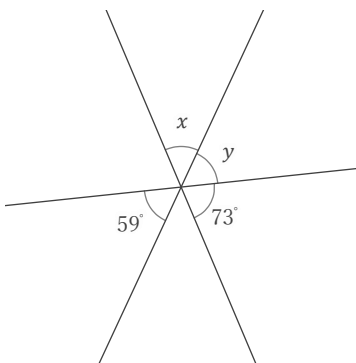
⑥



$x =$

$y =$

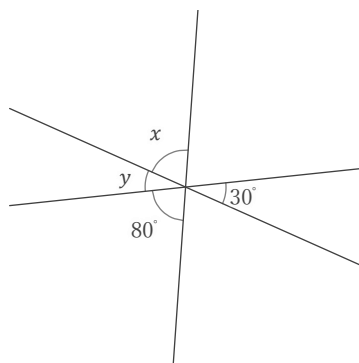
⑦



$x =$

$y =$

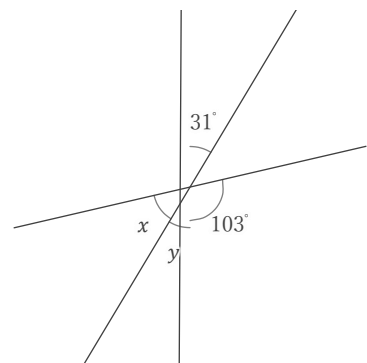
⑧



$x =$

$y =$

⑨



$x =$

$y =$

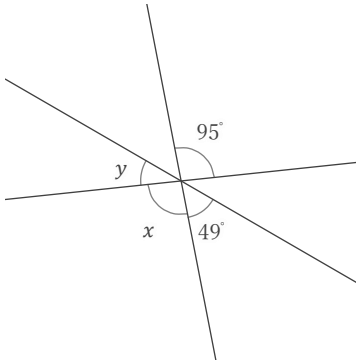
# 対頂角

年 組 名前

/ 9

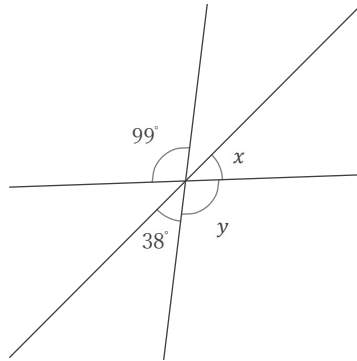
■ 次の  $x, y$  の角の大きさをそれぞれ答えなさい。

①



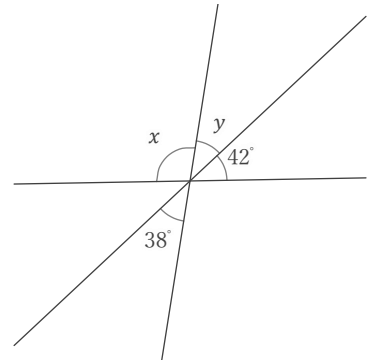
$x = 95^\circ$     $y = 36^\circ$

②



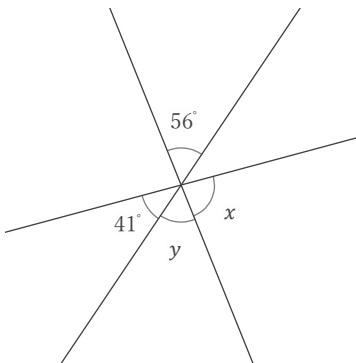
$x = 43^\circ$     $y = 99^\circ$

③



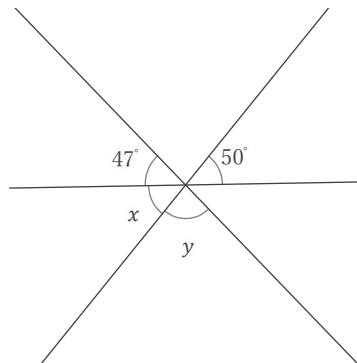
$x = 100^\circ$     $y = 38^\circ$

④



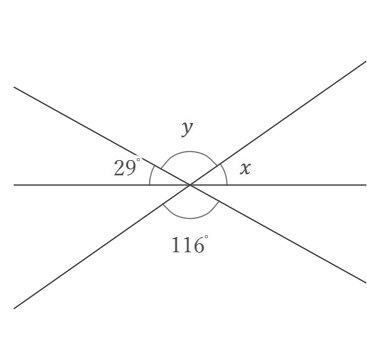
$x = 83^\circ$     $y = 56^\circ$

⑤



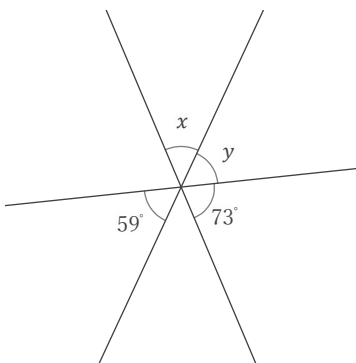
$x = 50^\circ$     $y = 83^\circ$

⑥



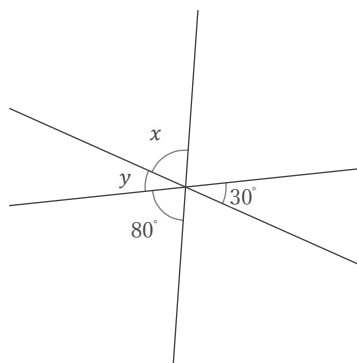
$x = 35^\circ$     $y = 116^\circ$

⑦



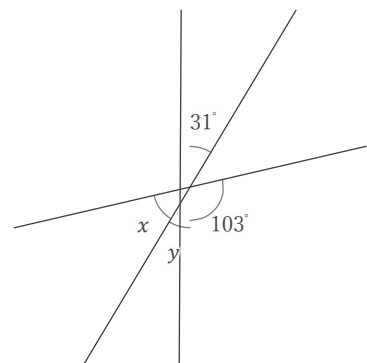
$x = 48^\circ$     $y = 59^\circ$

⑧



$x = 70^\circ$     $y = 30^\circ$

⑨



$x = 46^\circ$     $y = 31^\circ$