

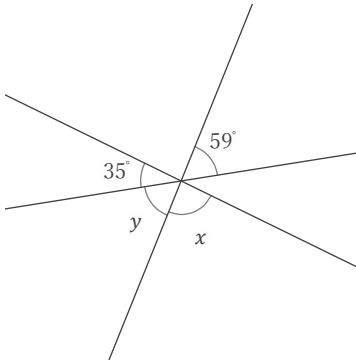
対頂角

年 組 名前

/ 9

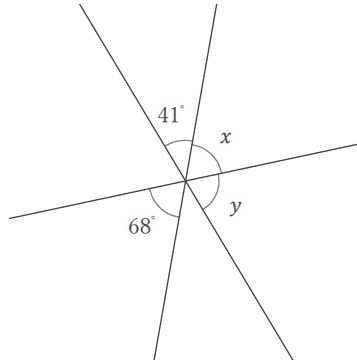
■ 次の x, y の角の大きさをそれぞれ答えなさい。

①



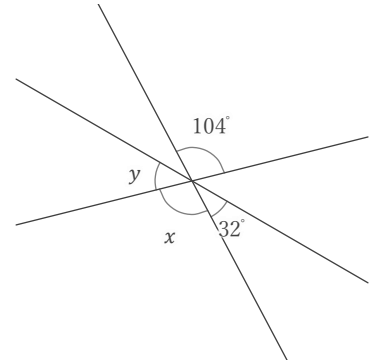
$x =$ $y =$

②



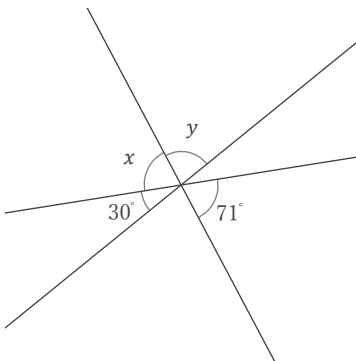
$x =$ $y =$

③



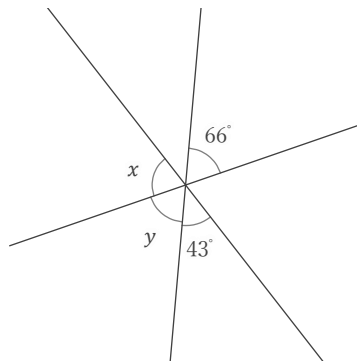
$x =$ $y =$

④



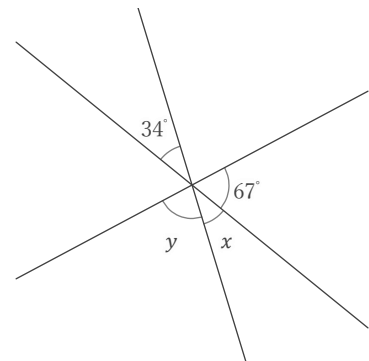
$x =$ $y =$

⑤



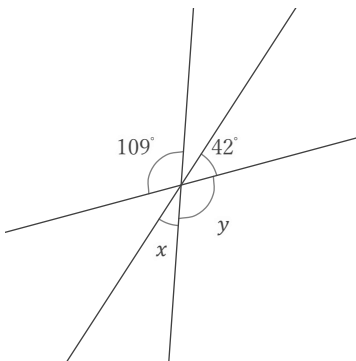
$x =$ $y =$

⑥



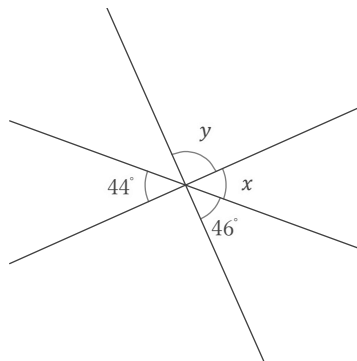
$x =$ $y =$

⑦



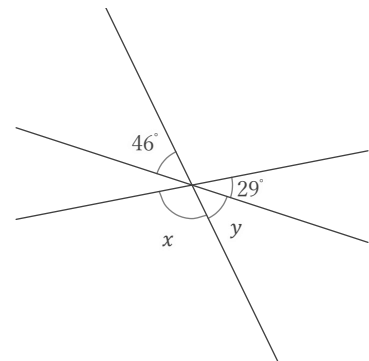
$x =$ $y =$

⑧



$x =$ $y =$

⑨



$x =$ $y =$

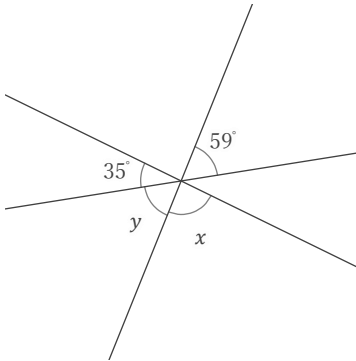
対頂角

年 組 名前

/ 9

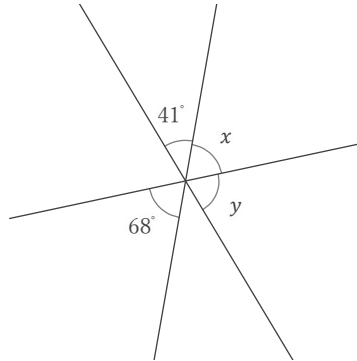
■ 次の x, y の角の大きさをそれぞれ答えなさい。

①



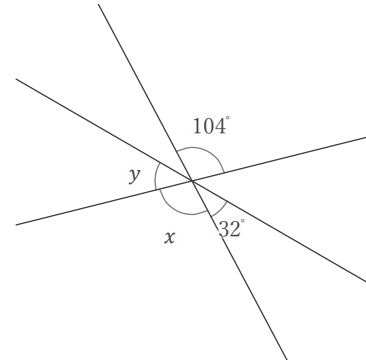
$x = 86^\circ$ $y = 59^\circ$

②



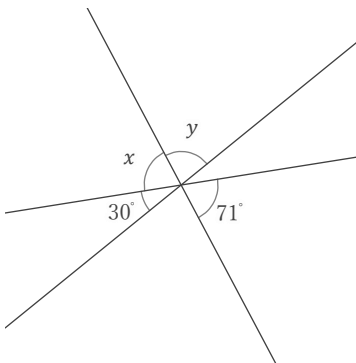
$x = 68^\circ$ $y = 71^\circ$

③



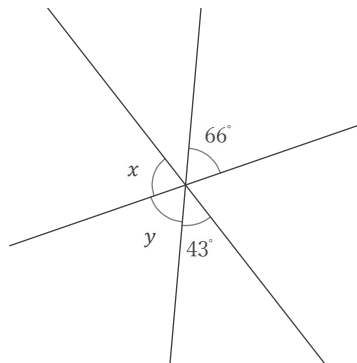
$x = 104^\circ$ $y = 44^\circ$

④



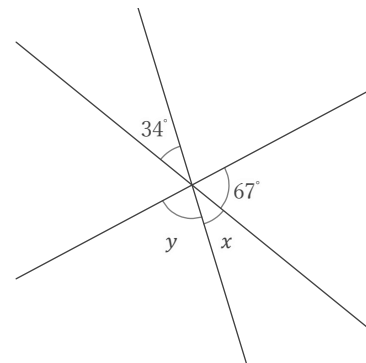
$x = 71^\circ$ $y = 79^\circ$

⑤



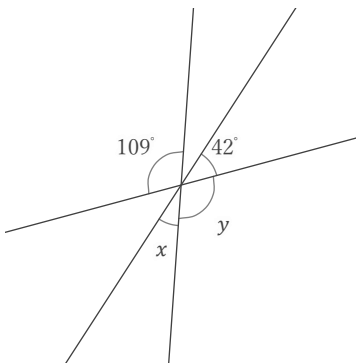
$x = 71^\circ$ $y = 66^\circ$

⑥



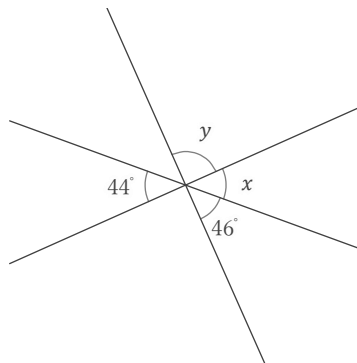
$x = 34^\circ$ $y = 79^\circ$

⑦



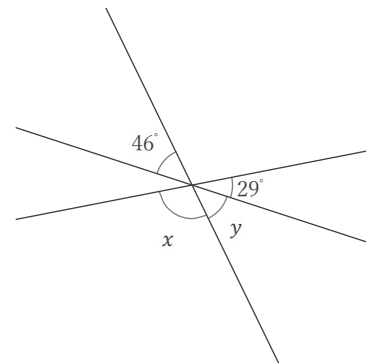
$x = 29^\circ$ $y = 109^\circ$

⑧



$x = 44^\circ$ $y = 90^\circ$

⑨



$x = 105^\circ$ $y = 46^\circ$