

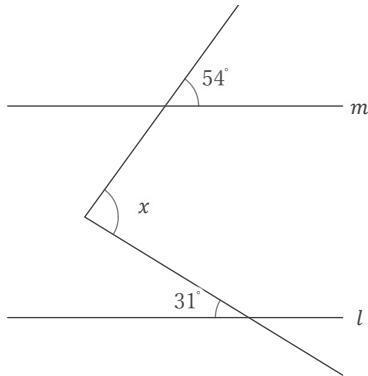
同位角・錯角を使って

____年 ____組 名前

/ 6

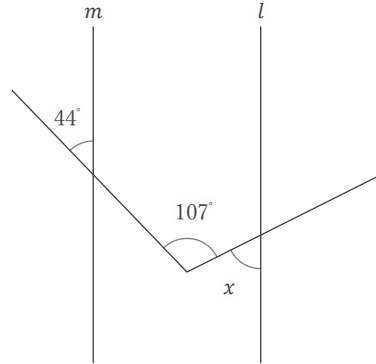
■ 下の図で、 $l \parallel m$ のとき、 $\angle x$ の大きさを求めなさい。

①



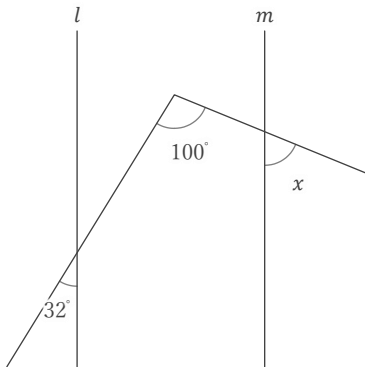
$x =$

②



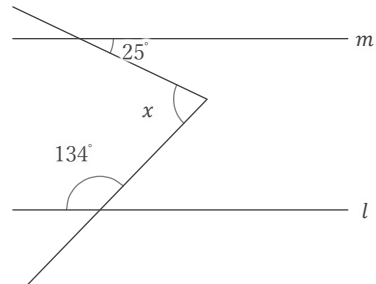
$x =$

③



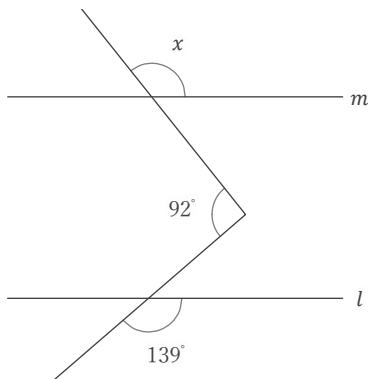
$x =$

④



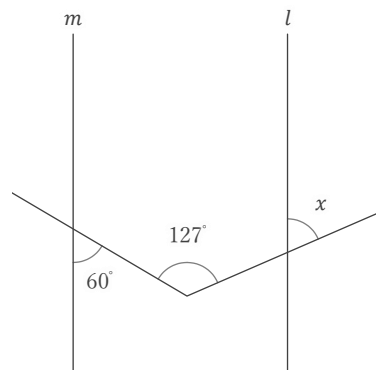
$x =$

⑤



$x =$

⑥



$x =$

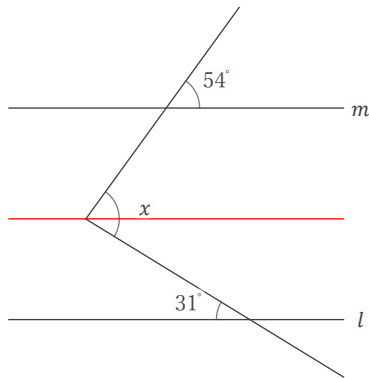
同位角・錯角を使って

____年 ____組 名前

/ 6

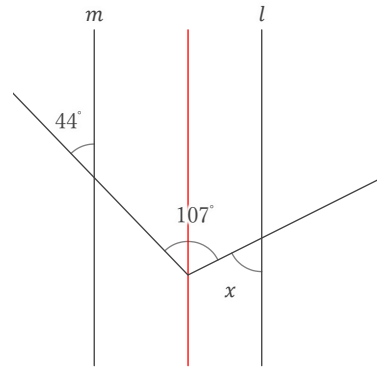
■ 下の図で、 $l \parallel m$ のとき、 $\angle x$ の大きさを求めなさい。

①



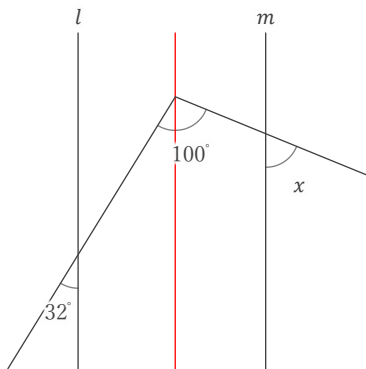
$x = 85^\circ$

②



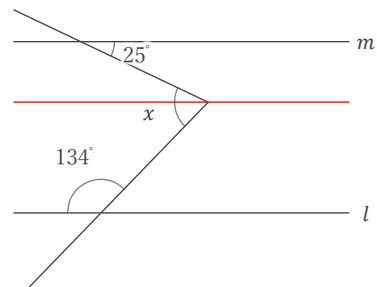
$x = 63^\circ$

③



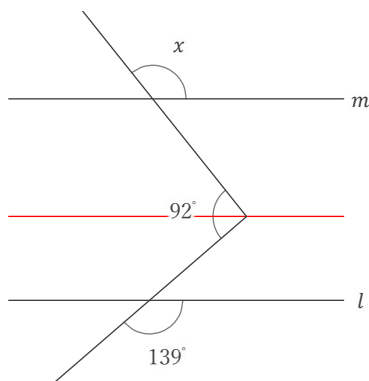
$x = 68^\circ$

④



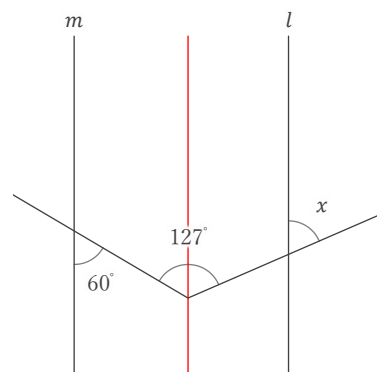
$x = 71^\circ$

⑤



$x = 129^\circ$

⑥



$x = 67^\circ$