


分数

年 組 名前


/ 8

■ 次の水のかさを、分数を使って表しましょう。


①



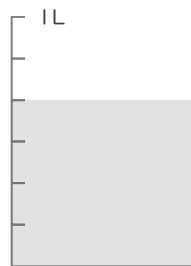
②




③




④




⑤



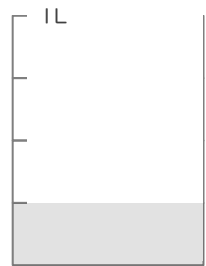
⑥



⑦



⑧



分数


年 組 名前

/ 8

■ 次の水のかさを、分数を使って表しましょう。


①

$$\frac{3}{9} \text{ L}$$




②

$$\frac{3}{10} \text{ L}$$




③

$$\frac{2}{8} \text{ L}$$



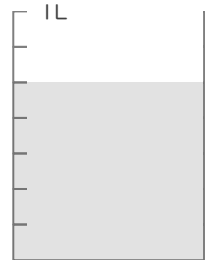
④

$$\frac{4}{6} \text{ L}$$




⑤

$$\frac{5}{7} \text{ L}$$



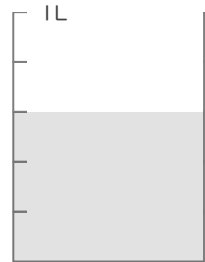
⑥

$$\frac{2}{3} \text{ L}$$



⑦

$$\frac{3}{5} \text{ L}$$



⑧

$$\frac{1}{4} \text{ L}$$

