

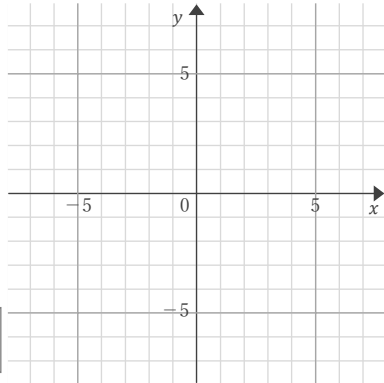
連立方程式の解

年 組 名前

/ 8

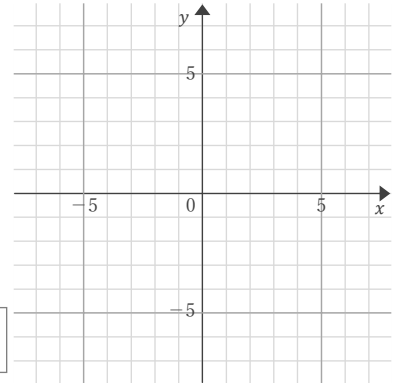
■ 2つの1次関数のグラフをかく方法で、連立方程式の解を求めなさい。

$$\textcircled{1} \begin{cases} 2x - 3y = 3 \\ x - 3y = 9 \end{cases}$$



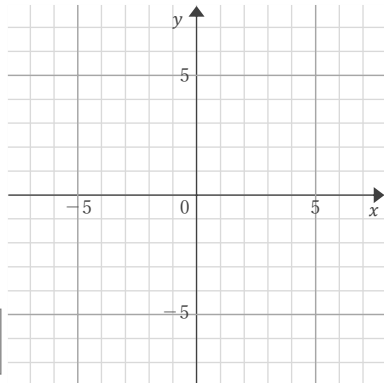
$x =$, $y =$

$$\textcircled{5} \begin{cases} x - 4y = -20 \\ x + y = 0 \end{cases}$$



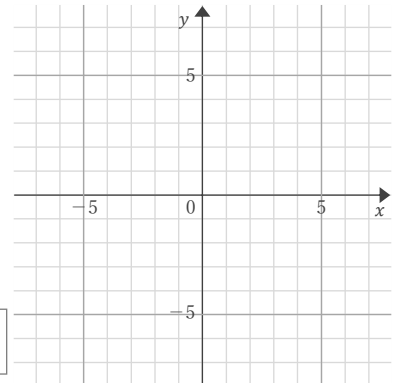
$x =$, $y =$

$$\textcircled{2} \begin{cases} x + 2y = 0 \\ x - 2y = 8 \end{cases}$$



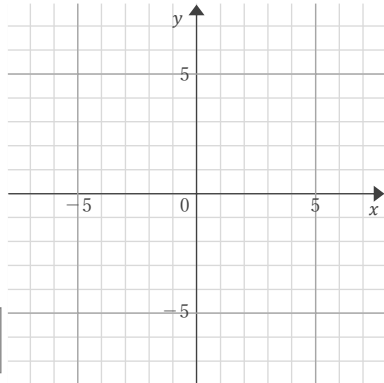
$x =$, $y =$

$$\textcircled{6} \begin{cases} x - y = 5 \\ 4x - y = 2 \end{cases}$$



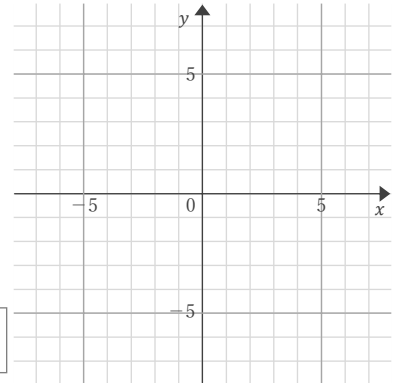
$x =$, $y =$

$$\textcircled{3} \begin{cases} 5x - 6y = -6 \\ x - 3y = -12 \end{cases}$$



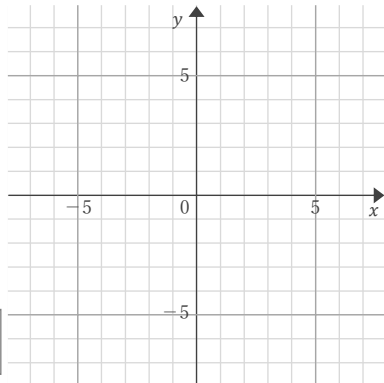
$x =$, $y =$

$$\textcircled{7} \begin{cases} x + 3y = -3 \\ x + y = -3 \end{cases}$$



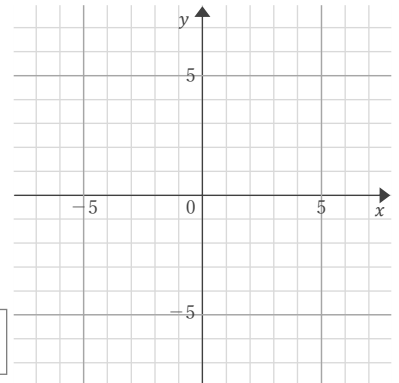
$x =$, $y =$

$$\textcircled{4} \begin{cases} x + y = 2 \\ 2x + 5y = -5 \end{cases}$$



$x =$, $y =$

$$\textcircled{8} \begin{cases} x + 5y = -25 \\ 3x - 5y = 5 \end{cases}$$



$x =$, $y =$

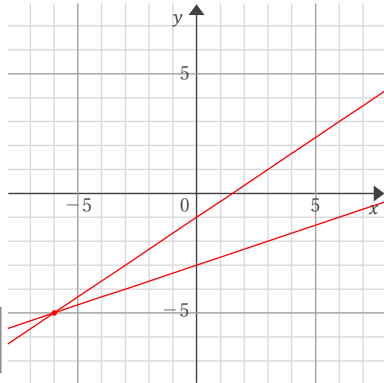
連立方程式の解

年 組 名前

/ 8

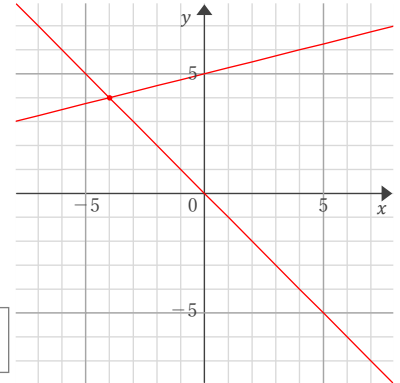
■ 2つの1次関数のグラフをかく方法で、連立方程式の解を求めなさい。

$$\textcircled{1} \begin{cases} 2x-3y=3 \\ x-3y=9 \end{cases}$$



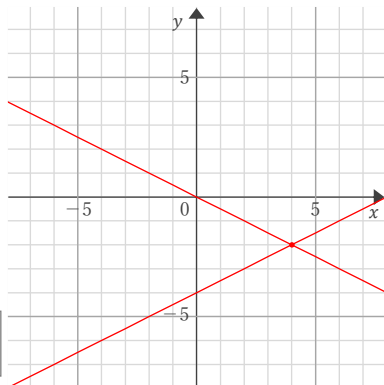
$$x = -6, y = -5$$

$$\textcircled{5} \begin{cases} x-4y=-20 \\ x+y=0 \end{cases}$$



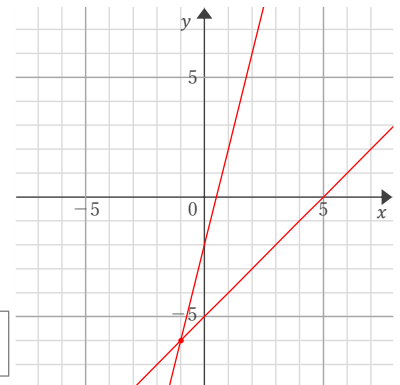
$$x = -4, y = 4$$

$$\textcircled{2} \begin{cases} x+2y=0 \\ x-2y=8 \end{cases}$$



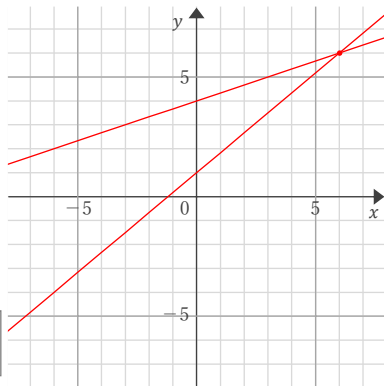
$$x = 4, y = -2$$

$$\textcircled{6} \begin{cases} x-y=5 \\ 4x-y=2 \end{cases}$$



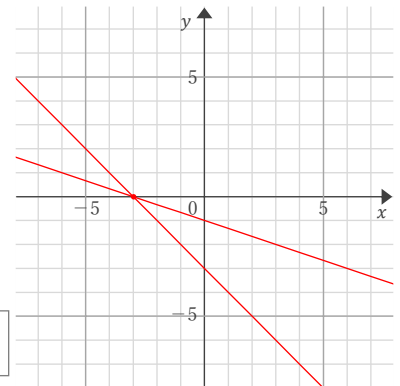
$$x = -1, y = -6$$

$$\textcircled{3} \begin{cases} 5x-6y=-6 \\ x-3y=-12 \end{cases}$$



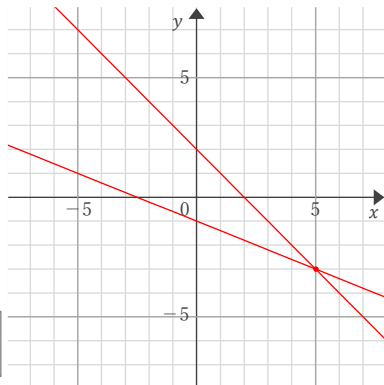
$$x = 6, y = 6$$

$$\textcircled{7} \begin{cases} x+3y=-3 \\ x+y=-3 \end{cases}$$



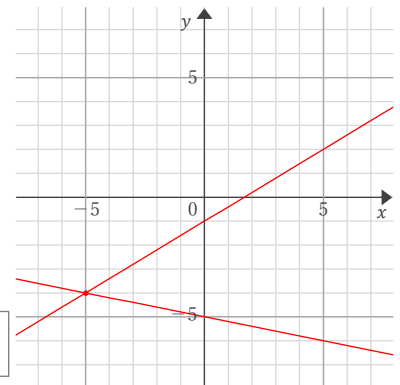
$$x = -3, y = 0$$

$$\textcircled{4} \begin{cases} x+y=2 \\ 2x+5y=-5 \end{cases}$$



$$x = 5, y = -3$$

$$\textcircled{8} \begin{cases} x+5y=-25 \\ 3x-5y=5 \end{cases}$$



$$x = -5, y = -4$$