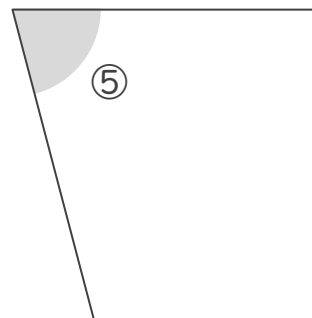
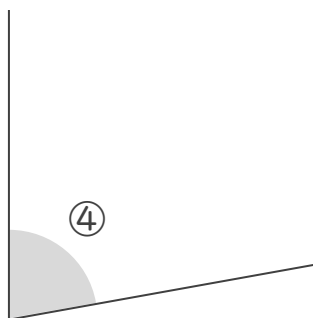
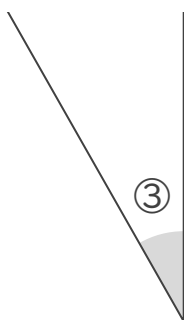
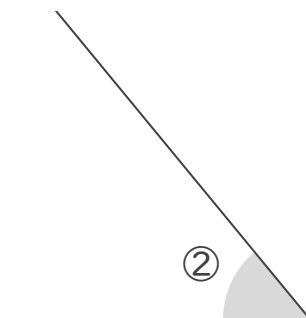
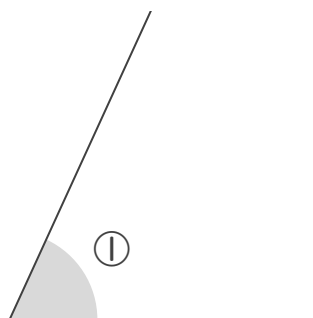


分度器の使い方

____年 ____組 名前

/ 5

■ 次の①～⑤の角の大きさを、分度器を使ってはかりましょう。



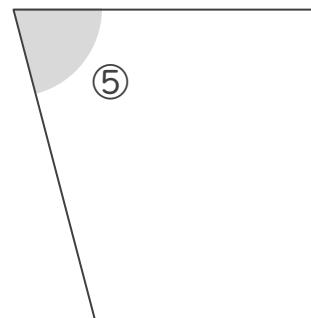
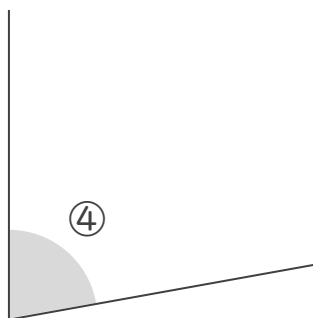
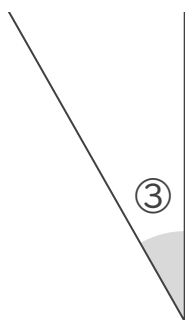
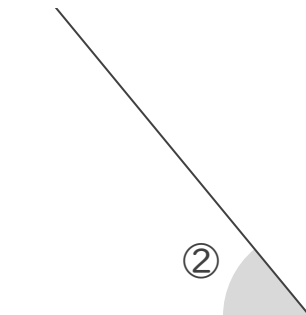
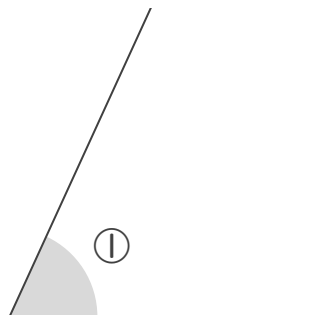
①	°	②	°	③	°	④	°	⑤	°
---	---	---	---	---	---	---	---	---	---

分度器の使い方

____年 ____組 名前

/ 5

■ 次の①～⑤の角の大きさを、分度器を使ってはかりましょう。



①	65	°	②	50	°	③	30	°	④	80	°	⑤	75	°
---	----	---	---	----	---	---	----	---	---	----	---	---	----	---