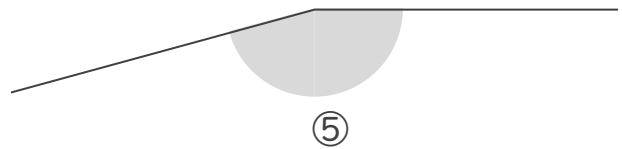
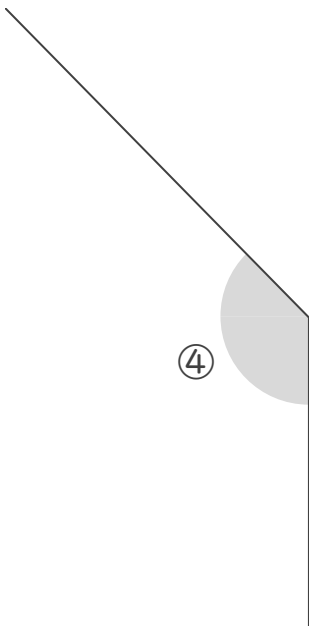
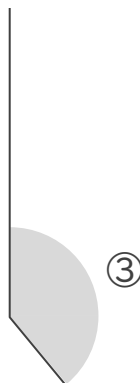
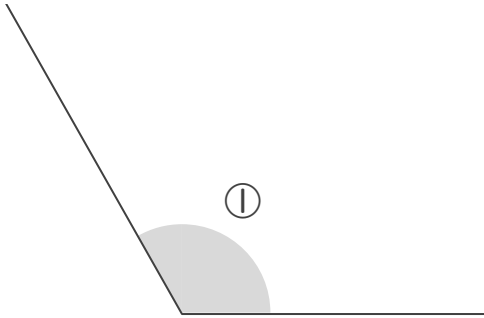


分度器の使い方

____年 ____組 名前

/ 5

■ 次の①～⑤の角の大きさを、分度器を使ってはかりましょう。



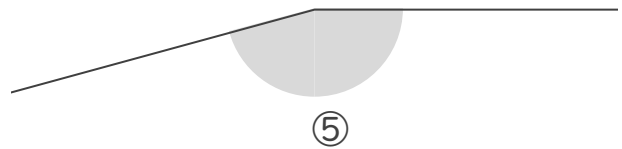
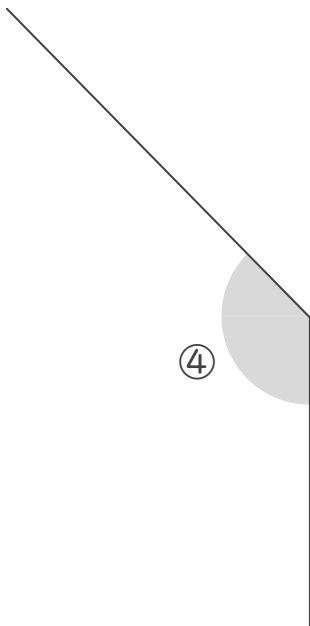
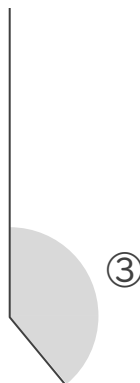
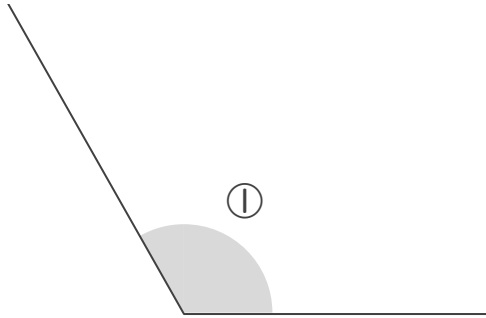
①	°	②	°	③	°	④	°	⑤	°
---	---	---	---	---	---	---	---	---	---

分度器の使い方

____年 ____組 名前

/ 5

■ 次の①～⑤の角の大きさを、分度器を使ってはかりましょう。



①	120	°	②	90	°	③	140	°	④	135	°	⑤	165	°
---	-----	---	---	----	---	---	-----	---	---	-----	---	---	-----	---