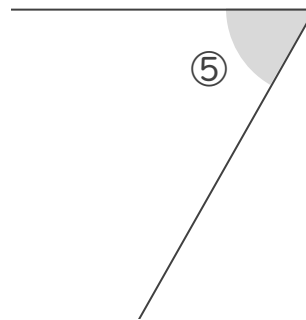
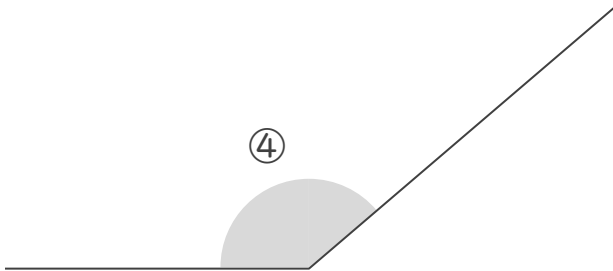
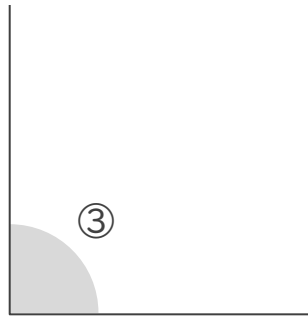
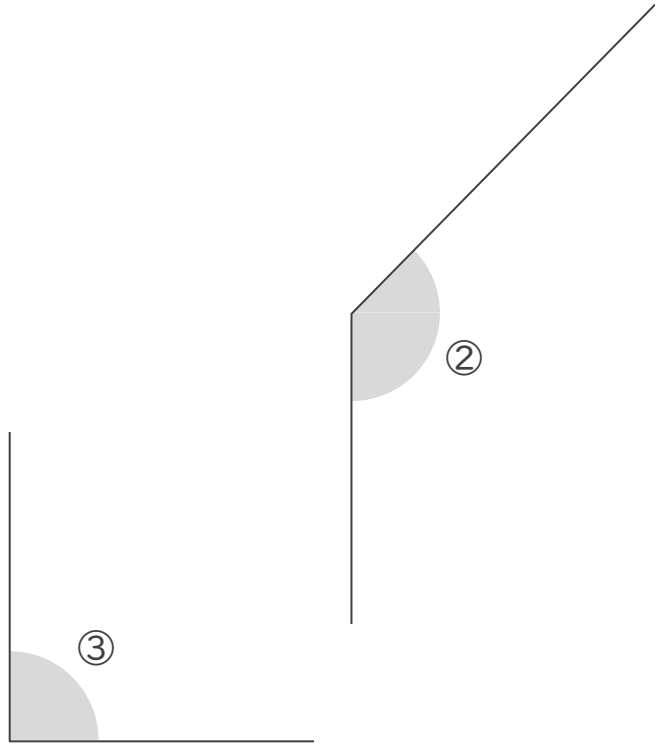
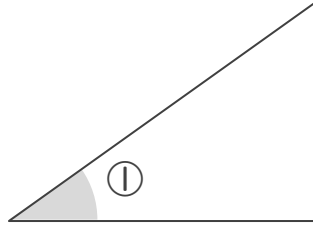


分度器の使い方

____年 ____組 名前 _____

/ 5

■ 次の ① ~ ⑤ の角の大きさを、分度器を使ってはかりましょう。



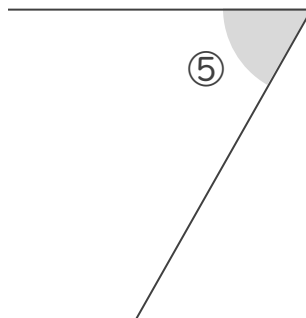
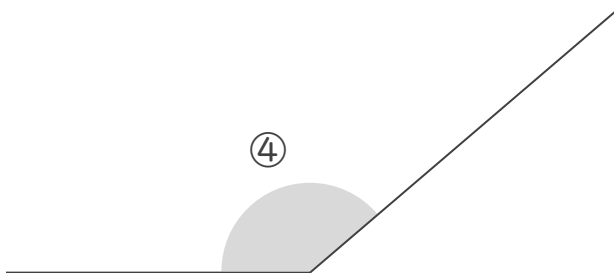
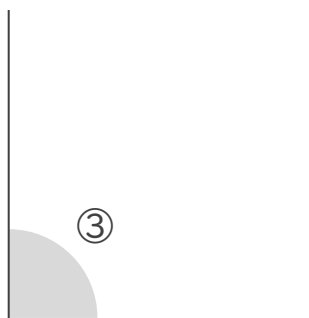
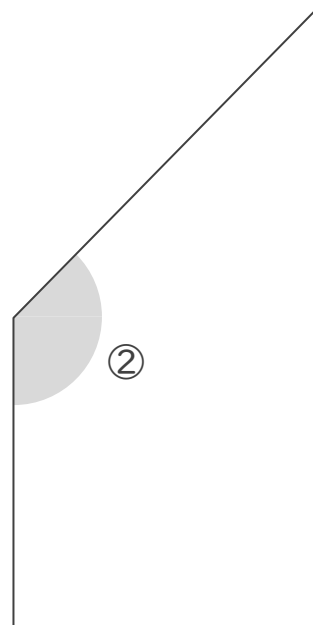
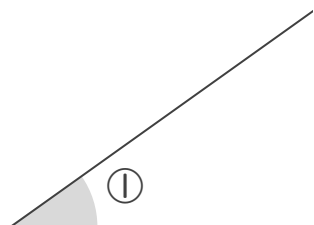
①	°	②	°	③	°	④	°	⑤	°
---	---	---	---	---	---	---	---	---	---

分度器の使い方

____年 ____組 名前

/ 5

■ 次の ① ~ ⑤ の角の大きさを、分度器を使ってはかりましょう。



①	35	°	②	135	°	③	90	°	④	140	°	⑤	60	°
---	----	---	---	-----	---	---	----	---	---	-----	---	---	----	---