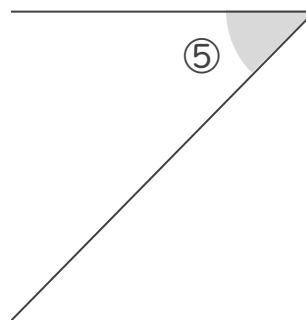
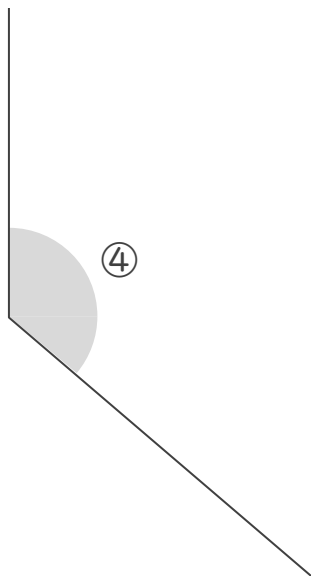
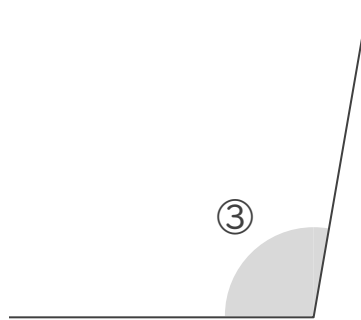
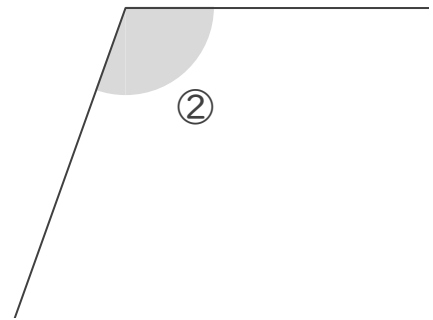
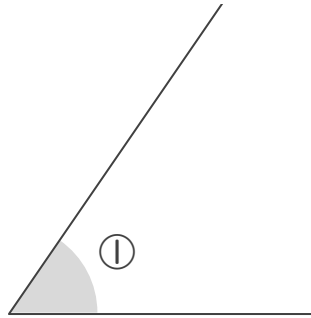


分度器の使い方

____年 ____組 名前

/ 5

■ 次の①～⑤の角の大きさを、分度器を使ってはかりましょう。



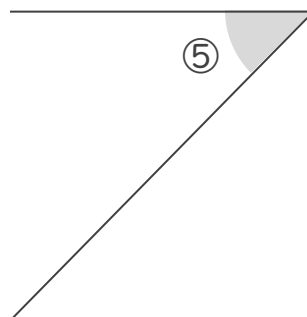
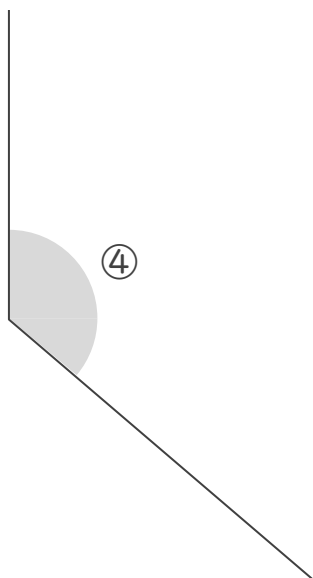
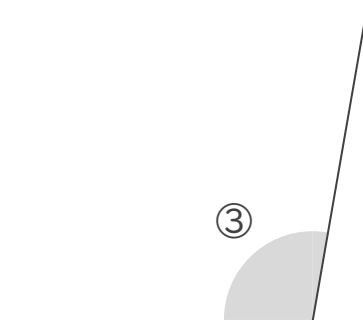
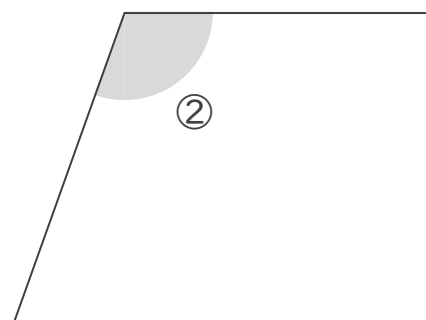
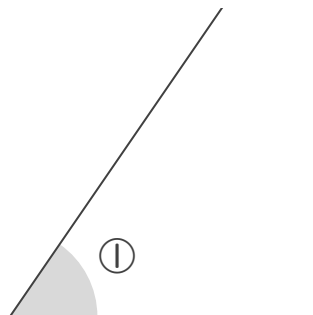
①	°	②	°	③	°	④	°	⑤	°
---	---	---	---	---	---	---	---	---	---

分度器の使い方

____年 ____組 名前

/ 5

■ 次の ① ~ ⑤ の角の大きさを、分度器を使ってはかりましょう。



①	55	°	②	110	°	③	100	°	④	130	°	⑤	45	°
---	----	---	---	-----	---	---	-----	---	---	-----	---	---	----	---