

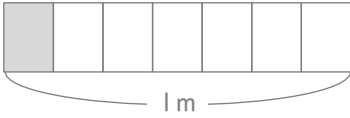
分数

年 組 名前

/ 8

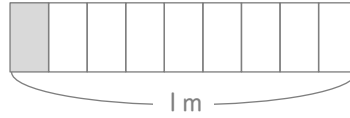
■ 色がついた部分のよこの長さは何mですか。分数で答えましょう。

①



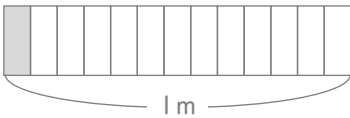
m

⑤



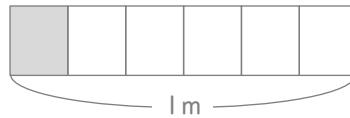
m

②



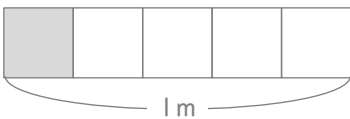
m

⑥



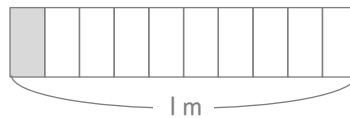
m

③



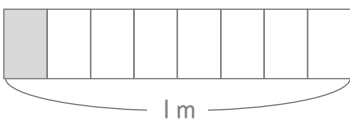
m

⑦



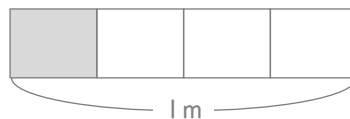
m

④



m

⑧



m

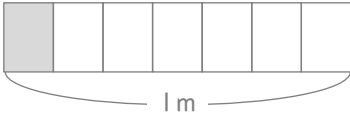
分数

年 組 名前

/ 8

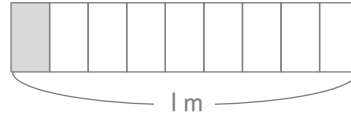
■ 色がついた部分のよこの長さは何mですか。分数で答えましょう。

①



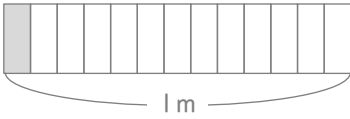
$$\frac{1}{7} \text{ m}$$

⑤



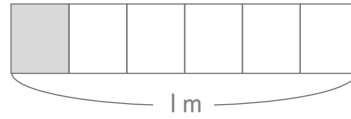
$$\frac{1}{9} \text{ m}$$

②



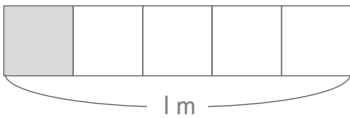
$$\frac{1}{13} \text{ m}$$

⑥



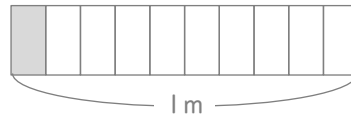
$$\frac{1}{6} \text{ m}$$

③



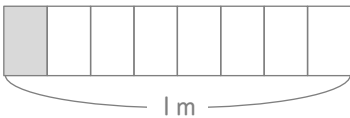
$$\frac{1}{5} \text{ m}$$

⑦



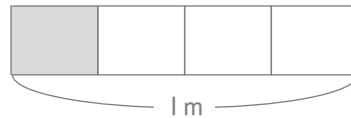
$$\frac{1}{10} \text{ m}$$

④



$$\frac{1}{8} \text{ m}$$

⑧



$$\frac{1}{4} \text{ m}$$