

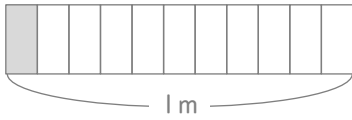
分数

年 組 名前

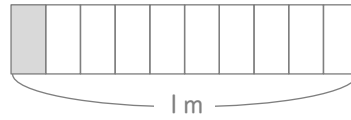
/ 8

■ 色がついた部分のよこの長さは何mですか。分数で答えましょう。

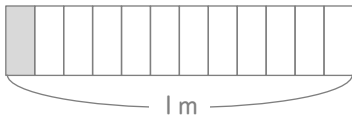
①

 m

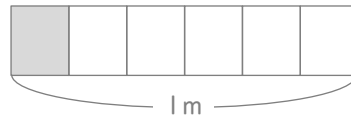
⑤

 m

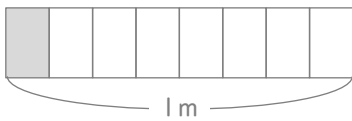
②

 m

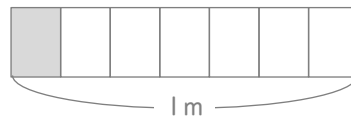
⑥

 m

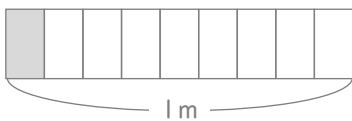
③

 m

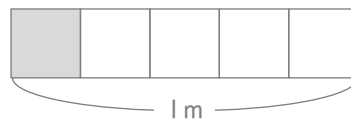
⑦

 m

④

 m

⑧

 m

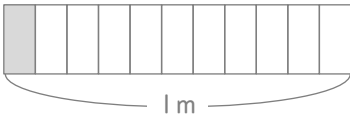
分数

年 組 名前

/ 8

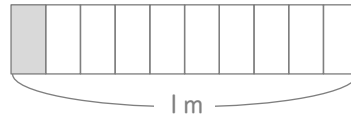
■ 色がついた部分のよこの長さは何mですか。分数で答えましょう。

①



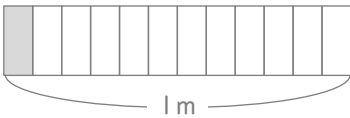
$$\frac{1}{11} \text{ m}$$

⑤



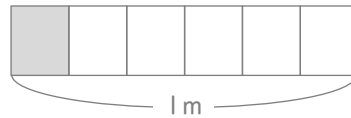
$$\frac{1}{10} \text{ m}$$

②



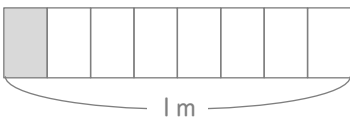
$$\frac{1}{12} \text{ m}$$

⑥



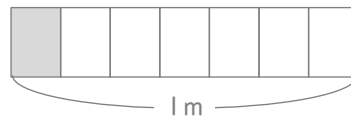
$$\frac{1}{6} \text{ m}$$

③



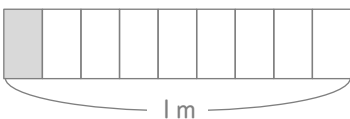
$$\frac{1}{8} \text{ m}$$

⑦



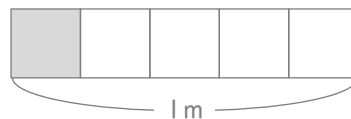
$$\frac{1}{7} \text{ m}$$

④



$$\frac{1}{9} \text{ m}$$

⑧



$$\frac{1}{5} \text{ m}$$