

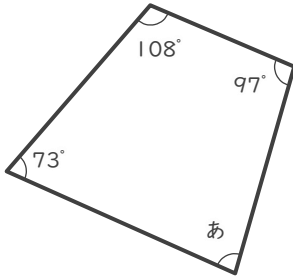
四角形の角の大きさ

年 組 名前

/ 6

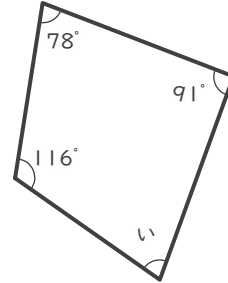
■ つぎの四角形の あ～か の角の大きさを答えましょう。

①



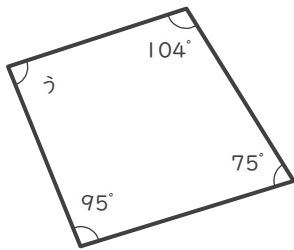
あ

②



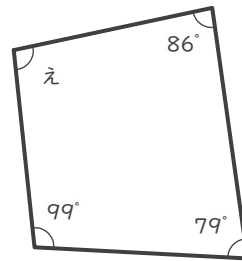
い

③



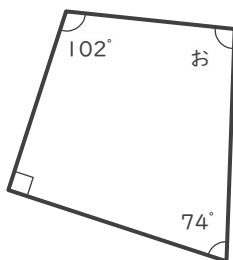
う

④



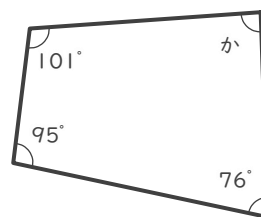
え

⑤



お

⑥



か

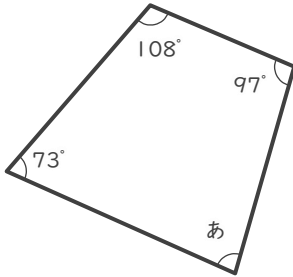
四角形の角の大きさ

年 組 名前

/ 6

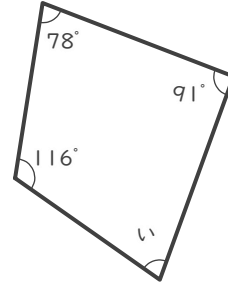
■ つぎの四角形の あ ~ か の角の大きさを答えましょう。

①



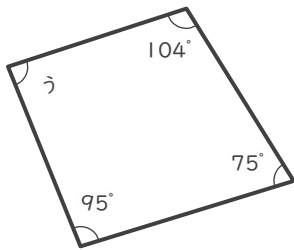
あ 82°

②



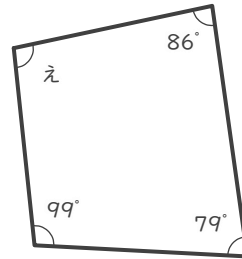
い 75°

③



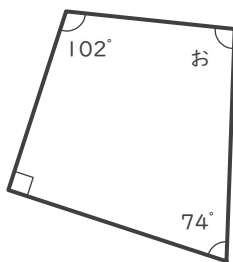
う 86°

④



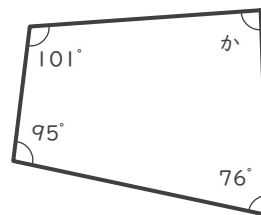
え 96°

⑤



お 94°

⑥



か 88°