

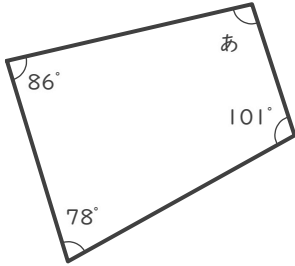
# 四角形の角の大きさ

年 組 名前

/ 6

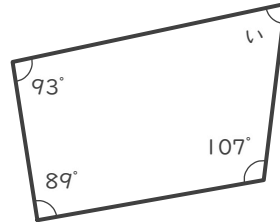
■ つぎの四角形の あ～か の角の大きさを答えましょう。

①



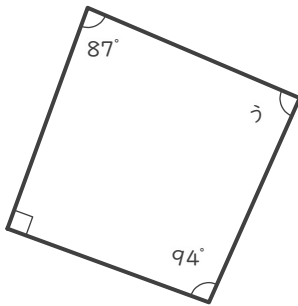
あ

②



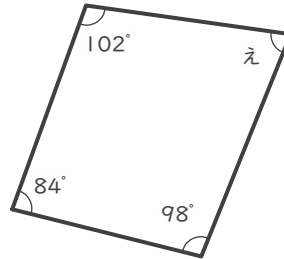
い

③



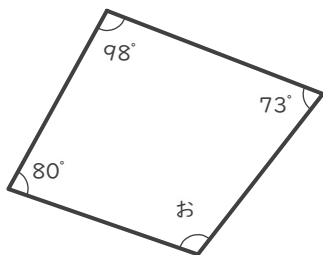
う

④



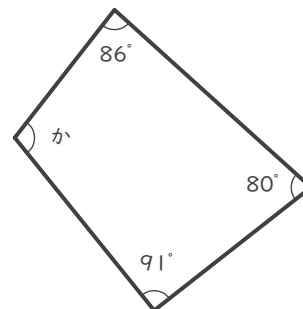
え

⑤



お

⑥



か

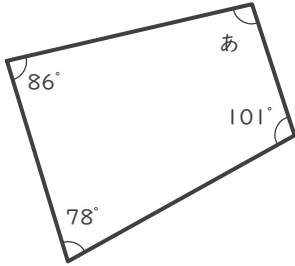
# 四角形の角の大きさ

年 組 名前

/ 6

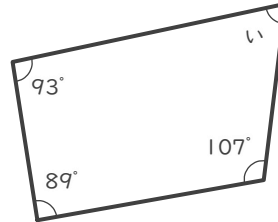
■ つぎの四角形の あ～か の角の大きさを答えましょう。

①



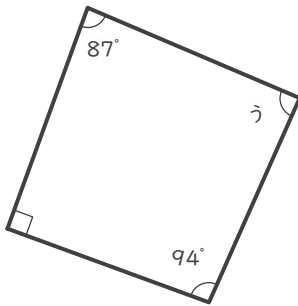
あ  $95^\circ$

②



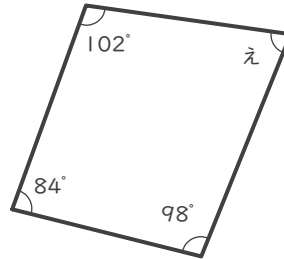
い  $71^\circ$

③



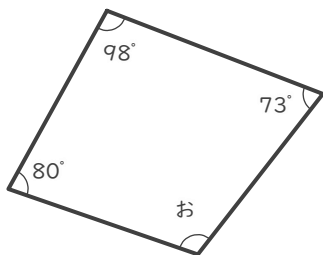
う  $89^\circ$

④



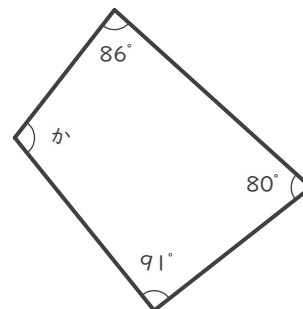
え  $76^\circ$

⑤



お  $109^\circ$

⑥



か  $103^\circ$