


# 3つのかずの たしざん

ねん くみ  
なまえ


/ 5

■ 3つのさいころをなげます。3つのさいころの でためのかず をたしましょう。


①



1つめ



2つめ




3つめ


(しき)

たしたこたえ

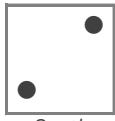
②



1つめ



2つめ




3つめ


(しき)

たしたこたえ

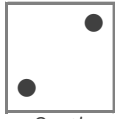
③



1つめ



2つめ




3つめ


(しき)

たしたこたえ


④



1つめ



2つめ




3つめ


(しき)

たしたこたえ


⑤



1つめ



2つめ



3つめ

(しき)

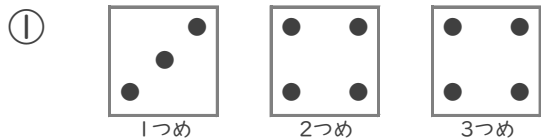
たしたこたえ

# 3つのかずの たしざん

ねん くみ  
なまえ

/ 5

■ 3つのさいころをなげます。3つのさいころの でためのかず をたしましょう。

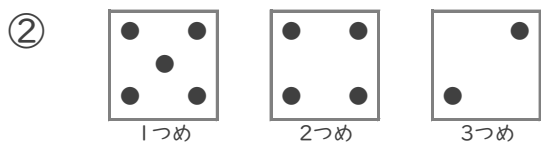


(しき)

$$3 + 4 + 4 = 11$$

たしたこたえ

11

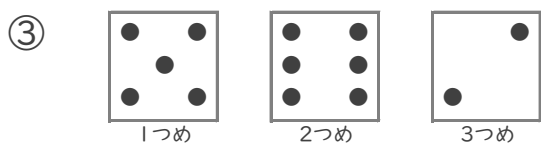


(しき)

$$5 + 4 + 2 = 11$$

たしたこたえ

11

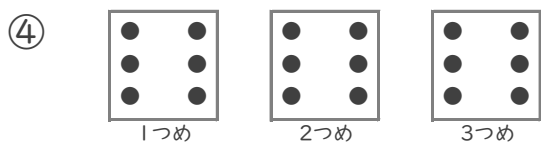


(しき)

$$5 + 6 + 2 = 13$$

たしたこたえ

13

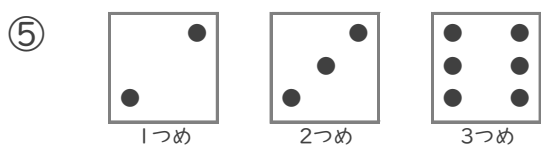


(しき)

$$6 + 6 + 6 = 18$$

たしたこたえ

18



(しき)

$$2 + 3 + 6 = 11$$

たしたこたえ

11