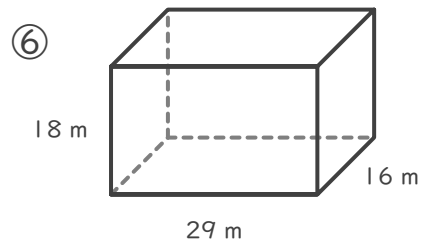
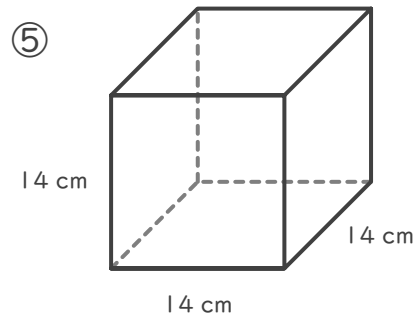
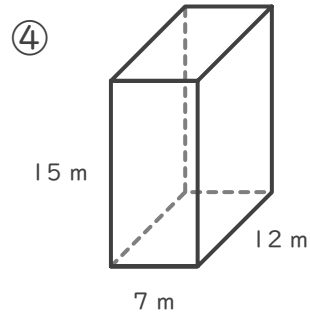
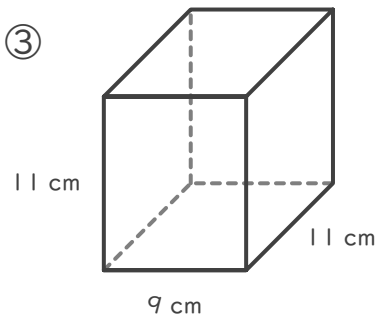
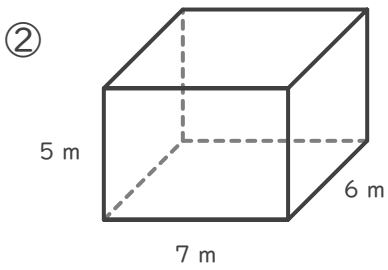
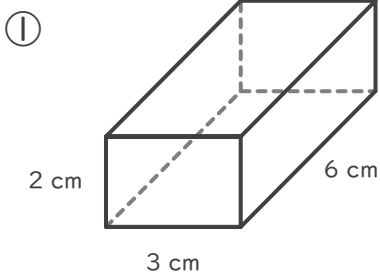
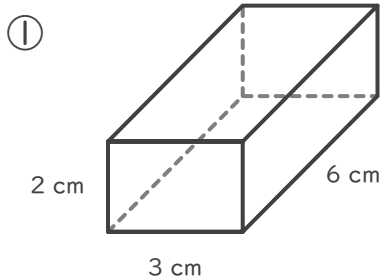


■ 次の直方体や立方体の体積を求めましょう。

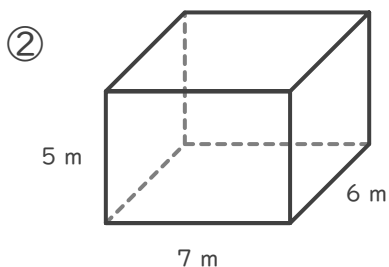


■ 次の直方体や立方体の体積を求めましょう。



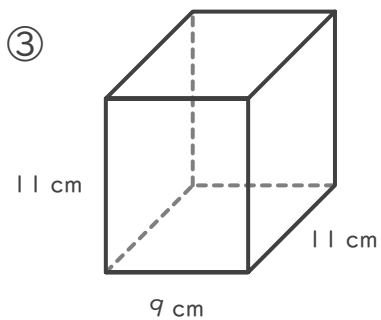
$$6 \times 3 \times 2 = 36$$

$$36 \text{ cm}^3$$



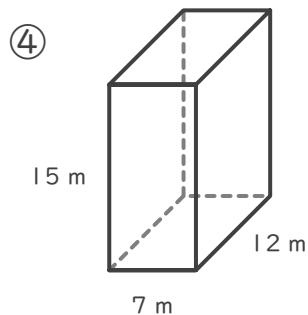
$$6 \times 7 \times 5 = 210$$

$$210 \text{ m}^3$$



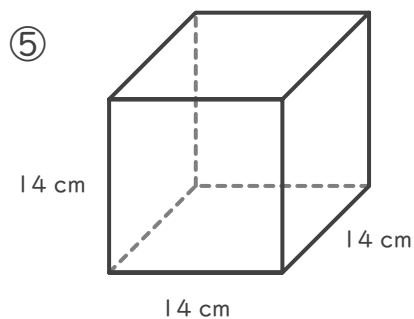
$$11 \times 9 \times 11 = 1089$$

$$1089 \text{ cm}^3$$



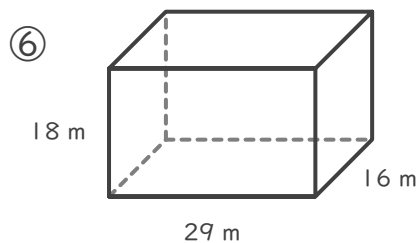
$$12 \times 7 \times 15 = 1260$$

$$1260 \text{ m}^3$$



$$14 \times 14 \times 14 = 2744$$

$$2744 \text{ cm}^3$$



$$16 \times 29 \times 18 = 8352$$

$$8352 \text{ m}^3$$