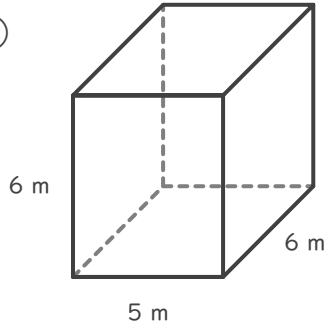
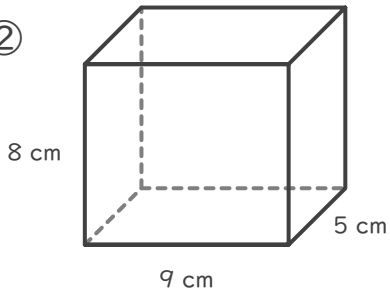


■ 次の直方体や立方体の体積を求めましょう。

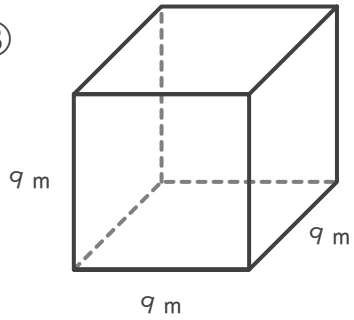
①



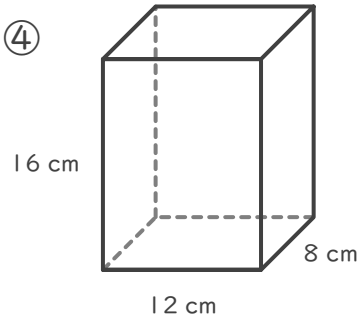
②



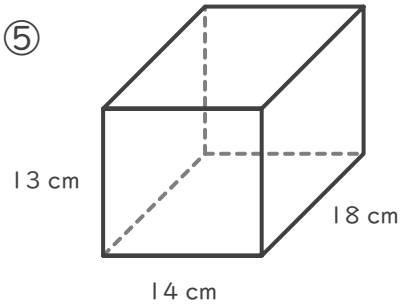
③



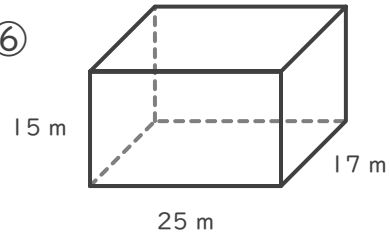
④



⑤

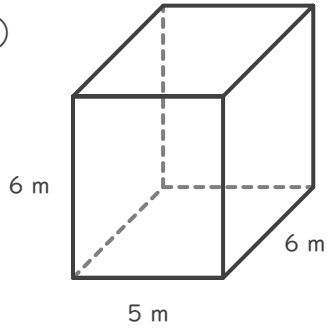


⑥



■ 次の直方体や立方体の体積を求めましょう。

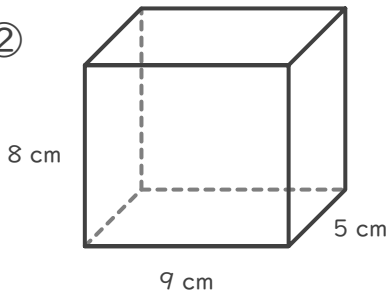
①



$$6 \times 5 \times 6 = 180$$

$$180 \text{ m}^3$$

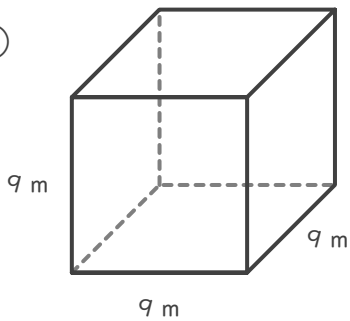
②



$$5 \times 9 \times 8 = 360$$

$$360 \text{ cm}^3$$

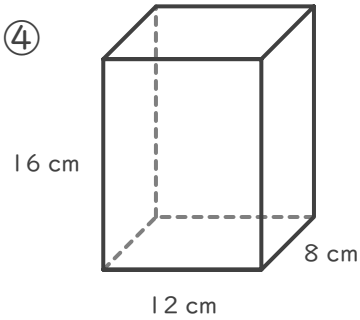
③



$$9 \times 9 \times 9 = 729$$

$$729 \text{ m}^3$$

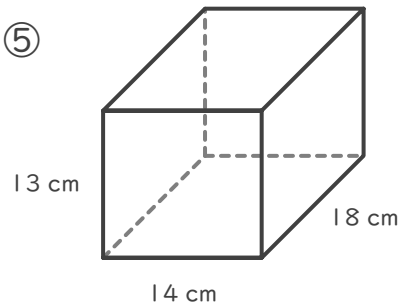
④



$$8 \times 12 \times 16 = 1536$$

$$1536 \text{ cm}^3$$

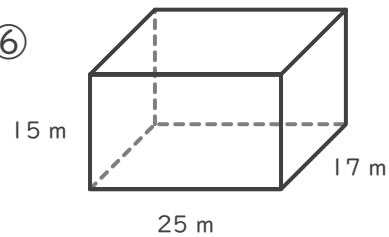
⑤



$$18 \times 14 \times 13 = 3276$$

$$3276 \text{ cm}^3$$

⑥



$$17 \times 25 \times 15 = 6375$$

$$6375 \text{ m}^3$$