


# 面積のじゅんぴ

年 組 名前

/ 6

■ 色がついている部分のます目の数をかぞえましょう。


①



(式)

こ


④



(式)

こ

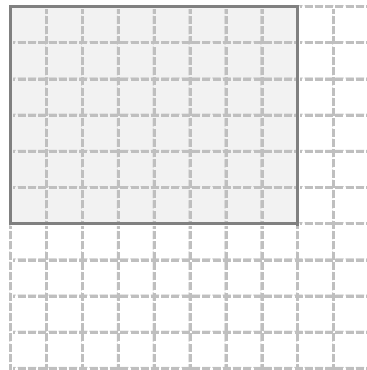
②



(式)

こ


⑤



(式)

こ

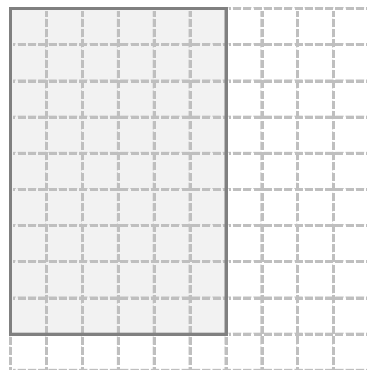
③



(式)

こ

⑥



(式)

こ


# 面積

年 組 名前

/ 6

■ 色がついている部分のます目の数をかぞえましょう。

①




(式)

$$2 \times 3 = 6$$

6 こ

④

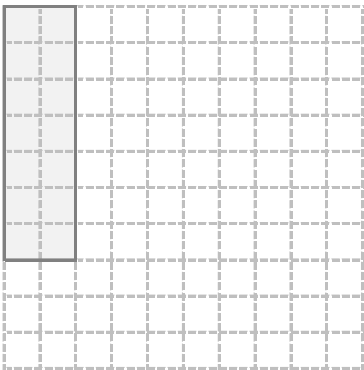


(式)

$$5 \times 5 = 25$$

25 こ

②

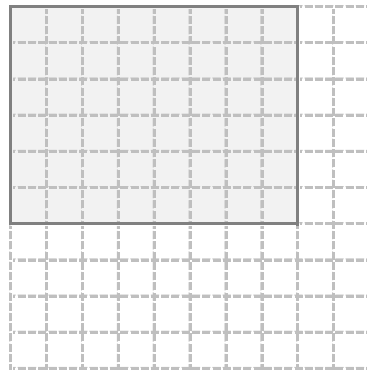


(式)

$$7 \times 2 = 14$$

14 こ

⑤




(式)

$$6 \times 8 = 48$$

48 こ

③

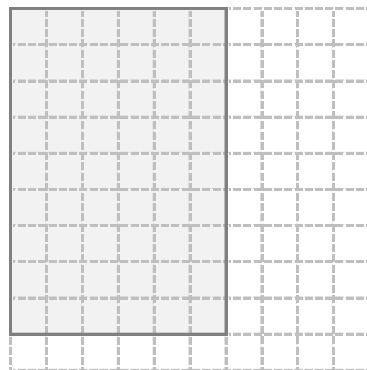


(式)

$$3 \times 7 = 21$$

21 こ

⑥



(式)

$$9 \times 6 = 54$$

54 こ