


面積のじゅんぴ

年 組 名前

/ 6


■ 色がついている部分のます目の数をかぞえましょう。

①




(式)

④




(式)

②




(式)

⑤




(式)

③



(式)

⑥



(式)


面積

年 組 名前

/ 6

■ 色がついている部分のます目の数をかぞえましょう。

①




(式)

$$2 \times 2 = 4$$

4

こ

④




(式)

$$7 \times 5 = 35$$

35

こ

②




(式)

$$6 \times 3 = 18$$

18

こ

⑤




(式)

$$5 \times 8 = 40$$

40

こ

③




(式)

$$4 \times 6 = 24$$

24

こ

⑥



(式)

$$9 \times 7 = 63$$

63

こ