


# 面積のじゅんぴ

年 組 名前

/ 6


■ 色がついている部分のます目の数をかぞえましょう。

①




(式)

④



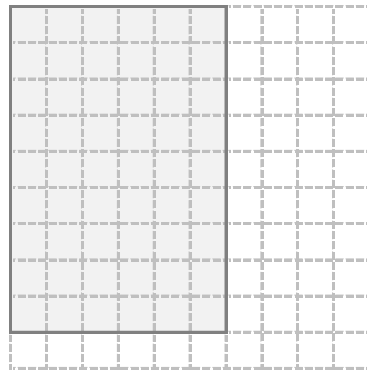
(式)

②




(式)

⑤




(式)

③



(式)

⑥



(式)


# 面積

年 組 名前

/ 6

■ 色がついている部分のます目の数をかぞえましょう。

①




(式)

$$2 \times 4 = 8$$

8

こ

④




(式)

$$5 \times 8 = 40$$

40

こ

②



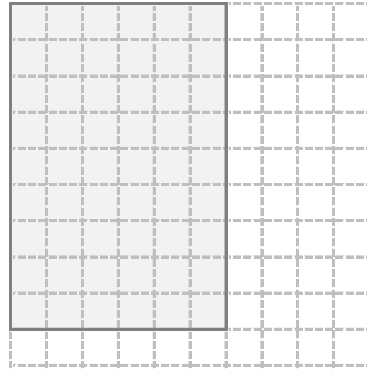
(式)

$$3 \times 5 = 15$$

15

こ

⑤




(式)

$$9 \times 6 = 54$$

54

こ

③




(式)

$$4 \times 7 = 28$$

28

こ

⑥



(式)

$$7 \times 9 = 63$$

63

こ