

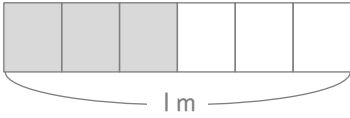
# 分数

年 組 名前

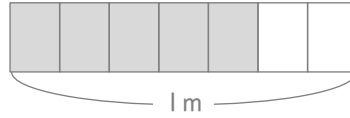
/ 8

■ 色がついた部分の横の長さは何mですか。分数で答えましょう。

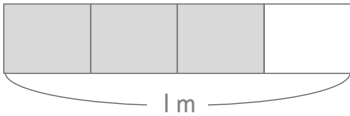
①

 m

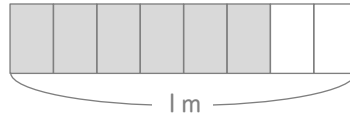
⑤

 m

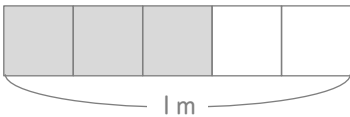
②

 m

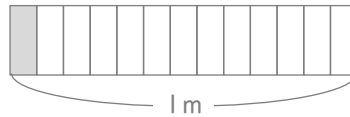
⑥

 m

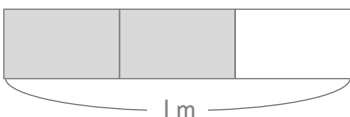
③

 m

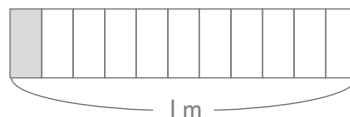
⑦

 m

④

 m

⑧

 m

# 分数

年 組 名前

/ 8

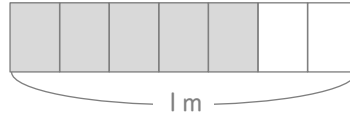
■ 色がついた部分の横の長さは何mですか。分数で答えましょう。

①



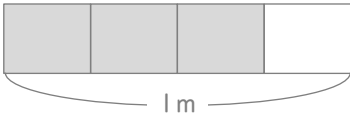
$$\frac{3}{6} \text{ m}$$

⑤



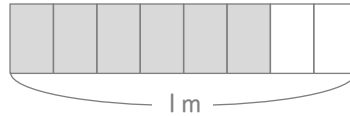
$$\frac{5}{7} \text{ m}$$

②



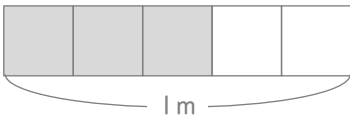
$$\frac{3}{4} \text{ m}$$

⑥



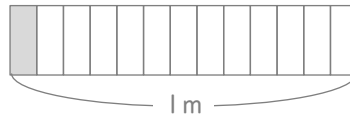
$$\frac{6}{8} \text{ m}$$

③



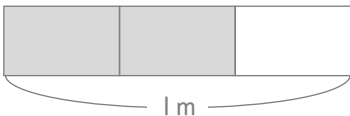
$$\frac{3}{5} \text{ m}$$

⑦



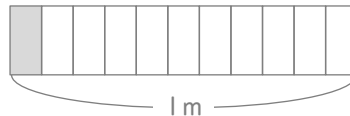
$$\frac{1}{13} \text{ m}$$

④



$$\frac{2}{3} \text{ m}$$

⑧



$$\frac{1}{11} \text{ m}$$