

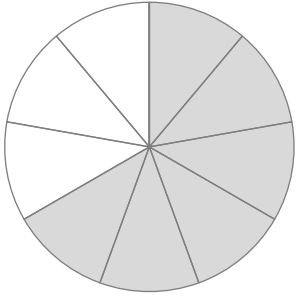
# 分数

年 組 名前

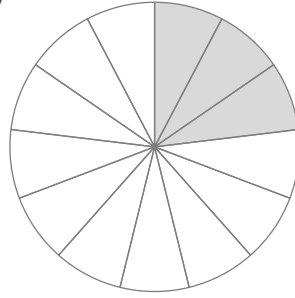
/ 8

■ 色がついた部分は、円全体の 何分の何 の大きさですか。

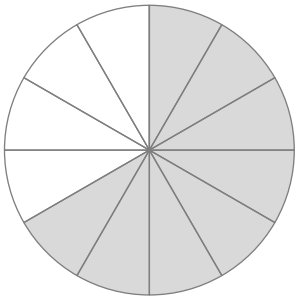
①



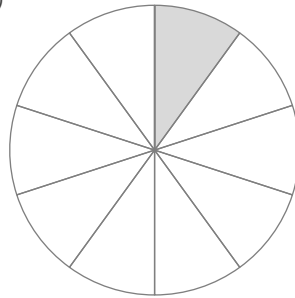
⑤



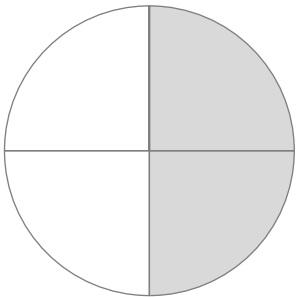
②



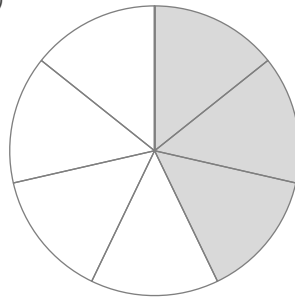
⑥



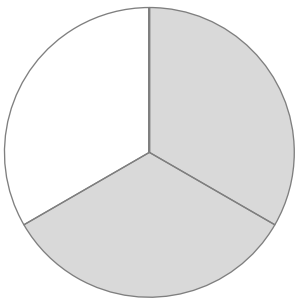
③



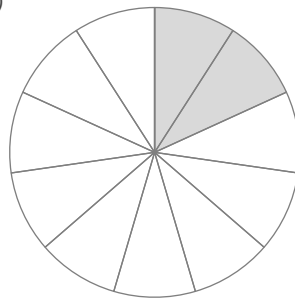
⑦



④



⑧



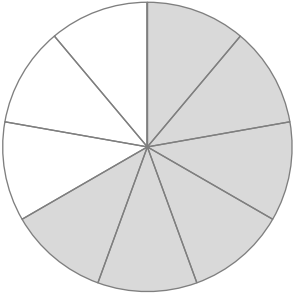
# 分数

年 組 名前

/ 8

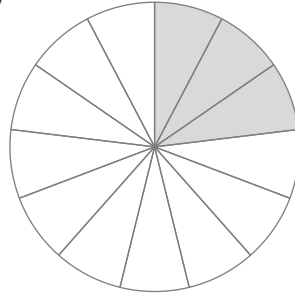
■ 色がついた部分は、円全体の 何分の何 の大きさですか。

①



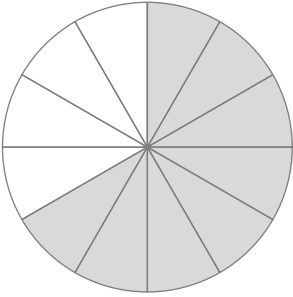
$$\frac{6}{9}$$

⑤



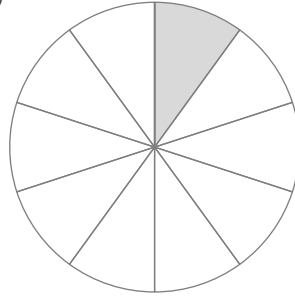
$$\frac{3}{13}$$

②



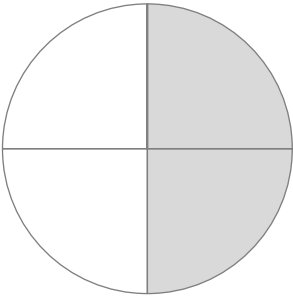
$$\frac{8}{12}$$

⑥



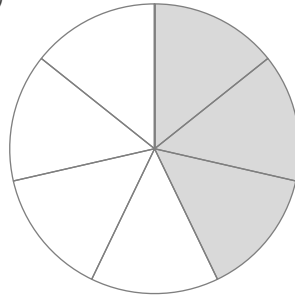
$$\frac{1}{10}$$

③



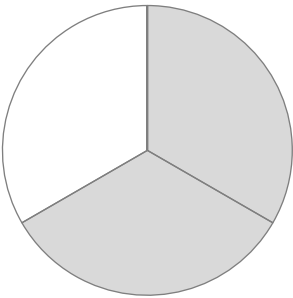
$$\frac{2}{4}$$

⑦



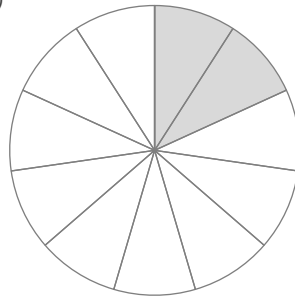
$$\frac{3}{7}$$

④



$$\frac{2}{3}$$

⑧



$$\frac{2}{11}$$