

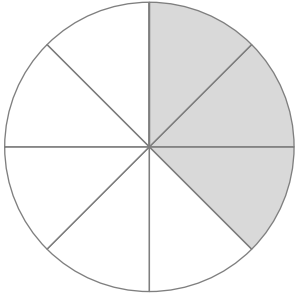
分数

年 組 名前

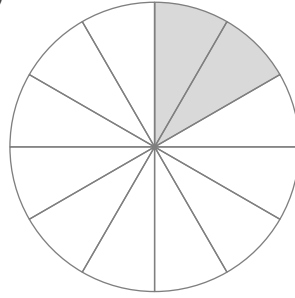
/ 8

■ 色がついた部分は、円全体の 何分の何 の大きさですか。

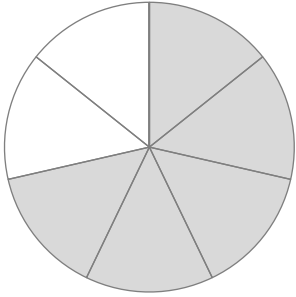
①



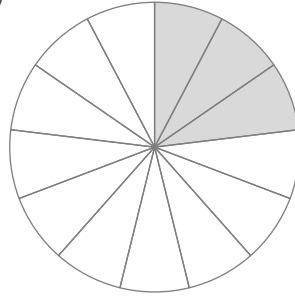
⑤



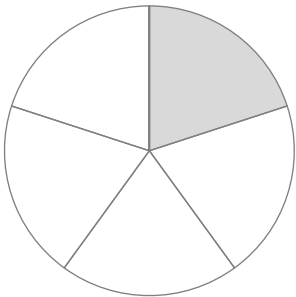
②



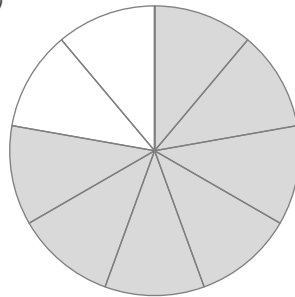
⑥



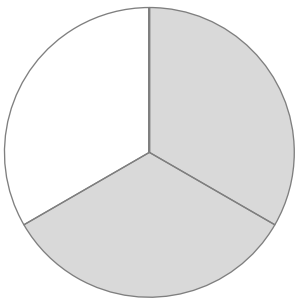
③



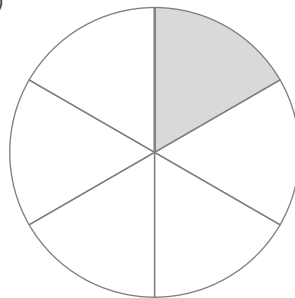
⑦



④

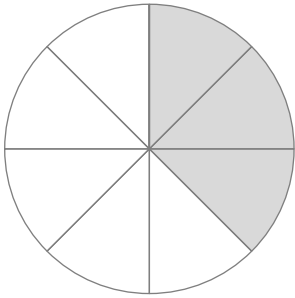


⑧



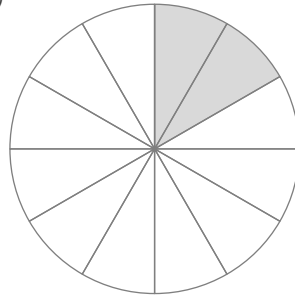
■ 色がついた部分は、円全体の 何分の何 の大きさですか。

①



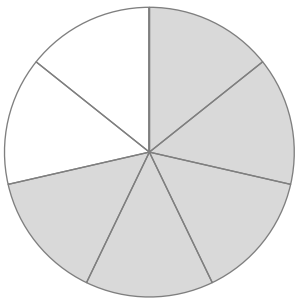
$$\frac{3}{8}$$

⑤



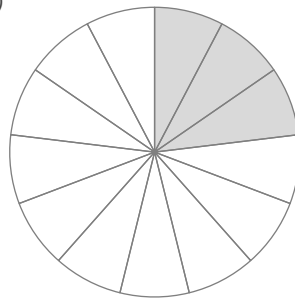
$$\frac{2}{12}$$

②



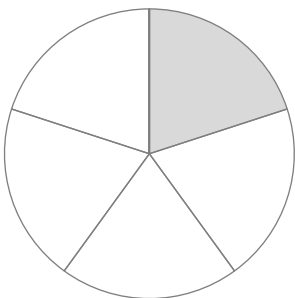
$$\frac{5}{7}$$

⑥



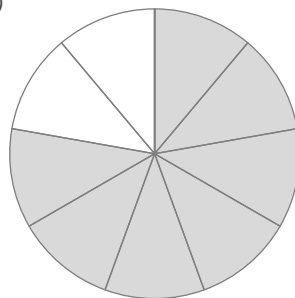
$$\frac{3}{13}$$

③



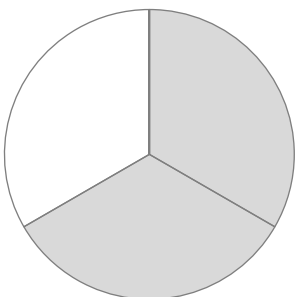
$$\frac{1}{5}$$

⑦



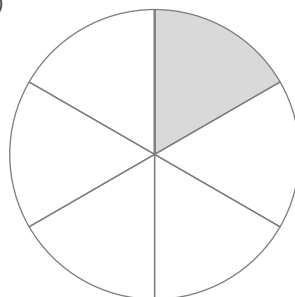
$$\frac{7}{9}$$

④



$$\frac{2}{3}$$

⑧



$$\frac{1}{6}$$