

分数

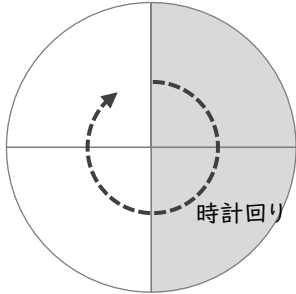
年 組 名前

/7

■ 次の大きさになるように、上から時計回りに色をぬりましょう。

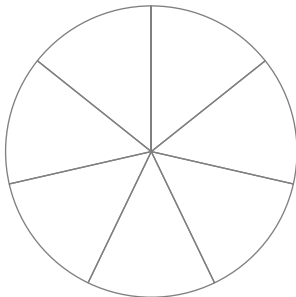
例

$$\frac{2}{4}$$



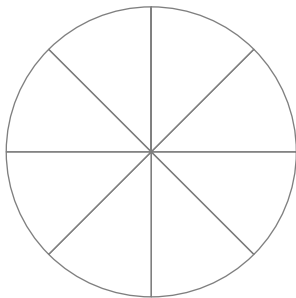
①

$$\frac{4}{7}$$



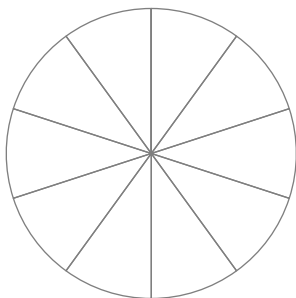
②

$$\frac{5}{8}$$



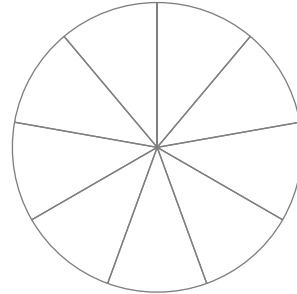
③

$$\frac{7}{10}$$



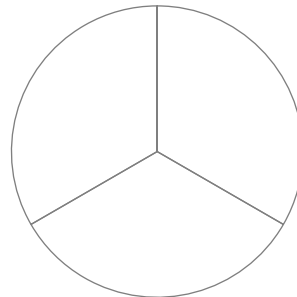
④

$$\frac{3}{9}$$



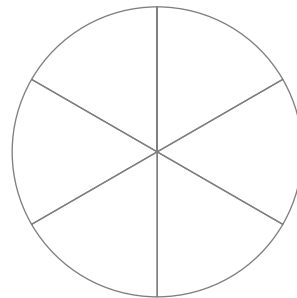
⑤

$$\frac{2}{3}$$



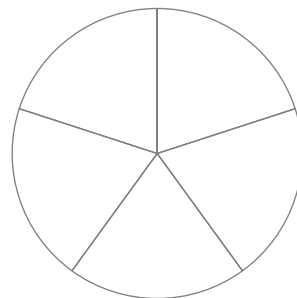
⑥

$$\frac{4}{6}$$



⑦

$$\frac{2}{5}$$



分数

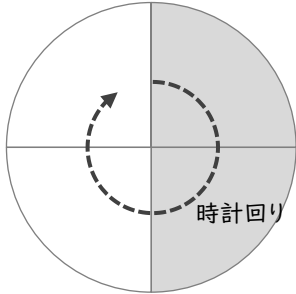
年 組 名前

/7

■ 次の大きさになるように、上から時計回りに色をぬりましょう。

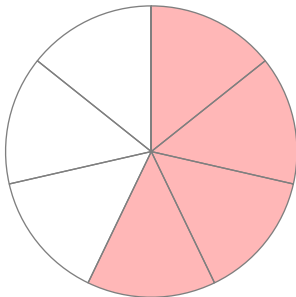
例

$$\frac{2}{4}$$



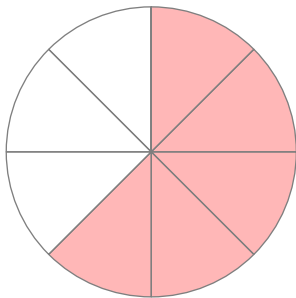
①

$$\frac{4}{7}$$



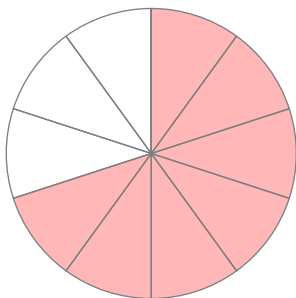
②

$$\frac{5}{8}$$



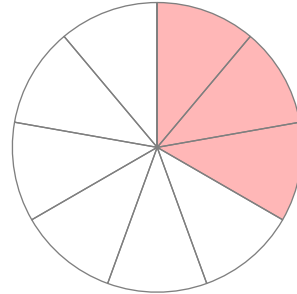
③

$$\frac{7}{10}$$



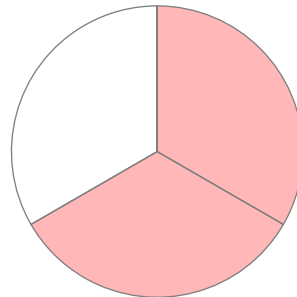
④

$$\frac{3}{9}$$



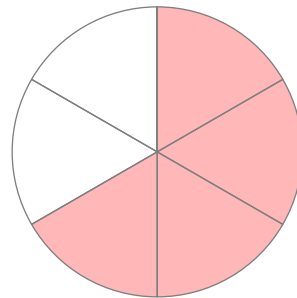
⑤

$$\frac{2}{3}$$



⑥

$$\frac{4}{6}$$



⑦

$$\frac{2}{5}$$

