

反比例の式とグラフ

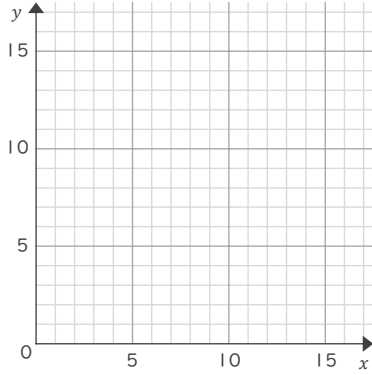
年 組 名前

/ 6

■ 次の反比例の式について、 x と y の値の関係を示した表をうめて、グラフをかきましょう。

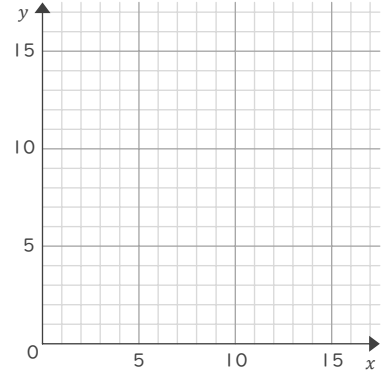
① $y = 30 \div x$

x	1	2	3	5	6	10	15	30
y								



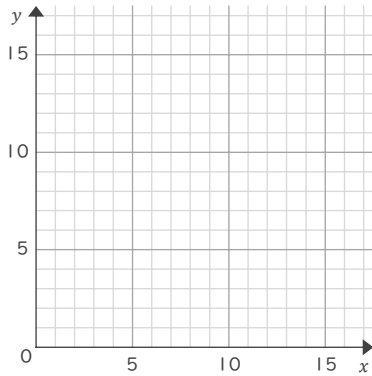
④ $y = 36 \div x$

x	1	2	3	4	6	9	12	18	36
y									



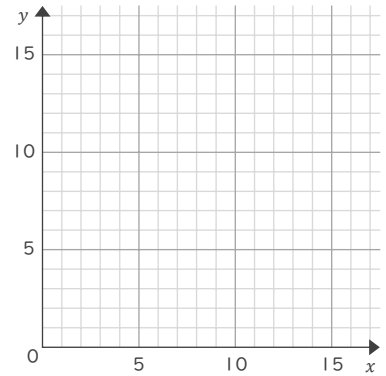
② $y = 90 \div x$

x	1	2	3	5	6	9	10	15	18	30	45	90
y												



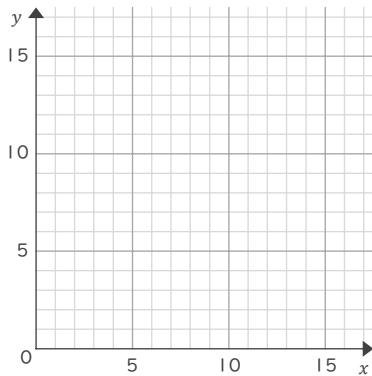
⑤ $y = 16 \div x$

x	1	2	4	8	16
y					



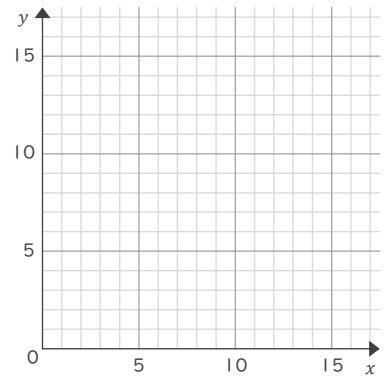
③ $y = 80 \div x$

x	1	2	4	5	8	10	16	20	40	80
y										



⑥ $y = 70 \div x$

x	1	2	5	7	10	14	35	70
y								



反比例の式とグラフ

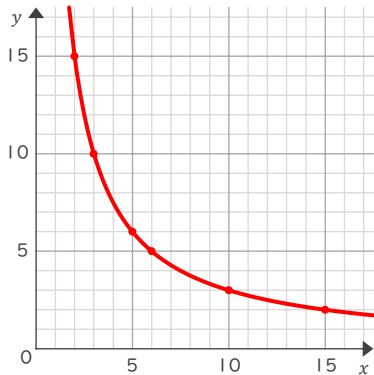
年 組 名前

/ 6

■ 次の反比例の式について、 x と y の値の関係を示した表をうめて、グラフをかきましょう。

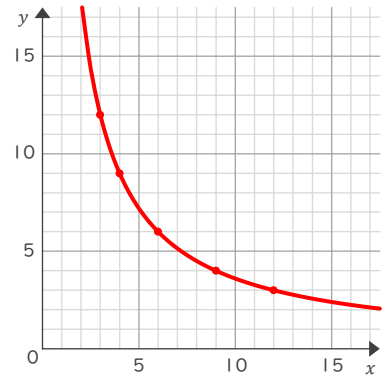
① $y = 30 \div x$

x	1	2	3	5	6	10	15	30
y	30	15	10	6	5	3	2	1



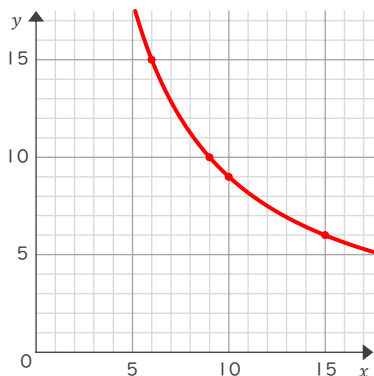
④ $y = 36 \div x$

x	1	2	3	4	6	9	12	18	36
y	36	18	12	9	6	4	3	2	1



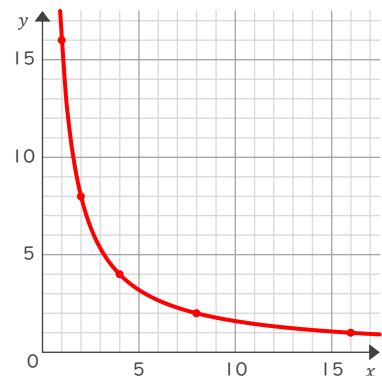
② $y = 90 \div x$

x	1	2	3	5	6	9	10	15	18	30	45	90
y	90	45	30	18	15	10	9	6	5	3	2	1



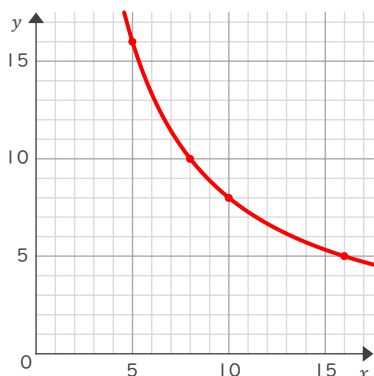
⑤ $y = 16 \div x$

x	1	2	4	8	16
y	16	8	4	2	1



③ $y = 80 \div x$

x	1	2	4	5	8	10	16	20	40	80
y	80	40	20	16	10	8	5	4	2	1



⑥ $y = 70 \div x$

x	1	2	5	7	10	14	35	70
y	70	35	14	10	7	5	2	1

