

長方形や正方形の面積

年 組 名前

/16

■ つぎの()にあてはまる長さをそれぞれ答えましょう。

①

2m 16 m^2
()

(式)

②

() 35 km^2
5km

(式)

③

8cm 48 cm^2
()

(式)

④

3mm 24 mm^2
()

(式)

⑤

6cm 54 cm^2
()

(式)

⑥

() 10 m^2
5m

(式)

⑦

() 28 mm^2
7mm

(式)

⑧

7km 49 km^2
()

(式)

⑨

3mm 15 mm^2
()

(式)

⑩

4cm 36 cm^2
()

(式)

⑪

8km 56 km^2
()

(式)

⑫

() 36 m^2
6m

(式)

⑬

() 32 mm^2
4mm

(式)

⑭

() 6 m^2
3m

(式)

⑮

4cm 20 cm^2
()

(式)

⑯

() 8 km^2
2km

(式)

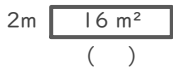
長方形や正方形の面積

年 組 名前

/16

■ つぎの()にあてはまる長さをそれぞれ答えましょう。

①

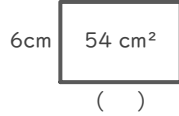


(式)

$$16 \div 2 = 8$$

8 m

⑤

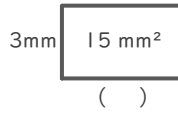


(式)

$$54 \div 6 = 9$$

9 cm

⑨

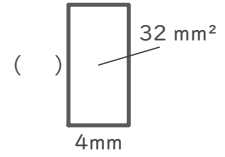


(式)

$$15 \div 3 = 5$$

5 mm

⑬

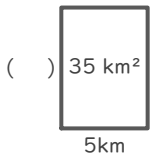


(式)

$$32 \div 4 = 8$$

8 mm

②

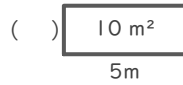


(式)

$$35 \div 5 = 7$$

7 km

⑥

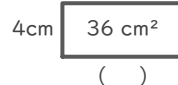


(式)

$$10 \div 5 = 2$$

2 m

⑩

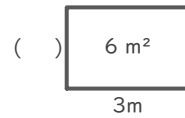


(式)

$$36 \div 4 = 9$$

9 cm

⑭

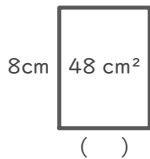


(式)

$$6 \div 3 = 2$$

2 m

③

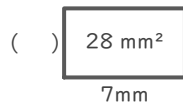


(式)

$$48 \div 8 = 6$$

6 cm

⑦

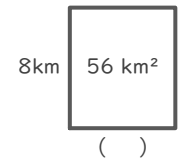


(式)

$$28 \div 7 = 4$$

4 mm

⑪

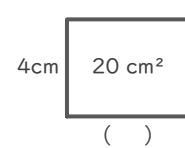


(式)

$$56 \div 8 = 7$$

7 km

⑮

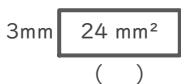


(式)

$$20 \div 4 = 5$$

5 cm

④

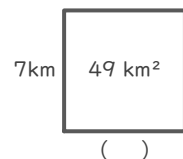


(式)

$$24 \div 3 = 8$$

8 mm

⑧

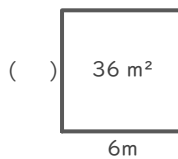


(式)

$$49 \div 7 = 7$$

7 km

⑫

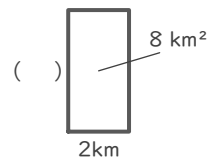


(式)

$$36 \div 6 = 6$$

6 m

⑯



(式)

$$8 \div 2 = 4$$

4 km